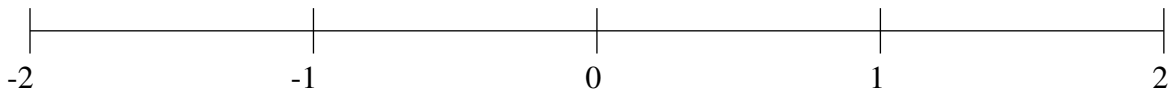


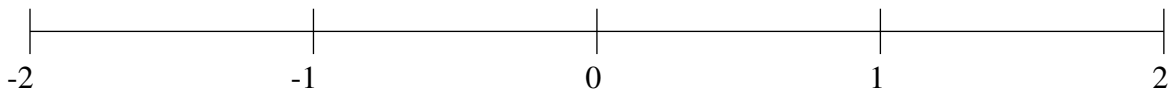
Classification de Fractions (G)

À l'aide des droites numériques, classifiez chaque série de fractions ci-dessous en ordre croissant.

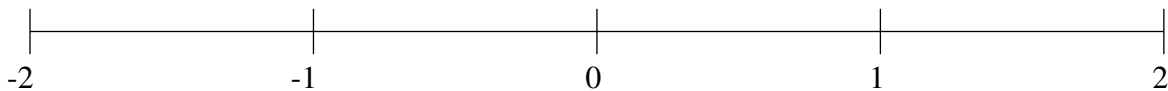
$$\frac{17}{59}, \frac{67}{85}, -1\frac{1}{8}, -\frac{1}{3}, 1\frac{1}{2}$$



$$1\frac{7}{8}, -\frac{31}{36}, \frac{2}{3}, \frac{1}{4}, -1\frac{1}{2}$$



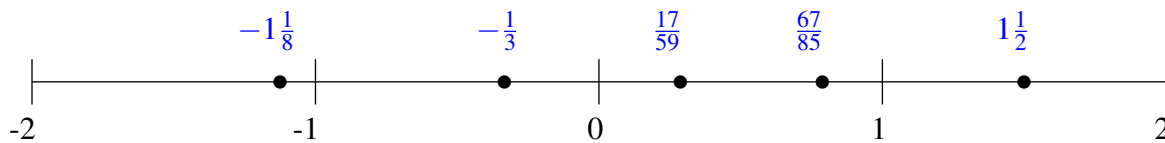
$$-1\frac{26}{47}, \frac{1}{28}, -1\frac{1}{7}, \frac{3}{8}, 1\frac{35}{48}$$



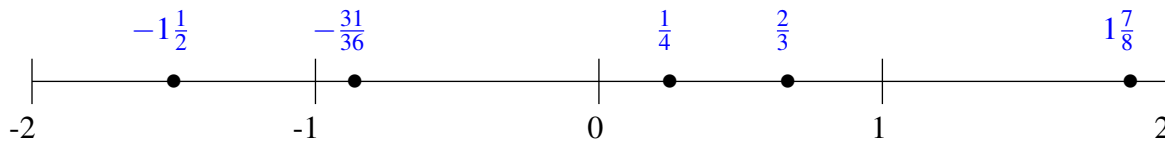
Classification de Fractions (G) Solutions

À l'aide des droites numériques, classifiez chaque série de fractions ci-dessous en ordre croissant.

$$\frac{17}{59}, \frac{67}{85}, -1\frac{1}{8}, -\frac{1}{3}, 1\frac{1}{2}$$



$$1\frac{7}{8}, -\frac{31}{36}, \frac{2}{3}, \frac{1}{4}, -1\frac{1}{2}$$



$$-1\frac{26}{47}, \frac{1}{28}, -1\frac{1}{7}, \frac{3}{8}, 1\frac{35}{48}$$

