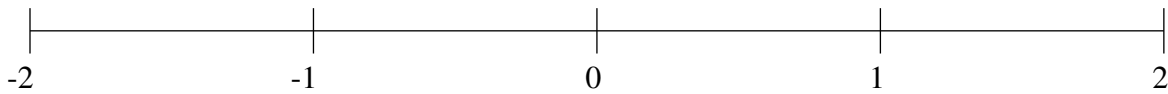


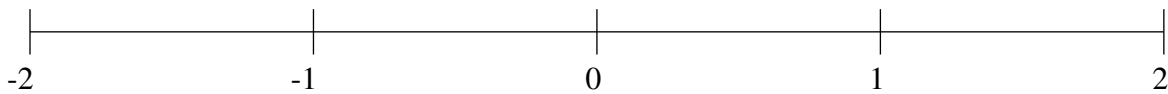
Classification de Fractions (E)

À l'aide des droites numériques, classifiez chaque série de fractions ci-dessous en ordre croissant.

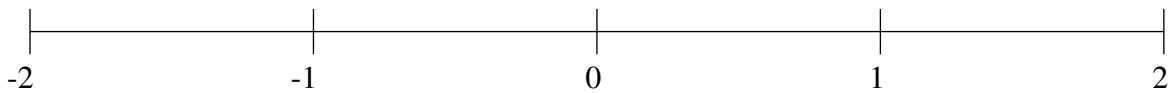
$$-\frac{12}{29}, -\frac{17}{18}, -1\frac{19}{26}, 1\frac{25}{26}, 1\frac{12}{35}$$



$$\frac{1}{3}, \frac{3}{4}, -\frac{53}{74}, -1\frac{3}{4}, -1\frac{1}{4}$$



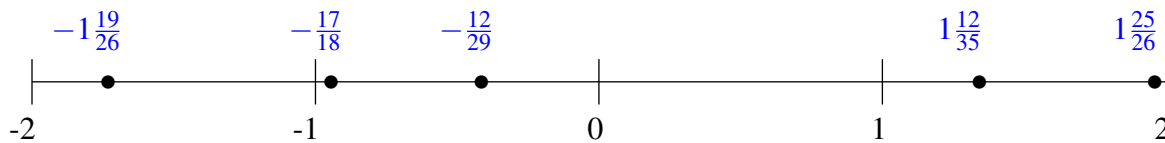
$$1\frac{2}{5}, 1\frac{3}{4}, -1\frac{2}{11}, \frac{17}{30}, \frac{3}{19}$$



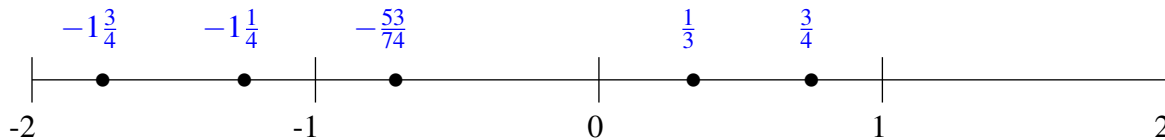
Classification de Fractions (E) Solutions

À l'aide des droites numériques, classifiez chaque série de fractions ci-dessous en ordre croissant.

$$-\frac{12}{29}, -\frac{17}{18}, -1\frac{19}{26}, 1\frac{25}{26}, 1\frac{12}{35}$$



$$\frac{1}{3}, \frac{3}{4}, -\frac{53}{74}, -1\frac{3}{4}, -1\frac{1}{4}$$



$$1\frac{2}{5}, 1\frac{3}{4}, -1\frac{2}{11}, \frac{17}{30}, \frac{3}{19}$$

