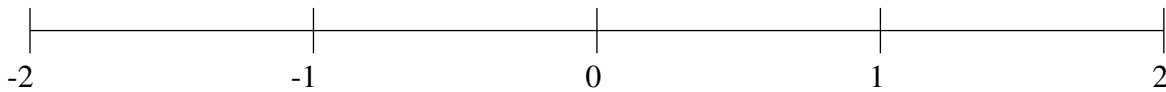


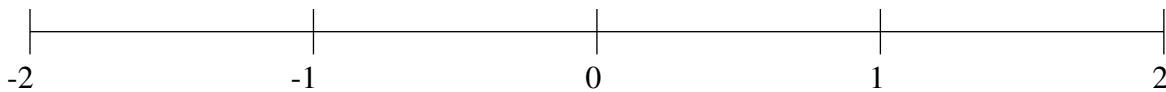
Classification de Fractions (D)

À l'aide des droites numériques, classifiez chaque série de fractions ci-dessous en ordre croissant.

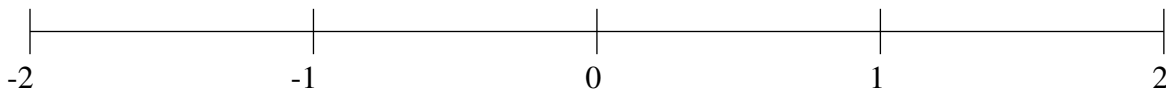
$$\frac{25}{28}, -1\frac{1}{6}, 1\frac{3}{14}, -1\frac{25}{33}, -\frac{1}{18}$$



$$\frac{3}{7}, 1\frac{5}{7}, -\frac{19}{21}, -1\frac{3}{7}, -1\frac{41}{48}$$



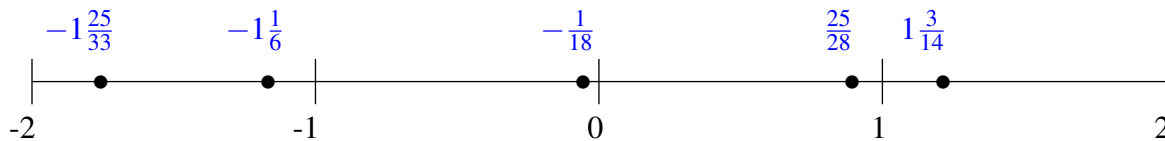
$$\frac{77}{97}, 1\frac{17}{36}, -1\frac{13}{70}, -\frac{3}{5}, -\frac{1}{5}$$



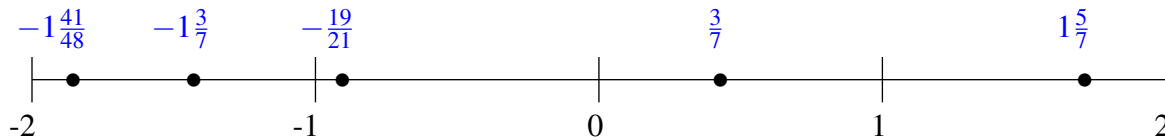
Classification de Fractions (D) Solutions

À l'aide des droites numériques, classifiez chaque série de fractions ci-dessous en ordre croissant.

$$\frac{25}{28}, -1\frac{1}{6}, 1\frac{3}{14}, -1\frac{25}{33}, -\frac{1}{18}$$



$$\frac{3}{7}, 1\frac{5}{7}, -\frac{19}{21}, -1\frac{3}{7}, -1\frac{41}{48}$$



$$\frac{77}{97}, 1\frac{17}{36}, -1\frac{13}{70}, -\frac{3}{5}, -\frac{1}{5}$$

