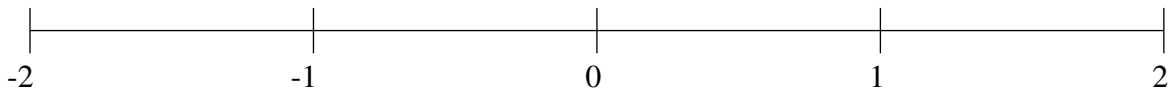


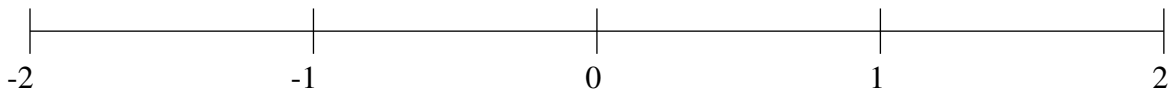
Classification de Fractions (B)

À l'aide des droites numériques, classifiez chaque série de fractions ci-dessous en ordre croissant.

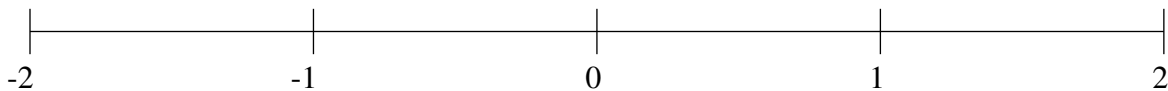
$$-1\frac{1}{3}, -1\frac{64}{65}, 1\frac{1}{4}, -\frac{1}{3}, \frac{2}{3}$$



$$1\frac{3}{4}, \frac{13}{51}, -1\frac{1}{2}, -\frac{7}{57}, -1\frac{1}{18}$$



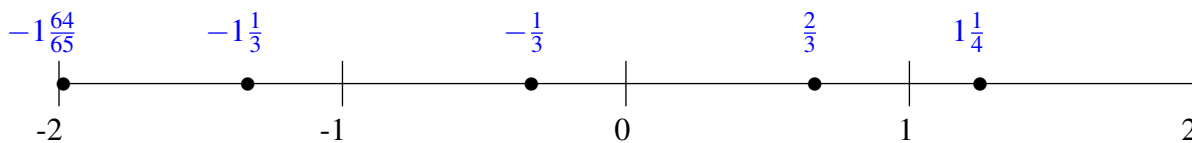
$$-1\frac{16}{17}, 1\frac{1}{2}, -\frac{8}{9}, -\frac{3}{65}, -\frac{1}{2}$$



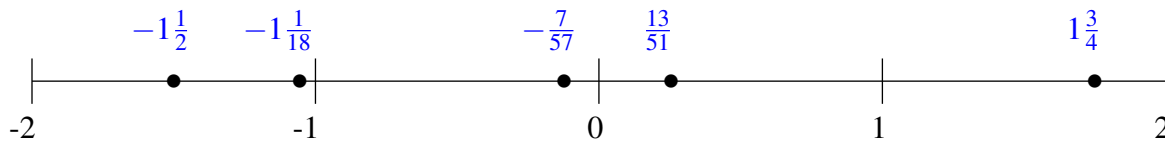
Classification de Fractions (B) Solutions

À l'aide des droites numériques, classifiez chaque série de fractions ci-dessous en ordre croissant.

$$-1\frac{1}{3}, -1\frac{64}{65}, 1\frac{1}{4}, -\frac{1}{3}, \frac{2}{3}$$



$$1\frac{3}{4}, \frac{13}{51}, -1\frac{1}{2}, -\frac{7}{57}, -1\frac{1}{18}$$



$$-1\frac{16}{17}, 1\frac{1}{2}, -\frac{8}{9}, -\frac{3}{65}, -\frac{1}{2}$$

