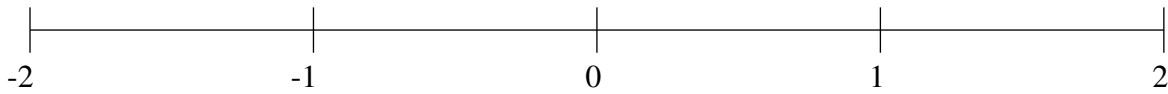


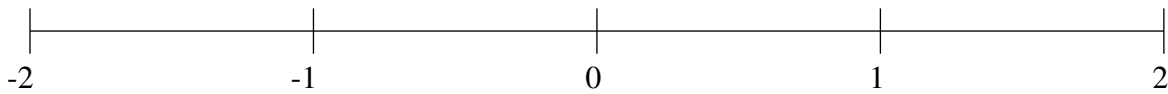
Classification de Fractions (G)

À l'aide des droites numériques, classifiez chaque série de fractions ci-dessous en ordre croissant.

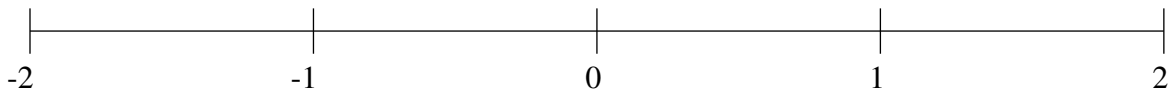
$$1\frac{1}{4}, 1\frac{3}{4}, -1\frac{3}{50}, -\frac{1}{4}, \frac{1}{2}$$



$$1\frac{3}{4}, \frac{1}{2}, -\frac{3}{4}, -1\frac{2}{5}, -\frac{8}{25}$$



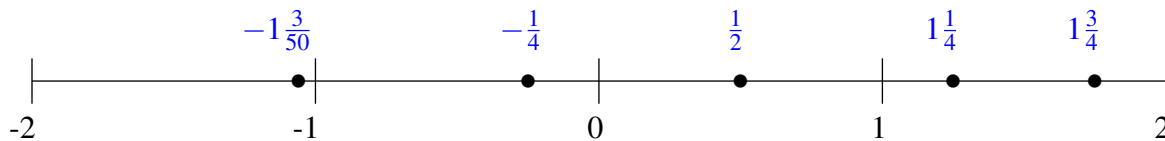
$$1\frac{3}{4}, -1\frac{1}{2}, 1\frac{1}{4}, \frac{1}{5}, -1\frac{4}{5}$$



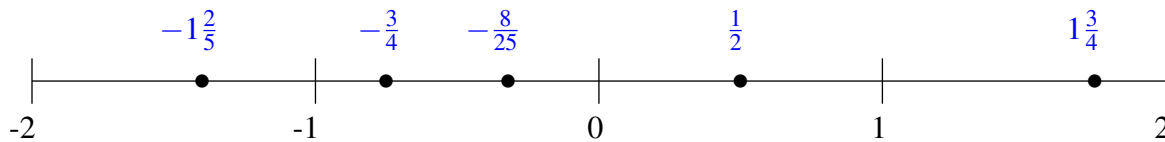
Classification de Fractions (G) Solutions

À l'aide des droites numériques, classifiez chaque série de fractions ci-dessous en ordre croissant.

$$1\frac{1}{4}, 1\frac{3}{4}, -1\frac{3}{50}, -\frac{1}{4}, \frac{1}{2}$$



$$1\frac{3}{4}, \frac{1}{2}, -\frac{3}{4}, -1\frac{2}{5}, -\frac{8}{25}$$



$$1\frac{3}{4}, -1\frac{1}{2}, 1\frac{1}{4}, \frac{1}{5}, -1\frac{4}{5}$$

