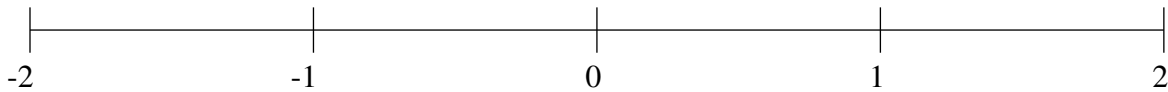


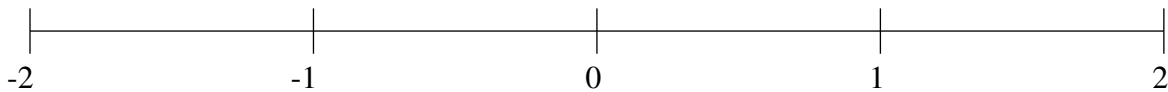
Classification de Fractions (E)

À l'aide des droites numériques, classifiez chaque série de fractions ci-dessous en ordre croissant.

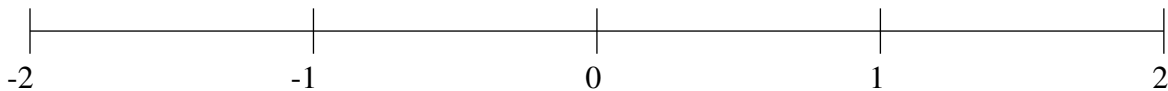
$$-1\frac{1}{4}, \frac{4}{5}, 1\frac{3}{10}, \frac{1}{2}, 1\frac{3}{5}$$



$$\frac{3}{10}, 1\frac{4}{5}, -1\frac{3}{4}, -\frac{1}{2}, \frac{3}{4}$$



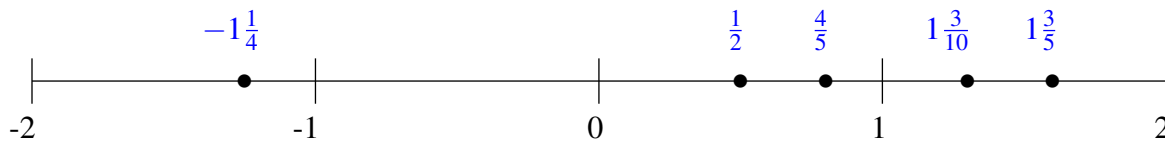
$$-1\frac{37}{50}, 1\frac{1}{2}, \frac{1}{4}, 1\frac{3}{20}, -1\frac{1}{5}$$



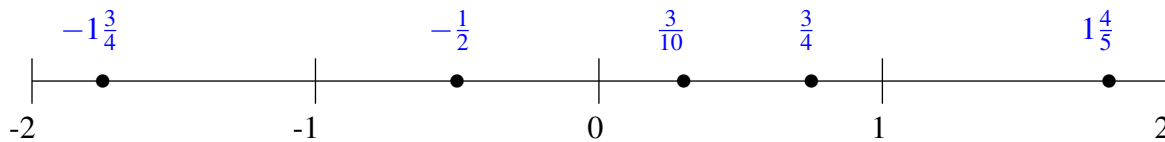
Classification de Fractions (E) Solutions

À l'aide des droites numériques, classifiez chaque série de fractions ci-dessous en ordre croissant.

$$-1\frac{1}{4}, \frac{4}{5}, 1\frac{3}{10}, \frac{1}{2}, 1\frac{3}{5}$$



$$\frac{3}{10}, 1\frac{4}{5}, -1\frac{3}{4}, -\frac{1}{2}, \frac{3}{4}$$



$$-1\frac{37}{50}, 1\frac{1}{2}, \frac{1}{4}, 1\frac{3}{20}, -1\frac{1}{5}$$

