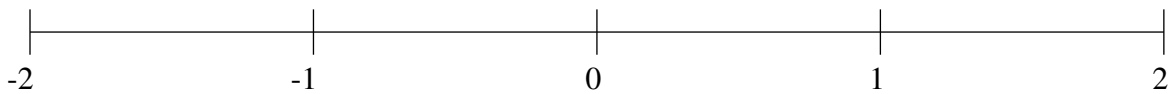


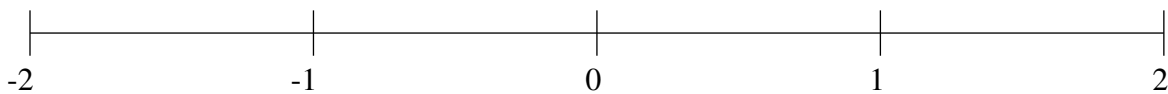
Classification de Fractions (C)

À l'aide des droites numériques, classifiez chaque série de fractions ci-dessous en ordre croissant.

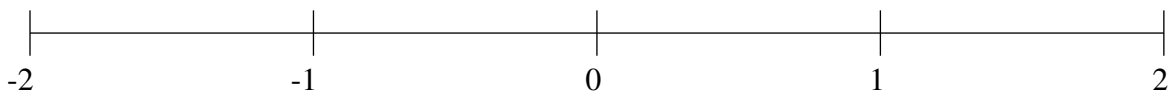
$$\frac{1}{5}, 1\frac{2}{25}, -1\frac{4}{5}, \frac{1}{2}, -1\frac{1}{4}$$



$$-\frac{1}{5}, \frac{2}{5}, -1\frac{1}{2}, -1\frac{4}{5}, \frac{17}{20}$$



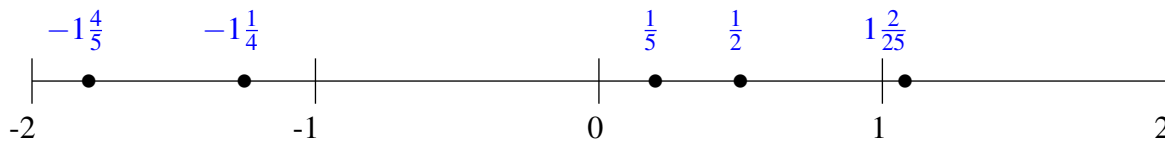
$$-1\frac{3}{10}, -\frac{1}{20}, \frac{1}{2}, 1\frac{4}{5}, 1\frac{1}{2}$$



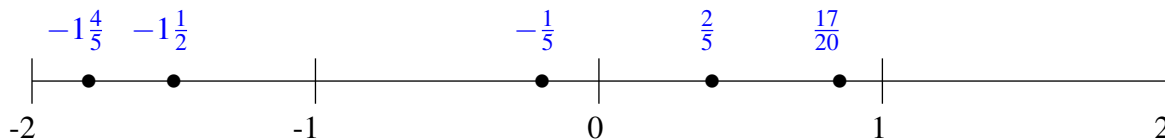
Classification de Fractions (C) Solutions

À l'aide des droites numériques, classifiez chaque série de fractions ci-dessous en ordre croissant.

$$\frac{1}{5}, 1\frac{2}{25}, -1\frac{4}{5}, \frac{1}{2}, -1\frac{1}{4}$$



$$-\frac{1}{5}, \frac{2}{5}, -1\frac{1}{2}, -1\frac{4}{5}, \frac{17}{20}$$



$$-1\frac{3}{10}, -\frac{1}{20}, \frac{1}{2}, 1\frac{4}{5}, 1\frac{1}{2}$$

