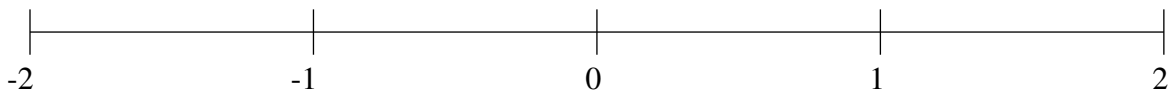


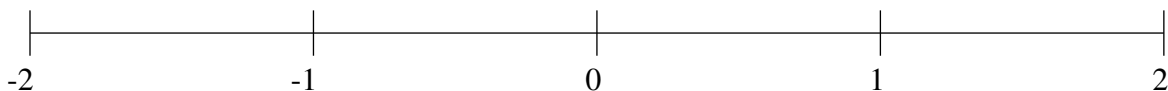
## Classification de Fractions (B)

À l'aide des droites numériques, classifiez chaque série de fractions ci-dessous en ordre croissant.

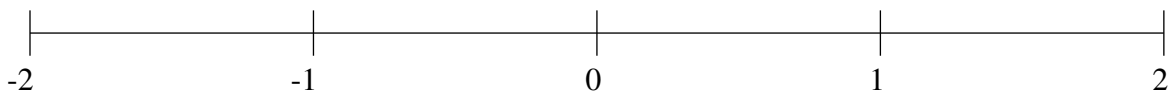
$$-\frac{1}{2}, -1\frac{1}{50}, 1\frac{3}{5}, -1\frac{3}{5}, \frac{1}{2}$$



$$1\frac{2}{5}, -1\frac{4}{5}, -1\frac{1}{5}, -1\frac{1}{2}, \frac{3}{10}$$



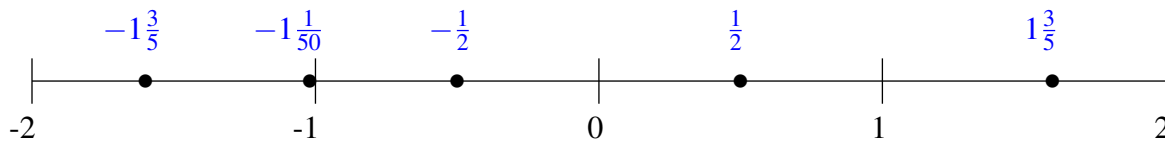
$$-1\frac{1}{5}, 1\frac{4}{5}, -1\frac{3}{4}, -\frac{7}{20}, -\frac{3}{4}$$



## Classification de Fractions (B) Solutions

À l'aide des droites numériques, classifiez chaque série de fractions ci-dessous en ordre croissant.

$$-\frac{1}{2}, -1\frac{1}{50}, 1\frac{3}{5}, -1\frac{3}{5}, \frac{1}{2}$$



$$1\frac{2}{5}, -1\frac{4}{5}, -1\frac{1}{5}, -1\frac{1}{2}, \frac{3}{10}$$



$$-1\frac{1}{5}, 1\frac{4}{5}, -1\frac{3}{4}, -\frac{7}{20}, -\frac{3}{4}$$

