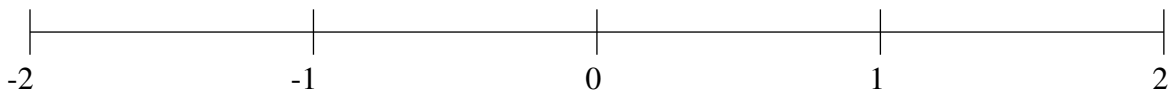


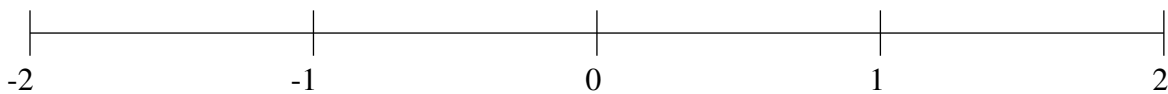
## Classification de Fractions (A)

À l'aide des droites numériques, classifiez chaque série de fractions ci-dessous en ordre croissant.

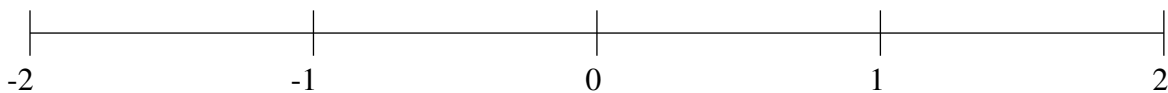
$$-\frac{1}{5}, -1\frac{1}{10}, -1\frac{1}{2}, 1\frac{1}{5}, 1\frac{3}{4}$$



$$-\frac{1}{2}, 1\frac{3}{25}, -1\frac{3}{5}, 1\frac{1}{2}, \frac{1}{4}$$



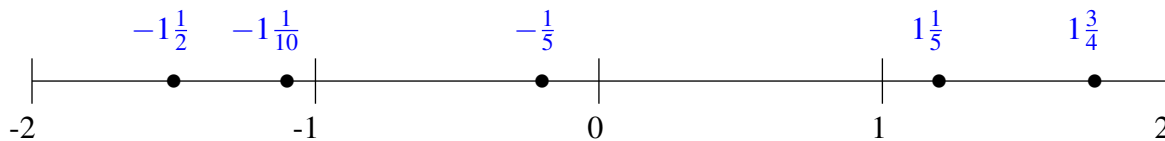
$$-\frac{1}{2}, -1\frac{1}{2}, -1\frac{1}{5}, \frac{1}{4}, -1\frac{9}{10}$$



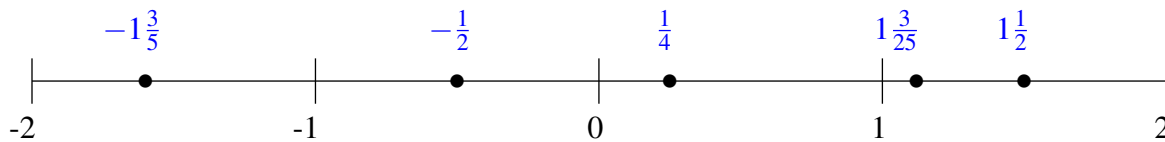
## Classification de Fractions (A) Solutions

À l'aide des droites numériques, classifiez chaque série de fractions ci-dessous en ordre croissant.

$$-\frac{1}{5}, -1\frac{1}{10}, -1\frac{1}{2}, 1\frac{1}{5}, 1\frac{3}{4}$$



$$-\frac{1}{2}, 1\frac{3}{25}, -1\frac{3}{5}, 1\frac{1}{2}, \frac{1}{4}$$



$$-\frac{1}{2}, -1\frac{1}{2}, -1\frac{1}{5}, \frac{1}{4}, -1\frac{9}{10}$$

