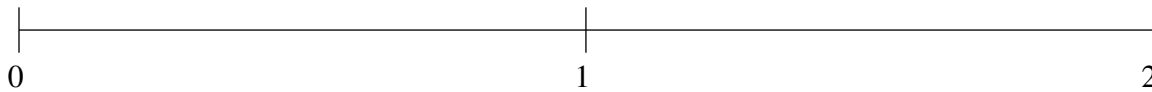


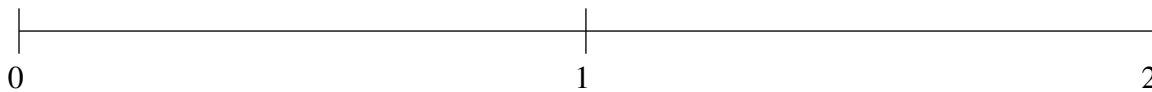
Classification de Fractions (I)

À l'aide des droites numériques, classifiez chaque série de fractions ci-dessous en ordre croissant.

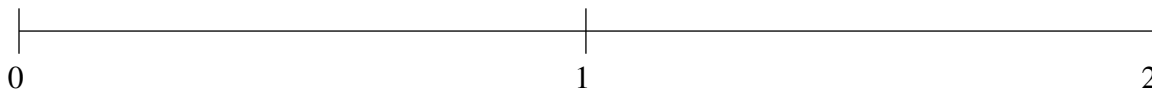
$$1\frac{1}{5}, 1\frac{17}{20}, \frac{4}{5}, \frac{1}{2}, \frac{1}{5}$$



$$\frac{1}{10}, 1\frac{4}{5}, 1\frac{1}{5}, 1\frac{1}{2}, \frac{3}{4}$$



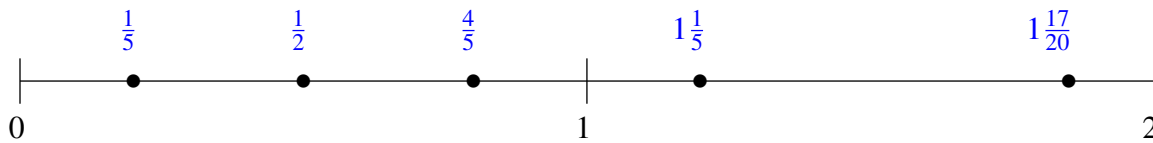
$$\frac{3}{4}, 1\frac{1}{2}, \frac{1}{4}, 1\frac{1}{5}, 1\frac{4}{5}$$



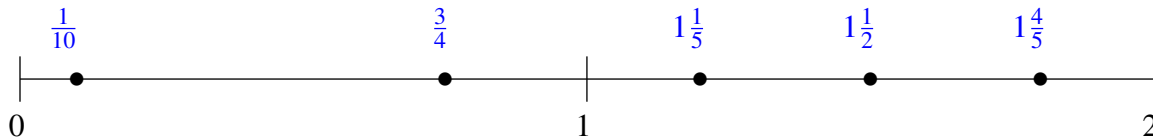
Classification de Fractions (I) Solutions

À l'aide des droites numériques, classifiez chaque série de fractions ci-dessous en ordre croissant.

$$1\frac{1}{5}, 1\frac{17}{20}, \frac{4}{5}, \frac{1}{2}, \frac{1}{5}$$



$$\frac{1}{10}, 1\frac{4}{5}, 1\frac{1}{5}, 1\frac{1}{2}, \frac{3}{4}$$



$$\frac{3}{4}, 1\frac{1}{2}, \frac{1}{4}, 1\frac{1}{5}, 1\frac{4}{5}$$

