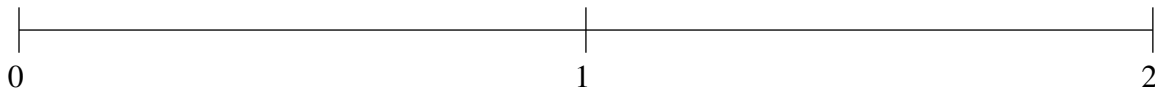


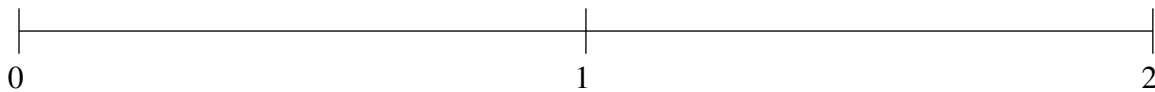
Classification de Fractions (H)

À l'aide des droites numériques, classifiez chaque série de fractions ci-dessous en ordre croissant.

$$\frac{1}{4}, 1\frac{2}{5}, 1\frac{3}{4}, \frac{9}{10}, \frac{3}{5}$$



$$\frac{4}{5}, 1\frac{19}{20}, 1\frac{3}{5}, \frac{9}{20}, 1\frac{3}{10}$$



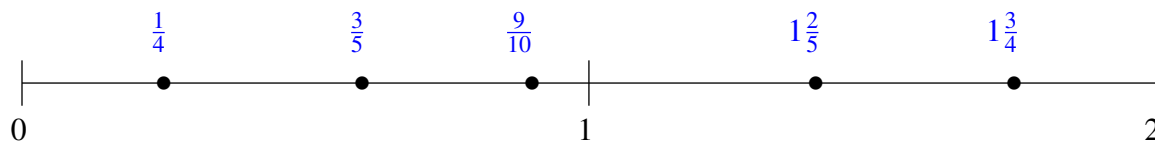
$$1\frac{9}{10}, 1\frac{1}{4}, \frac{4}{5}, 1\frac{3}{5}, \frac{2}{5}$$



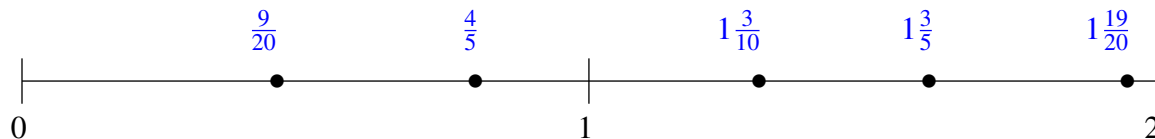
Classification de Fractions (H) Solutions

À l'aide des droites numériques, classifiez chaque série de fractions ci-dessous en ordre croissant.

$$\frac{1}{4}, 1\frac{2}{5}, 1\frac{3}{4}, \frac{9}{10}, \frac{3}{5}$$



$$\frac{4}{5}, 1\frac{19}{20}, 1\frac{3}{5}, \frac{9}{20}, 1\frac{3}{10}$$



$$1\frac{9}{10}, 1\frac{1}{4}, \frac{4}{5}, 1\frac{3}{5}, \frac{2}{5}$$

