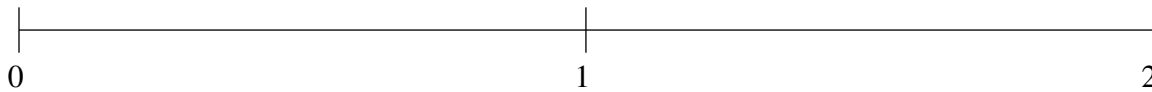


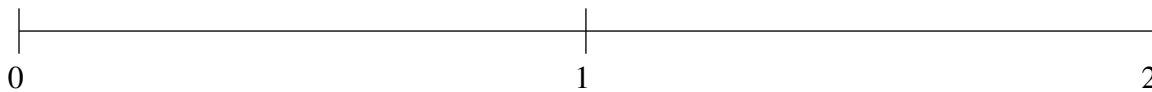
## Classification de Fractions (G)

À l'aide des droites numériques, classifiez chaque série de fractions ci-dessous en ordre croissant.

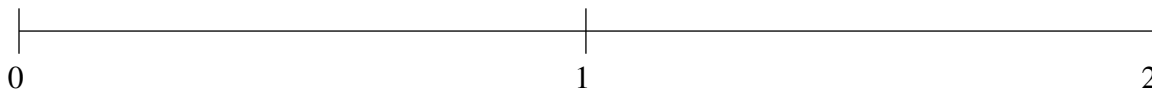
$$\frac{1}{2}, 1\frac{1}{5}, 1\frac{1}{2}, \frac{1}{5}, \frac{4}{5}$$



$$\frac{1}{5}, \frac{49}{50}, 1\frac{1}{2}, 1\frac{4}{5}, \frac{3}{5}$$



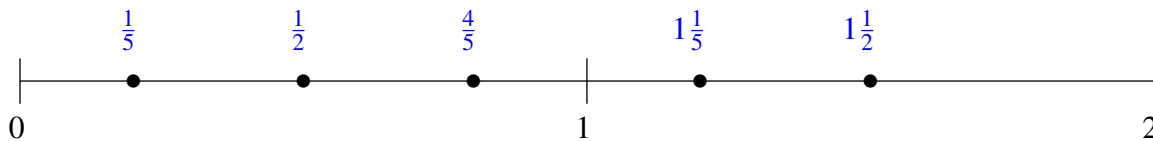
$$\frac{4}{5}, 1\frac{1}{2}, \frac{1}{4}, 1\frac{4}{25}, 1\frac{9}{10}$$



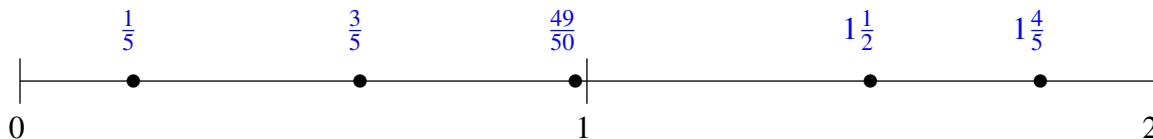
## Classification de Fractions (G) Solutions

À l'aide des droites numériques, classifiez chaque série de fractions ci-dessous en ordre croissant.

$$\frac{1}{2}, 1\frac{1}{5}, 1\frac{1}{2}, \frac{1}{5}, \frac{4}{5}$$



$$\frac{1}{5}, \frac{49}{50}, 1\frac{1}{2}, 1\frac{4}{5}, \frac{3}{5}$$



$$\frac{4}{5}, 1\frac{1}{2}, \frac{1}{4}, 1\frac{4}{25}, 1\frac{9}{10}$$

