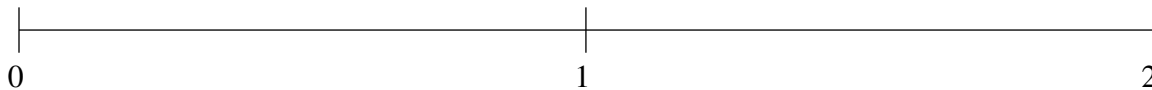


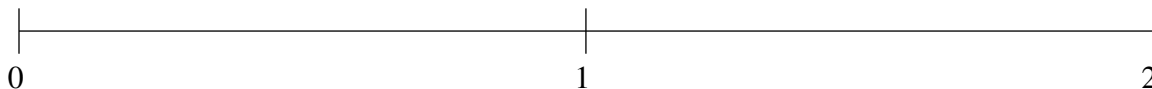
Classification de Fractions (F)

À l'aide des droites numériques, classifiez chaque série de fractions ci-dessous en ordre croissant.

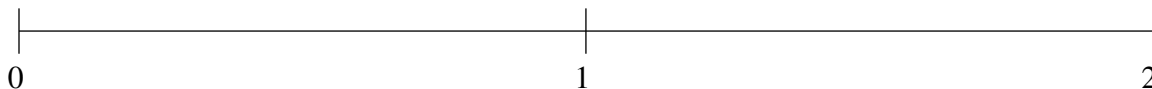
$$1\frac{1}{4}, \frac{3}{5}, 1\frac{23}{25}, \frac{9}{10}, \frac{1}{5}$$



$$1\frac{3}{5}, \frac{3}{10}, 1\frac{1}{5}, \frac{3}{5}, \frac{9}{10}$$



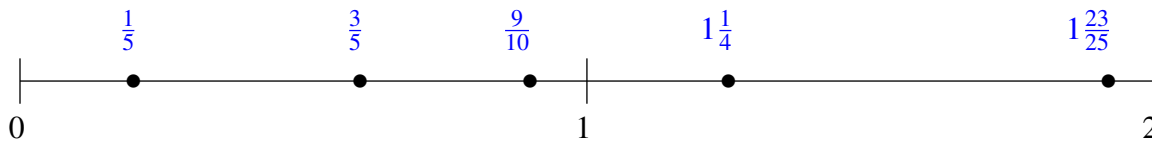
$$\frac{1}{2}, \frac{9}{10}, \frac{1}{5}, 1\frac{4}{5}, 1\frac{1}{5}$$



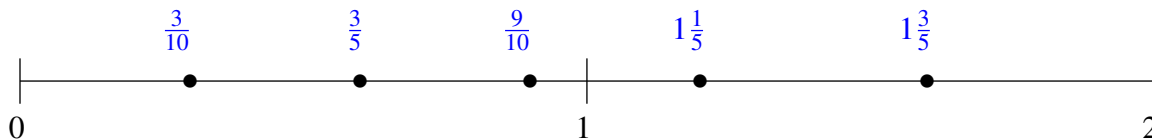
Classification de Fractions (F) Solutions

À l'aide des droites numériques, classifiez chaque série de fractions ci-dessous en ordre croissant.

$$1\frac{1}{4}, \frac{3}{5}, 1\frac{23}{25}, \frac{9}{10}, \frac{1}{5}$$



$$1\frac{3}{5}, \frac{3}{10}, 1\frac{1}{5}, \frac{3}{5}, \frac{9}{10}$$



$$\frac{1}{2}, \frac{9}{10}, \frac{1}{5}, 1\frac{4}{5}, 1\frac{1}{5}$$

