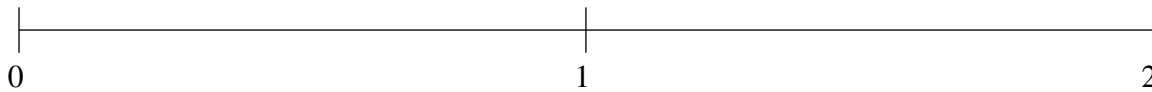


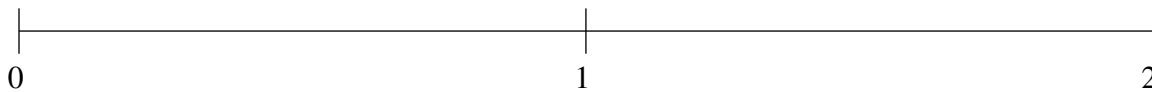
Classification de Fractions (B)

À l'aide des droites numériques, classifiez chaque série de fractions ci-dessous en ordre croissant.

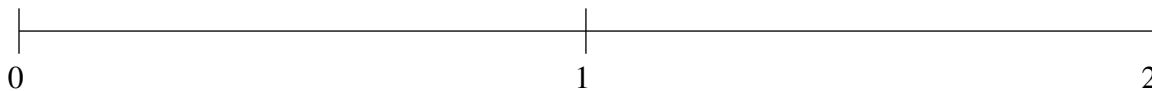
$$1\frac{22}{25}, \frac{1}{2}, \frac{3}{20}, 1\frac{1}{2}, 1\frac{1}{5}$$



$$1\frac{4}{5}, 1\frac{1}{5}, 1\frac{1}{2}, \frac{1}{2}, \frac{1}{10}$$



$$\frac{4}{5}, \frac{1}{2}, \frac{1}{5}, 1\frac{4}{5}, 1\frac{1}{2}$$



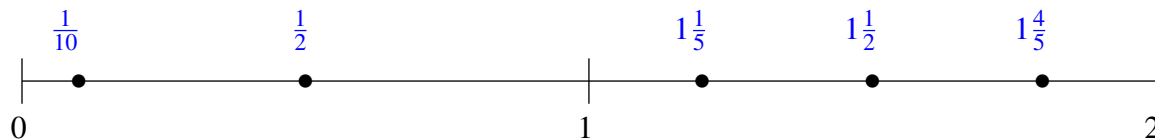
Classification de Fractions (B) Solutions

À l'aide des droites numériques, classifiez chaque série de fractions ci-dessous en ordre croissant.

$$1\frac{22}{25}, \frac{1}{2}, \frac{3}{20}, 1\frac{1}{2}, 1\frac{1}{5}$$



$$1\frac{4}{5}, 1\frac{1}{5}, 1\frac{1}{2}, \frac{1}{2}, \frac{1}{10}$$



$$\frac{4}{5}, \frac{1}{2}, \frac{1}{5}, 1\frac{4}{5}, 1\frac{1}{2}$$

