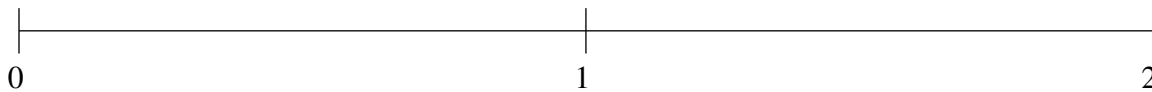


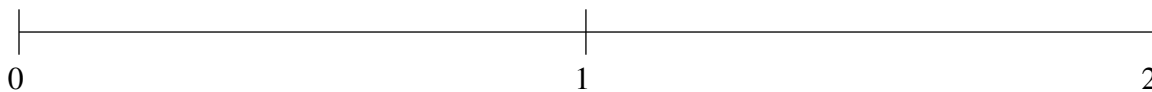
Classification de Fractions (F)

À l'aide des droites numériques, classifiez chaque série de fractions ci-dessous en ordre croissant.

$$1\frac{10}{29}, 1\frac{68}{73}, 1\frac{3}{70}, \frac{1}{29}, \frac{13}{24}$$



$$1\frac{1}{10}, \frac{5}{7}, 1\frac{7}{8}, \frac{7}{68}, 1\frac{5}{9}$$



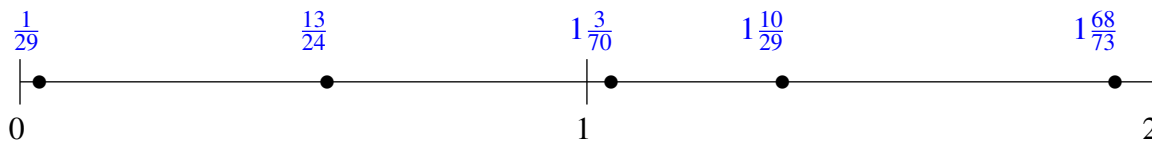
$$\frac{21}{22}, \frac{6}{47}, 1\frac{4}{11}, 1\frac{3}{4}, \frac{1}{2}$$



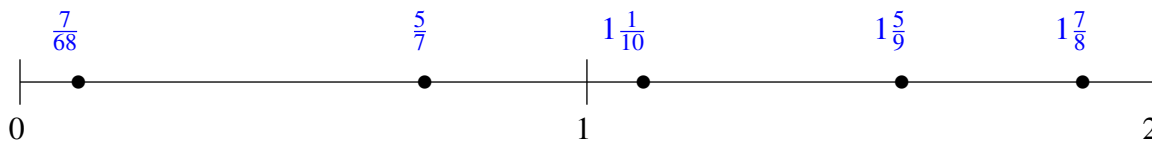
Classification de Fractions (F) Solutions

À l'aide des droites numériques, classifiez chaque série de fractions ci-dessous en ordre croissant.

$$1\frac{10}{29}, 1\frac{68}{73}, 1\frac{3}{70}, \frac{1}{29}, \frac{13}{24}$$



$$1\frac{1}{10}, \frac{5}{7}, 1\frac{7}{8}, \frac{7}{68}, 1\frac{5}{9}$$



$$\frac{21}{22}, \frac{6}{47}, 1\frac{4}{11}, 1\frac{3}{4}, \frac{1}{2}$$

