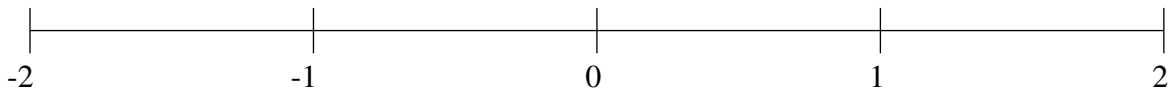


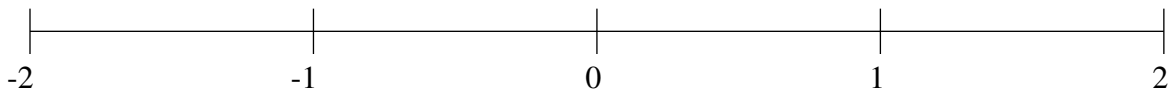
Classification de Fractions (I)

À l'aide des droites numériques, classifiez chaque série de fractions ci-dessous en ordre croissant.

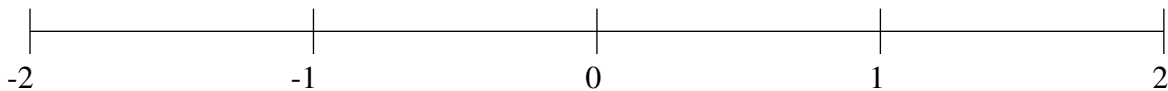
$$\frac{1}{15}, \frac{4}{7}, -\frac{4}{7}, 1\frac{5}{6}, -1\frac{3}{10}$$



$$-1\frac{1}{2}, 1\frac{1}{2}, 1\frac{4}{5}, -\frac{3}{4}, \frac{2}{5}$$



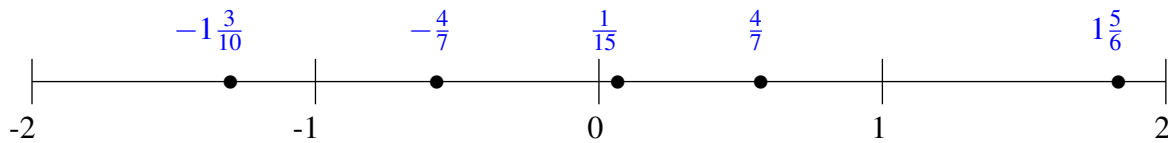
$$-1\frac{4}{7}, \frac{1}{2}, -1\frac{2}{9}, 1\frac{3}{43}, -\frac{17}{58}$$



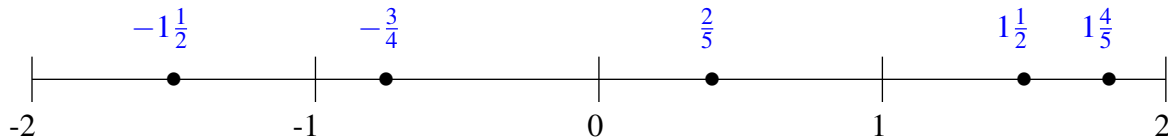
Classification de Fractions (I) Solutions

À l'aide des droites numériques, classifiez chaque série de fractions ci-dessous en ordre croissant.

$$\frac{1}{15}, \frac{4}{7}, -\frac{4}{7}, 1\frac{5}{6}, -1\frac{3}{10}$$



$$-1\frac{1}{2}, 1\frac{1}{2}, 1\frac{4}{5}, -\frac{3}{4}, \frac{2}{5}$$



$$-1\frac{4}{7}, \frac{1}{2}, -1\frac{2}{9}, 1\frac{3}{43}, -\frac{17}{58}$$

