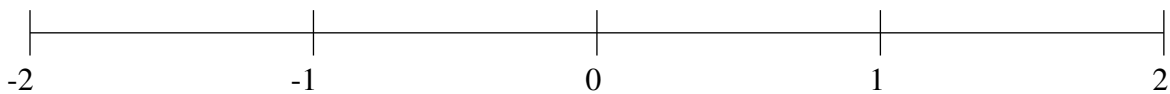


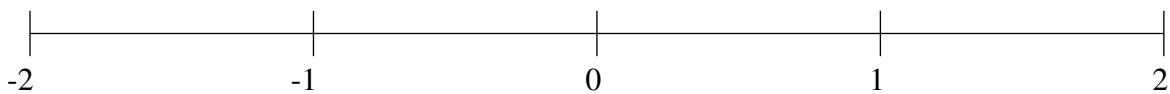
Classification de Fractions (B)

À l'aide des droites numériques, classifiez chaque série de fractions ci-dessous en ordre croissant.

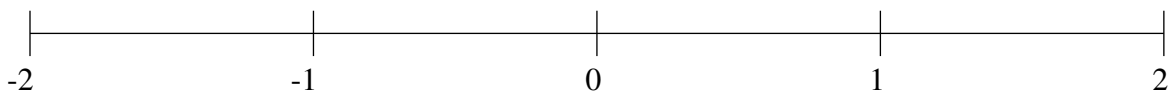
$$1\frac{9}{59}, \frac{1}{16}, \frac{29}{43}, -\frac{2}{3}, 1\frac{6}{7}$$



$$-\frac{4}{5}, -\frac{1}{3}, -1\frac{2}{3}, 1\frac{1}{3}, \frac{8}{11}$$



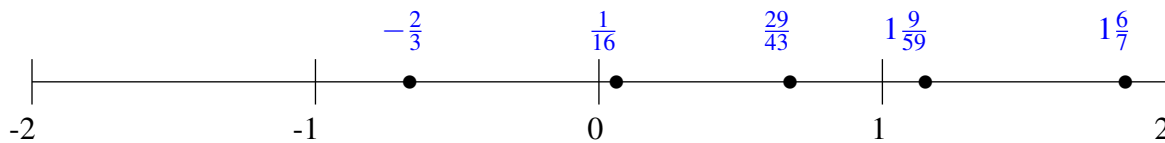
$$1\frac{4}{7}, 1\frac{1}{7}, \frac{4}{9}, -1\frac{21}{22}, -\frac{8}{15}$$



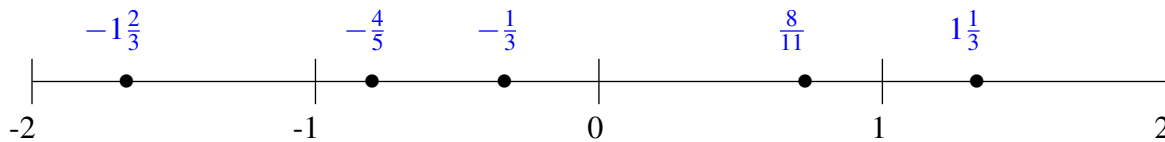
Classification de Fractions (B) Solutions

À l'aide des droites numériques, classifiez chaque série de fractions ci-dessous en ordre croissant.

$$1\frac{9}{59}, \frac{1}{16}, \frac{29}{43}, -\frac{2}{3}, 1\frac{6}{7}$$



$$-\frac{4}{5}, -\frac{1}{3}, -1\frac{2}{3}, 1\frac{1}{3}, \frac{8}{11}$$



$$1\frac{4}{7}, 1\frac{1}{7}, \frac{4}{9}, -1\frac{21}{22}, -\frac{8}{15}$$

