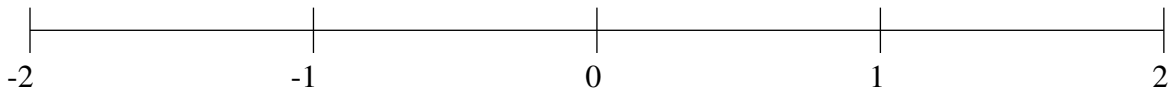


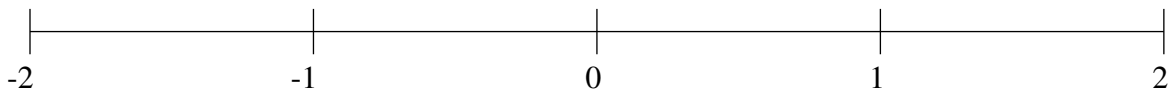
## Classification de Fractions (A)

À l'aide des droites numériques, classifiez chaque série de fractions ci-dessous en ordre croissant.

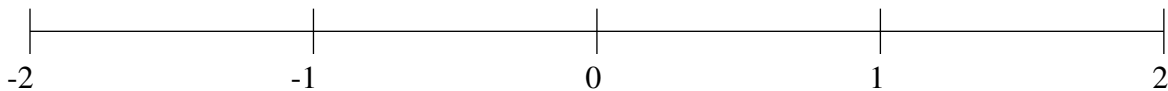
$$-\frac{1}{11}, \frac{1}{6}, -1\frac{13}{29}, -1\frac{2}{49}, \frac{1}{3}$$



$$\frac{1}{25}, 1\frac{5}{8}, -1\frac{1}{24}, \frac{27}{38}, \frac{11}{30}$$



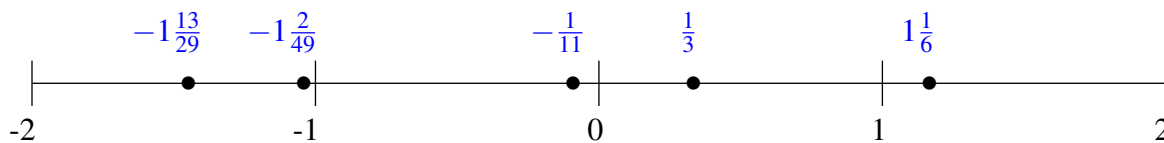
$$-1\frac{2}{23}, -\frac{1}{3}, 1\frac{1}{3}, -1\frac{21}{22}, -\frac{8}{11}$$



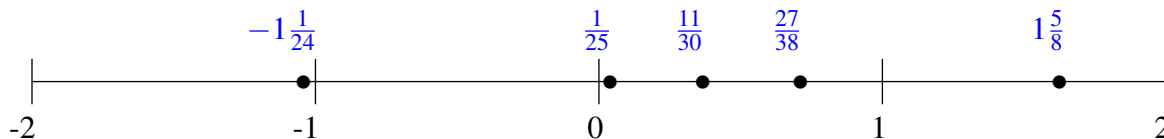
## Classification de Fractions (A) Solutions

À l'aide des droites numériques, classifiez chaque série de fractions ci-dessous en ordre croissant.

$$-\frac{1}{11}, 1\frac{1}{6}, -1\frac{13}{29}, -1\frac{2}{49}, \frac{1}{3}$$



$$\frac{1}{25}, 1\frac{5}{8}, -1\frac{1}{24}, \frac{27}{38}, \frac{11}{30}$$



$$-1\frac{2}{23}, -\frac{1}{3}, 1\frac{1}{3}, -1\frac{21}{22}, -\frac{8}{11}$$

