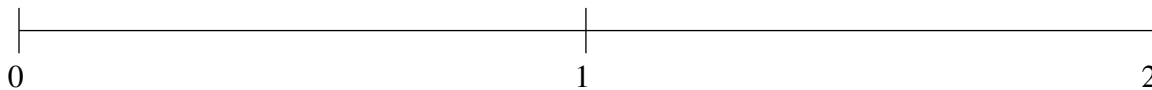


Classification de Fractions (A)

À l'aide des droites numériques, classifiez chaque série de fractions ci-dessous en ordre croissant.

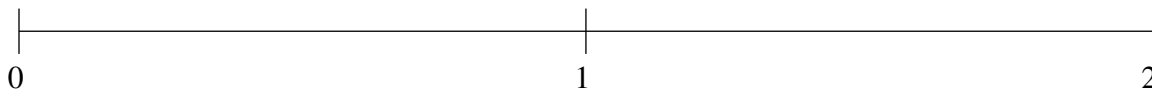
$$1\frac{1}{6}, 1\frac{1}{2}, \frac{2}{3}, 1\frac{5}{6}, \frac{1}{3}$$



$$1\frac{4}{5}, \frac{2}{5}, 1\frac{1}{2}, 1\frac{1}{6}, \frac{4}{5}$$



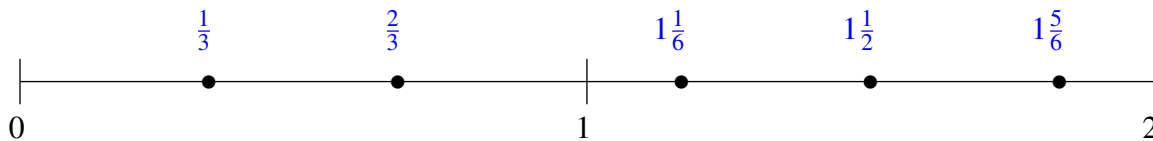
$$\frac{1}{10}, 1\frac{7}{10}, 1\frac{1}{12}, \frac{1}{2}, 1\frac{2}{5}$$



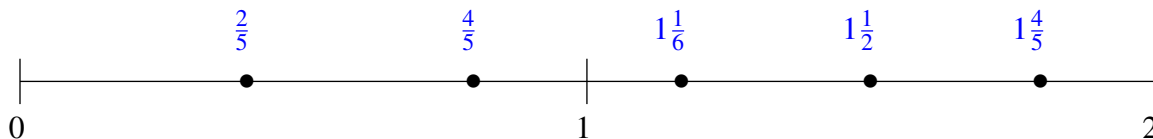
Classification de Fractions (A) Solutions

À l'aide des droites numériques, classifiez chaque série de fractions ci-dessous en ordre croissant.

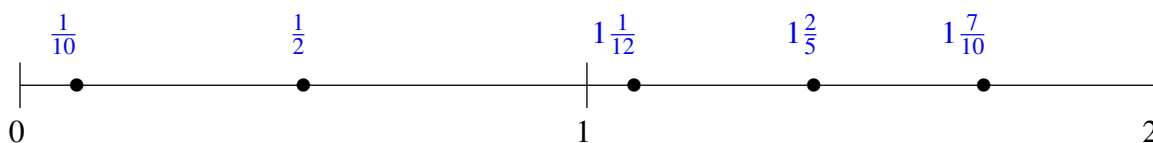
$$1\frac{1}{6}, 1\frac{1}{2}, \frac{2}{3}, 1\frac{5}{6}, \frac{1}{3}$$



$$1\frac{4}{5}, \frac{2}{5}, 1\frac{1}{2}, 1\frac{1}{6}, \frac{4}{5}$$



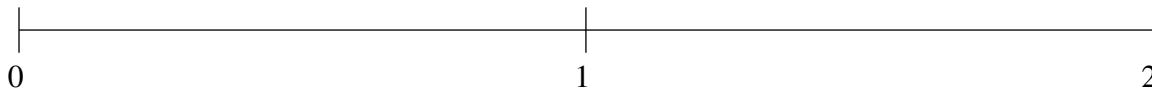
$$\frac{1}{10}, 1\frac{7}{10}, 1\frac{1}{12}, \frac{1}{2}, 1\frac{2}{5}$$



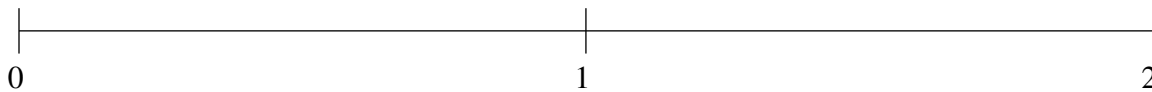
Classification de Fractions (B)

À l'aide des droites numériques, classifiez chaque série de fractions ci-dessous en ordre croissant.

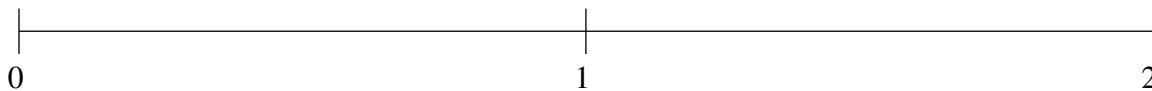
$$1\frac{1}{2}, 1\frac{4}{5}, \frac{1}{5}, \frac{1}{2}, 1\frac{1}{20}$$



$$\frac{1}{2}, 1\frac{13}{20}, \frac{9}{10}, \frac{1}{10}, 1\frac{1}{3}$$



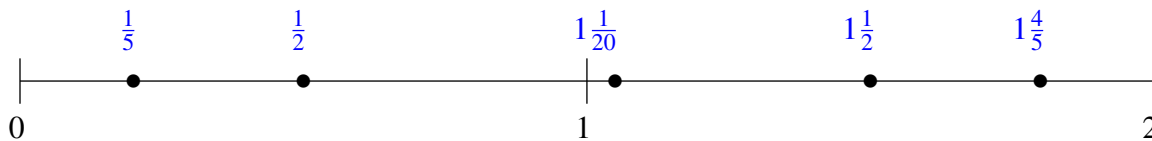
$$\frac{1}{2}, 1\frac{1}{5}, 1\frac{5}{6}, \frac{1}{6}, 1\frac{1}{2}$$



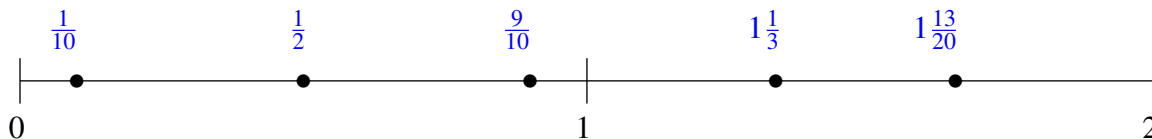
Classification de Fractions (B) Solutions

À l'aide des droites numériques, classifiez chaque série de fractions ci-dessous en ordre croissant.

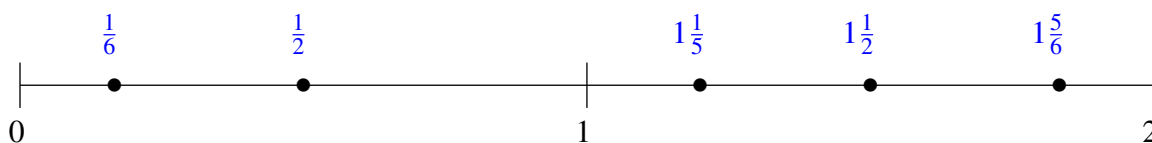
$$1\frac{1}{2}, 1\frac{4}{5}, \frac{1}{5}, \frac{1}{2}, 1\frac{1}{20}$$



$$\frac{1}{2}, 1\frac{13}{20}, \frac{9}{10}, \frac{1}{10}, 1\frac{1}{3}$$



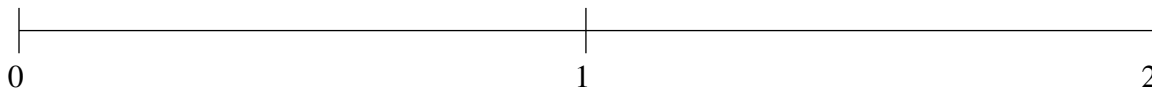
$$\frac{1}{2}, 1\frac{1}{5}, 1\frac{5}{6}, \frac{1}{6}, 1\frac{1}{2}$$



Classification de Fractions (C)

À l'aide des droites numériques, classifiez chaque série de fractions ci-dessous en ordre croissant.

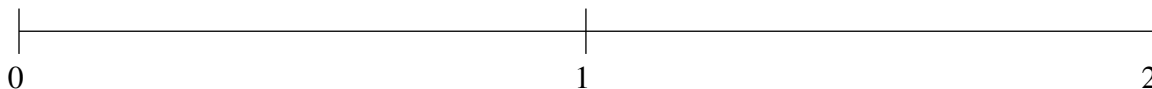
$$\frac{1}{2}, \frac{1}{5}, 1\frac{1}{2}, \frac{4}{5}, 1\frac{5}{6}$$



$$1\frac{4}{5}, 1\frac{1}{2}, \frac{1}{10}, 1\frac{1}{10}, \frac{2}{3}$$



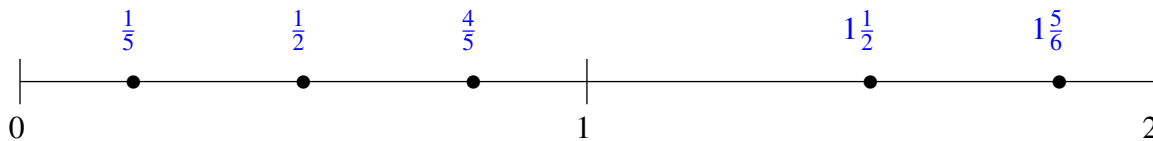
$$1\frac{1}{10}, 1\frac{4}{5}, \frac{1}{5}, 1\frac{1}{2}, \frac{1}{2}$$



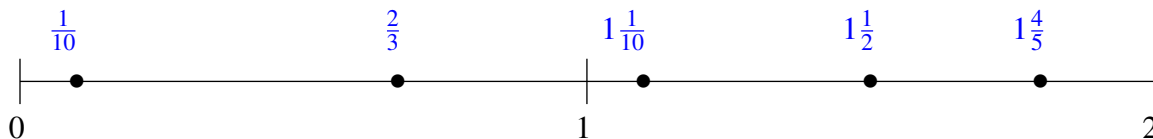
Classification de Fractions (C) Solutions

À l'aide des droites numériques, classifiez chaque série de fractions ci-dessous en ordre croissant.

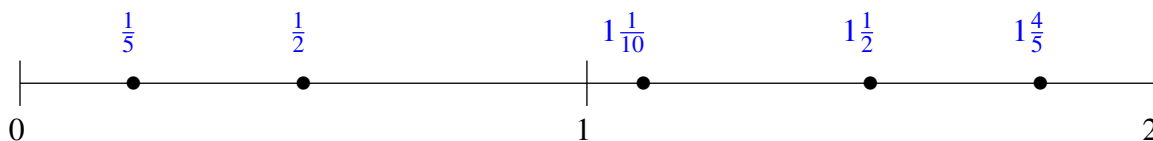
$$\frac{1}{2}, \frac{1}{5}, 1\frac{1}{2}, \frac{4}{5}, 1\frac{5}{6}$$



$$1\frac{4}{5}, 1\frac{1}{2}, \frac{1}{10}, 1\frac{1}{10}, \frac{2}{3}$$



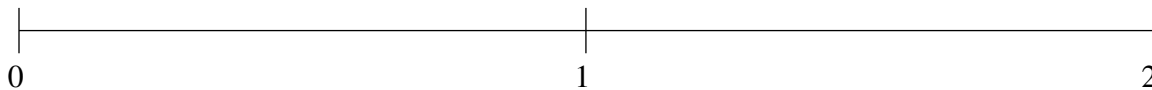
$$1\frac{1}{10}, 1\frac{4}{5}, \frac{1}{5}, 1\frac{1}{2}, \frac{1}{2}$$



Classification de Fractions (D)

À l'aide des droites numériques, classifiez chaque série de fractions ci-dessous en ordre croissant.

$$1\frac{5}{6}, 1\frac{2}{5}, \frac{1}{6}, \frac{3}{4}, 1\frac{1}{10}$$



$$1\frac{3}{4}, \frac{5}{6}, \frac{1}{6}, \frac{1}{2}, 1\frac{1}{4}$$



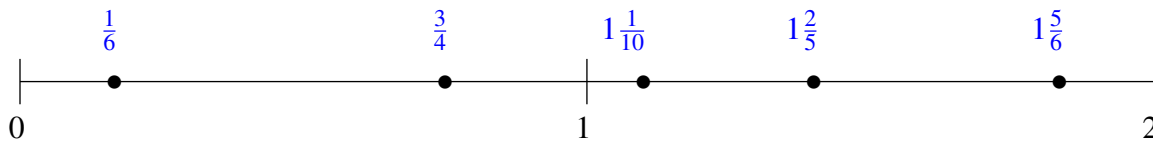
$$1\frac{1}{5}, \frac{1}{12}, 1\frac{4}{5}, \frac{5}{6}, \frac{1}{2}$$



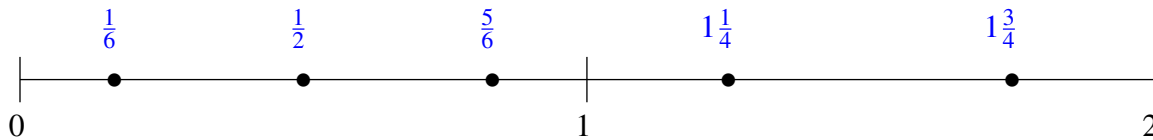
Classification de Fractions (D) Solutions

À l'aide des droites numériques, classifiez chaque série de fractions ci-dessous en ordre croissant.

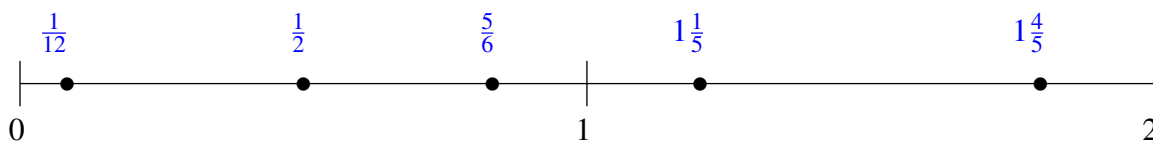
$$1\frac{5}{6}, 1\frac{2}{5}, \frac{1}{6}, \frac{3}{4}, 1\frac{1}{10}$$



$$1\frac{3}{4}, \frac{5}{6}, \frac{1}{6}, \frac{1}{2}, 1\frac{1}{4}$$



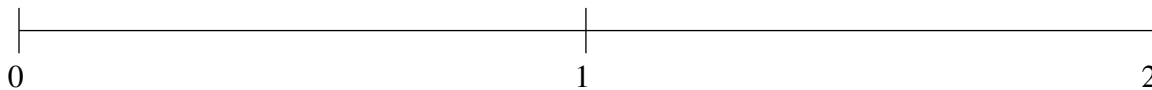
$$1\frac{1}{5}, \frac{1}{12}, 1\frac{4}{5}, \frac{5}{6}, \frac{1}{2}$$



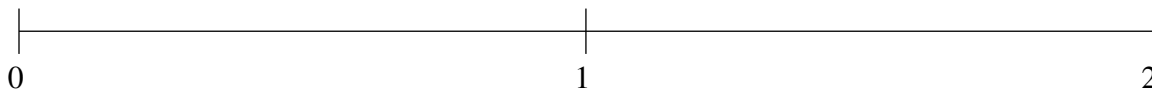
Classification de Fractions (E)

À l'aide des droites numériques, classifiez chaque série de fractions ci-dessous en ordre croissant.

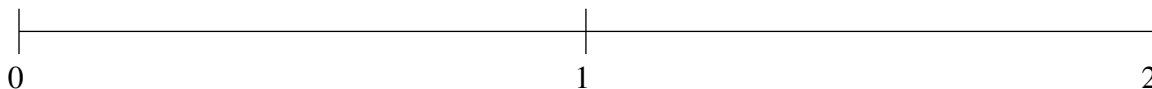
$$\frac{1}{3}, \frac{4}{5}, 1\frac{1}{5}, 1\frac{5}{6}, 1\frac{1}{2}$$



$$\frac{1}{5}, 1\frac{1}{5}, \frac{1}{2}, \frac{4}{5}, 1\frac{2}{3}$$



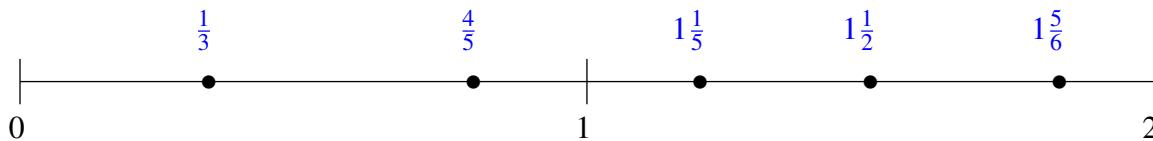
$$\frac{1}{5}, 1\frac{2}{3}, 1\frac{3}{10}, \frac{5}{6}, \frac{1}{2}$$



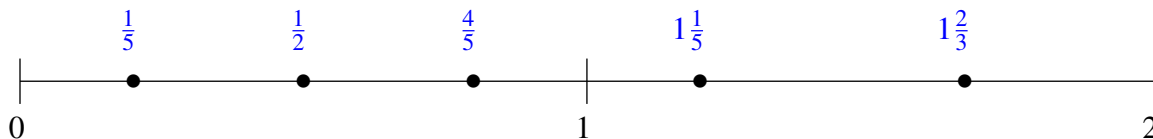
Classification de Fractions (E) Solutions

À l'aide des droites numériques, classifiez chaque série de fractions ci-dessous en ordre croissant.

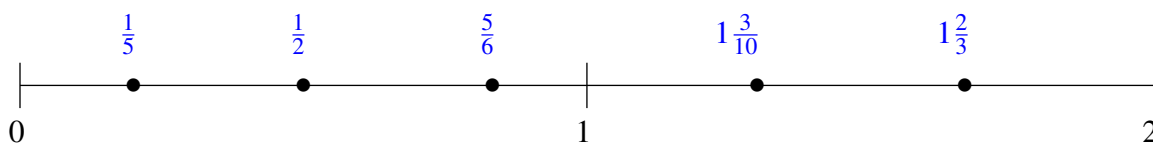
$$\frac{1}{3}, \frac{4}{5}, 1\frac{1}{5}, 1\frac{5}{6}, 1\frac{1}{2}$$



$$\frac{1}{5}, 1\frac{1}{5}, \frac{1}{2}, \frac{4}{5}, 1\frac{2}{3}$$



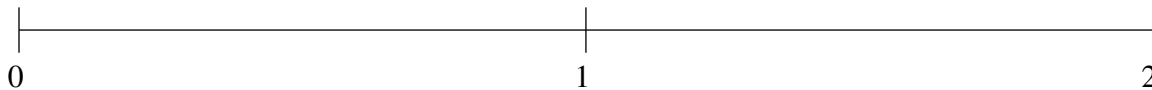
$$\frac{1}{5}, 1\frac{2}{3}, 1\frac{3}{10}, \frac{5}{6}, \frac{1}{2}$$



Classification de Fractions (F)

À l'aide des droites numériques, classifiez chaque série de fractions ci-dessous en ordre croissant.

$$\frac{1}{10}, \frac{2}{5}, 1\frac{1}{2}, 1\frac{1}{5}, \frac{4}{5}$$



$$\frac{1}{5}, \frac{5}{6}, 1\frac{3}{4}, \frac{1}{2}, 1\frac{1}{3}$$



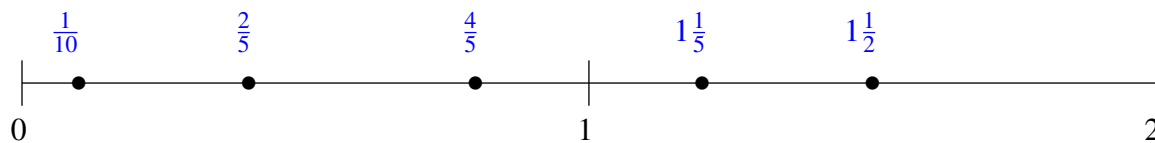
$$\frac{1}{4}, 1\frac{3}{10}, 1\frac{2}{3}, \frac{11}{12}, \frac{3}{5}$$



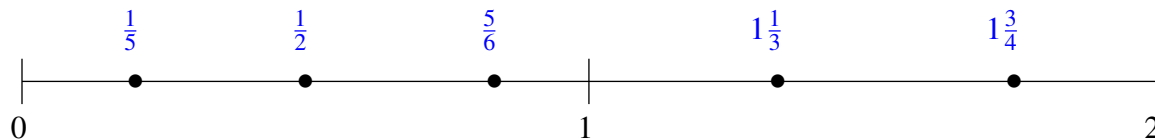
Classification de Fractions (F) Solutions

À l'aide des droites numériques, classifiez chaque série de fractions ci-dessous en ordre croissant.

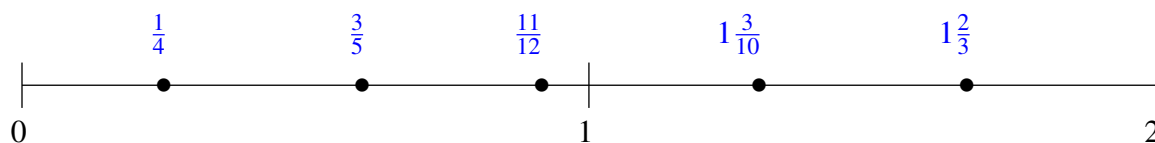
$$\frac{1}{10}, \frac{2}{5}, 1\frac{1}{2}, 1\frac{1}{5}, \frac{4}{5}$$



$$\frac{1}{5}, \frac{5}{6}, 1\frac{3}{4}, \frac{1}{2}, 1\frac{1}{3}$$



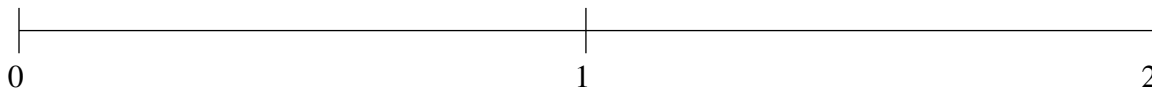
$$\frac{1}{4}, 1\frac{3}{10}, 1\frac{2}{3}, \frac{11}{12}, \frac{3}{5}$$



Classification de Fractions (G)

À l'aide des droites numériques, classifiez chaque série de fractions ci-dessous en ordre croissant.

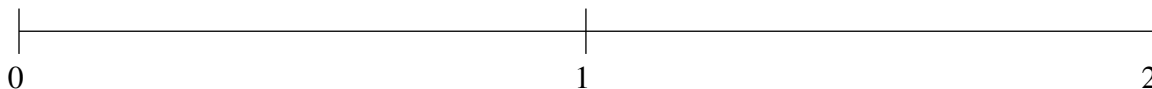
$$1\frac{1}{3}, \frac{1}{2}, \frac{5}{6}, 1\frac{2}{3}, \frac{1}{5}$$



$$1\frac{1}{5}, \frac{1}{3}, 1\frac{1}{2}, \frac{3}{4}, 1\frac{4}{5}$$



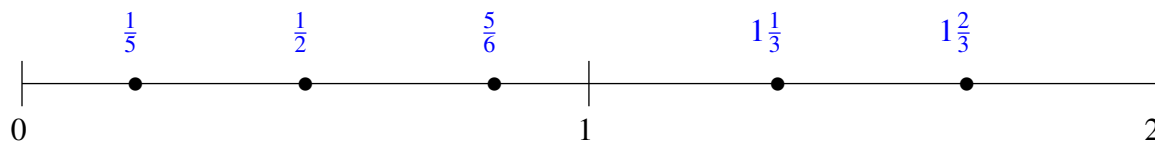
$$\frac{2}{5}, \frac{1}{12}, \frac{3}{4}, 1\frac{1}{5}, 1\frac{1}{2}$$



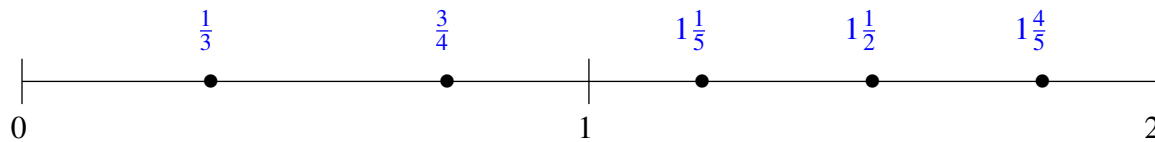
Classification de Fractions (G) Solutions

À l'aide des droites numériques, classifiez chaque série de fractions ci-dessous en ordre croissant.

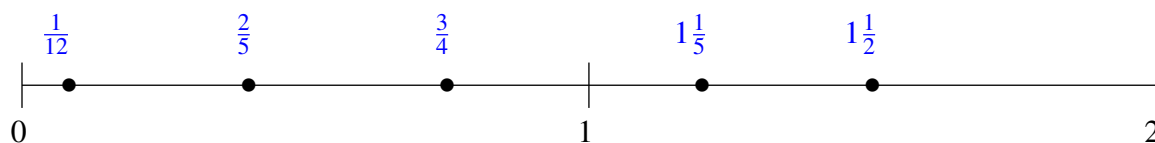
$$1\frac{1}{3}, \frac{1}{2}, \frac{5}{6}, 1\frac{2}{3}, \frac{1}{5}$$



$$1\frac{1}{5}, \frac{1}{3}, 1\frac{1}{2}, \frac{3}{4}, 1\frac{4}{5}$$



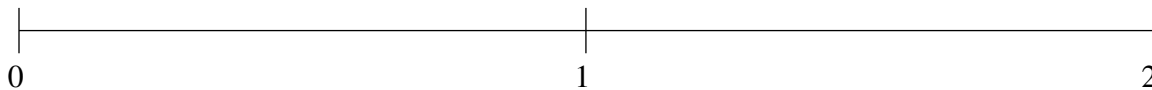
$$\frac{2}{5}, \frac{1}{12}, \frac{3}{4}, 1\frac{1}{5}, 1\frac{1}{2}$$



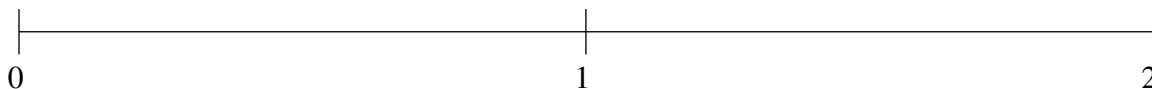
Classification de Fractions (H)

À l'aide des droites numériques, classifiez chaque série de fractions ci-dessous en ordre croissant.

$$\frac{1}{6}, 1\frac{1}{2}, \frac{5}{6}, 1\frac{1}{5}, \frac{7}{15}$$



$$\frac{2}{3}, 1\frac{1}{2}, \frac{1}{10}, 1\frac{5}{6}, 1\frac{1}{6}$$



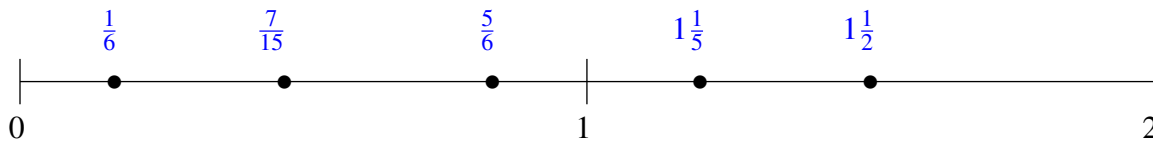
$$1\frac{4}{5}, 1\frac{3}{20}, \frac{1}{3}, \frac{11}{15}, 1\frac{1}{2}$$



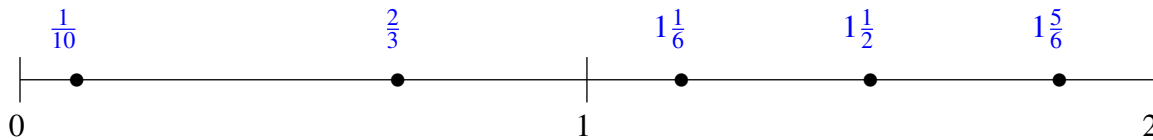
Classification de Fractions (H) Solutions

À l'aide des droites numériques, classifiez chaque série de fractions ci-dessous en ordre croissant.

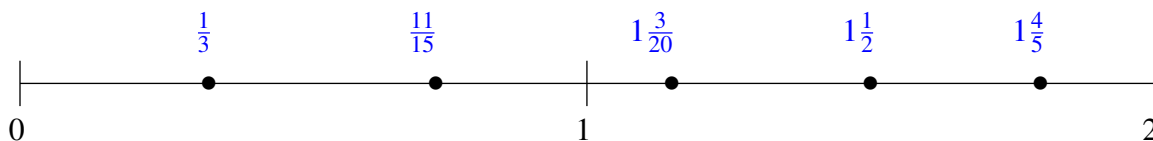
$$\frac{1}{6}, 1\frac{1}{2}, \frac{5}{6}, 1\frac{1}{5}, \frac{7}{15}$$



$$\frac{2}{3}, 1\frac{1}{2}, \frac{1}{10}, 1\frac{5}{6}, 1\frac{1}{6}$$



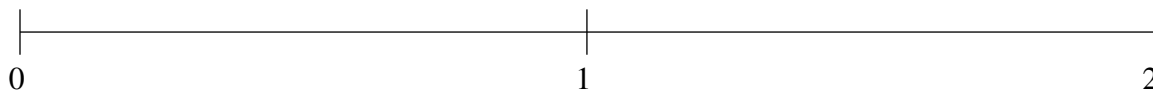
$$1\frac{4}{5}, 1\frac{3}{20}, \frac{1}{3}, \frac{11}{15}, 1\frac{1}{2}$$



Classification de Fractions (I)

À l'aide des droites numériques, classifiez chaque série de fractions ci-dessous en ordre croissant.

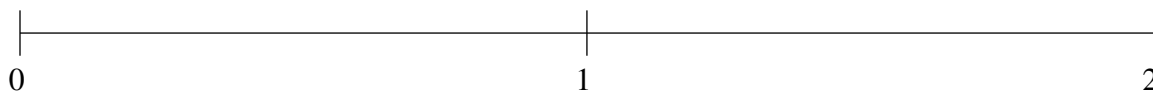
$$1\frac{49}{60}, 1\frac{1}{2}, \frac{2}{3}, 1\frac{1}{5}, \frac{1}{3}$$



$$\frac{2}{3}, 1\frac{3}{5}, \frac{1}{3}, 1\frac{11}{12}, 1\frac{1}{4}$$



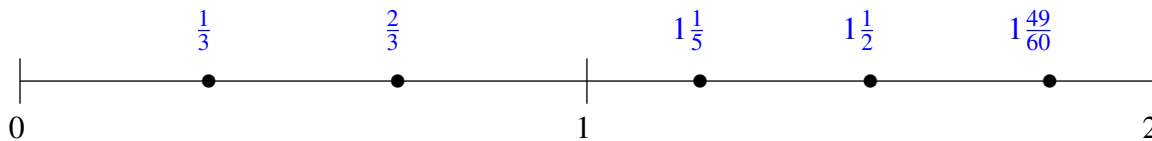
$$\frac{3}{4}, 1\frac{4}{5}, \frac{1}{4}, 1\frac{1}{2}, 1\frac{1}{5}$$



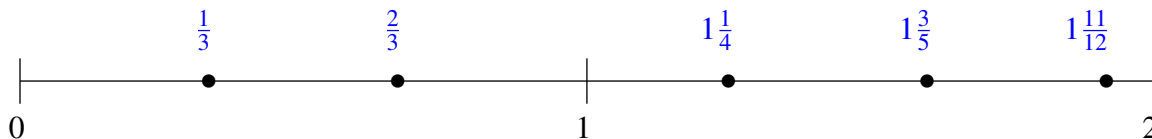
Classification de Fractions (I) Solutions

À l'aide des droites numériques, classifiez chaque série de fractions ci-dessous en ordre croissant.

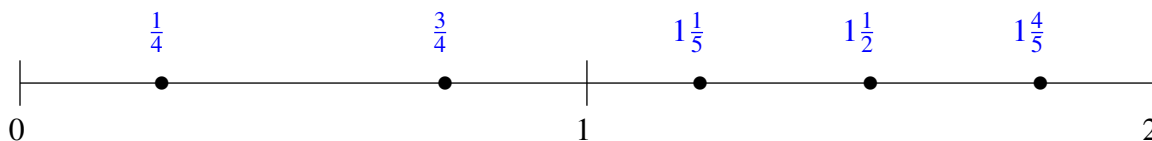
$$1\frac{49}{60}, 1\frac{1}{2}, \frac{2}{3}, 1\frac{1}{5}, \frac{1}{3}$$



$$\frac{2}{3}, 1\frac{3}{5}, \frac{1}{3}, 1\frac{11}{12}, 1\frac{1}{4}$$



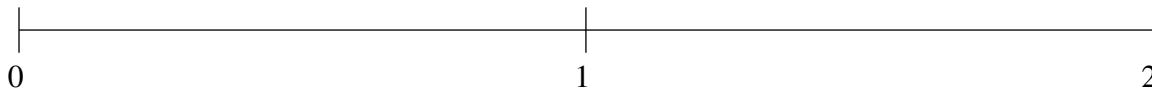
$$\frac{3}{4}, 1\frac{4}{5}, \frac{1}{4}, 1\frac{1}{2}, 1\frac{1}{5}$$



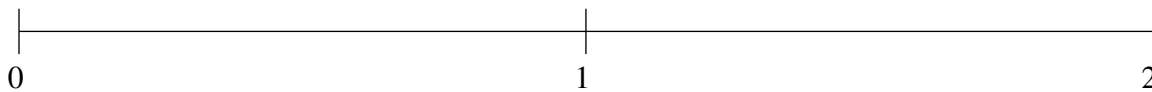
Classification de Fractions (J)

À l'aide des droites numériques, classifiez chaque série de fractions ci-dessous en ordre croissant.

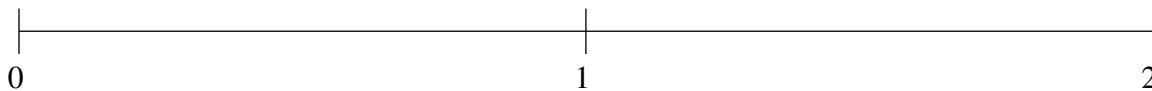
$$1\frac{11}{12}, \frac{1}{2}, \frac{1}{10}, \frac{4}{5}, 1\frac{1}{10}$$



$$1\frac{5}{6}, \frac{1}{2}, 1\frac{1}{2}, 1\frac{1}{5}, \frac{1}{5}$$



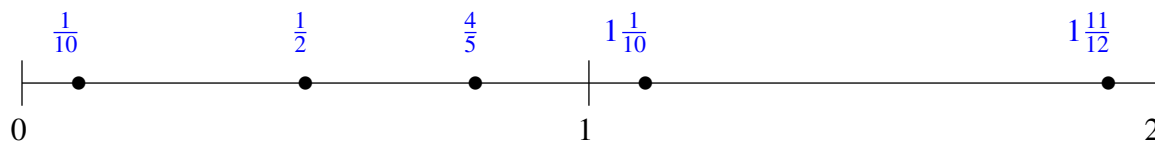
$$1\frac{4}{5}, 1\frac{1}{15}, \frac{1}{4}, \frac{7}{12}, 1\frac{2}{5}$$



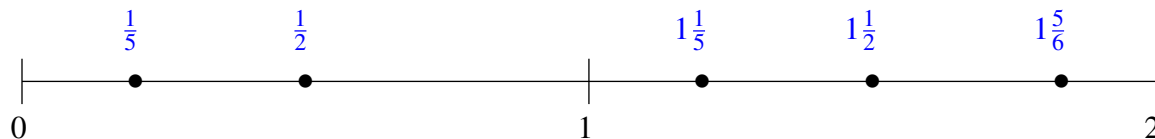
Classification de Fractions (J) Solutions

À l'aide des droites numériques, classifiez chaque série de fractions ci-dessous en ordre croissant.

$$1\frac{11}{12}, \frac{1}{2}, \frac{1}{10}, \frac{4}{5}, 1\frac{1}{10}$$



$$1\frac{5}{6}, \frac{1}{2}, 1\frac{1}{2}, 1\frac{1}{5}, \frac{1}{5}$$



$$1\frac{4}{5}, 1\frac{1}{15}, \frac{1}{4}, \frac{7}{12}, 1\frac{2}{5}$$

