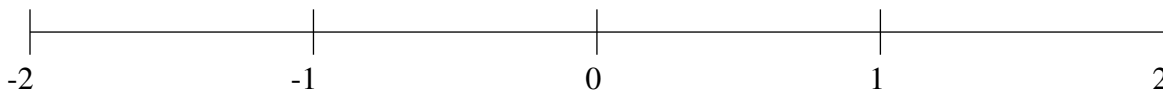


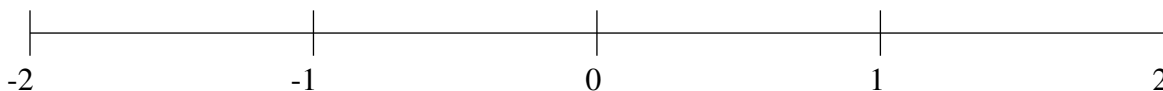
## Classification de Fractions (H)

À l'aide des droites numériques, classifiez chaque série de fractions ci-dessous en ordre croissant.

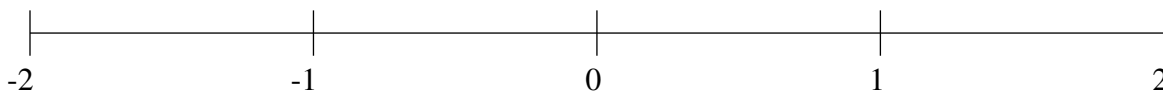
$$\frac{4}{5}, -1\frac{2}{3}, -\frac{1}{3}, \frac{2}{5}, 1\frac{1}{2}$$



$$\frac{7}{12}, 1\frac{4}{5}, -\frac{1}{6}, -1\frac{3}{5}, 1\frac{1}{2}$$



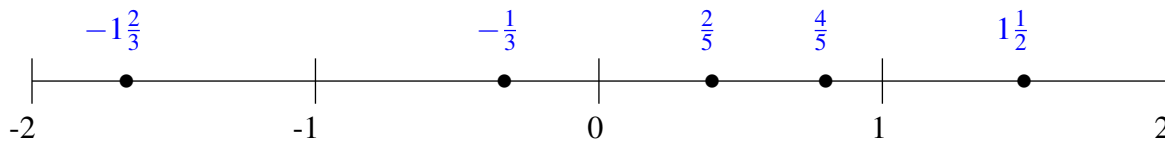
$$-\frac{3}{5}, -1\frac{3}{5}, 1\frac{1}{4}, -1\frac{1}{6}, -\frac{1}{12}$$



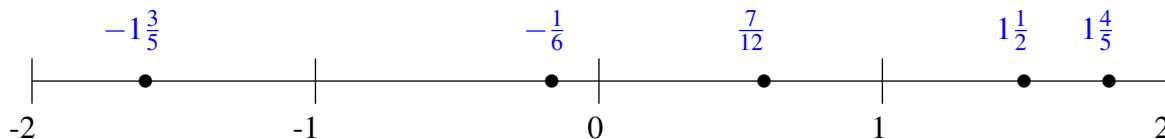
## Classification de Fractions (H) Solutions

À l'aide des droites numériques, classifiez chaque série de fractions ci-dessous en ordre croissant.

$$\frac{4}{5}, -1\frac{2}{3}, -\frac{1}{3}, \frac{2}{5}, 1\frac{1}{2}$$



$$\frac{7}{12}, 1\frac{4}{5}, -\frac{1}{6}, -1\frac{3}{5}, 1\frac{1}{2}$$



$$-\frac{3}{5}, -1\frac{3}{5}, 1\frac{1}{4}, -1\frac{1}{6}, -\frac{1}{12}$$

