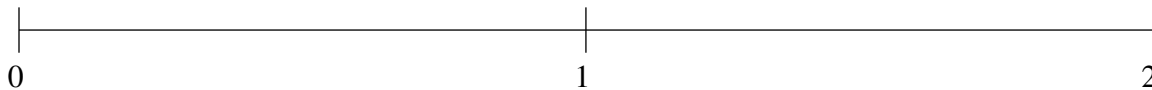


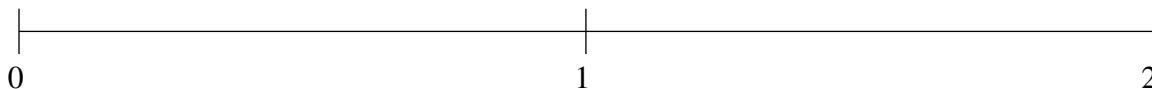
Classification de Fractions (F)

À l'aide des droites numériques, classifiez chaque série de fractions ci-dessous en ordre croissant.

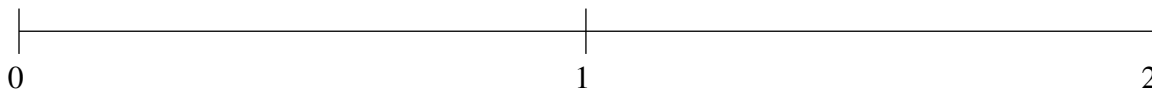
$$\frac{1}{10}, \frac{2}{5}, 1\frac{1}{2}, 1\frac{1}{5}, \frac{4}{5}$$



$$\frac{1}{5}, \frac{5}{6}, 1\frac{3}{4}, \frac{1}{2}, 1\frac{1}{3}$$



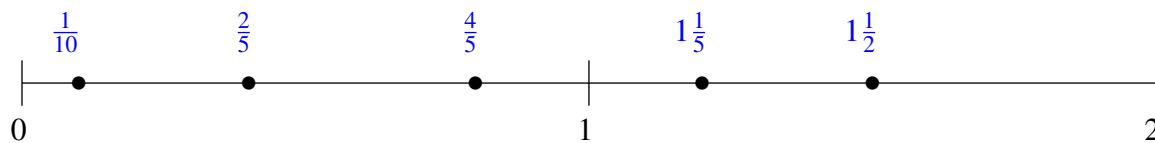
$$\frac{1}{4}, 1\frac{3}{10}, 1\frac{2}{3}, \frac{11}{12}, \frac{3}{5}$$



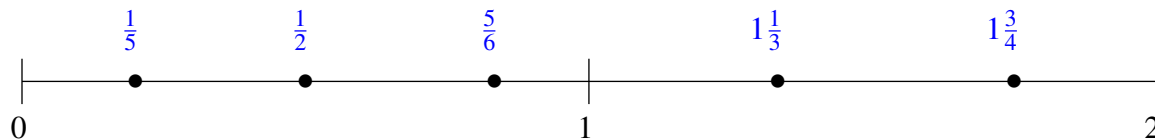
Classification de Fractions (F) Solutions

À l'aide des droites numériques, classifiez chaque série de fractions ci-dessous en ordre croissant.

$$\frac{1}{10}, \frac{2}{5}, 1\frac{1}{2}, 1\frac{1}{5}, \frac{4}{5}$$



$$\frac{1}{5}, \frac{5}{6}, 1\frac{3}{4}, \frac{1}{2}, 1\frac{1}{3}$$



$$\frac{1}{4}, 1\frac{3}{10}, 1\frac{2}{3}, \frac{11}{12}, \frac{3}{5}$$

