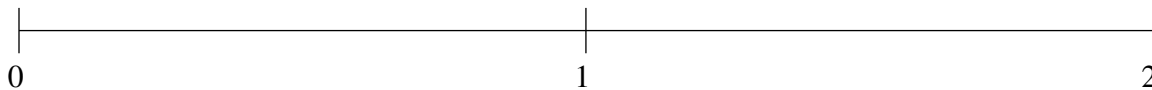


Classification de Fractions (B)

À l'aide des droites numériques, classifiez chaque série de fractions ci-dessous en ordre croissant.

$$1\frac{2}{5}, \frac{8}{11}, \frac{4}{15}, 1\frac{1}{13}, 1\frac{5}{6}$$



$$1\frac{44}{47}, \frac{6}{7}, \frac{9}{31}, 1\frac{23}{41}, 1\frac{1}{4}$$



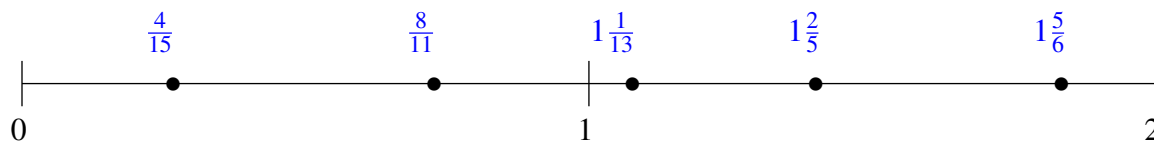
$$\frac{1}{10}, \frac{1}{2}, 1\frac{8}{9}, 1\frac{6}{29}, 1\frac{7}{12}$$



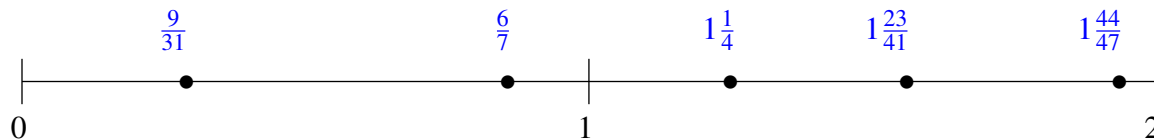
Classification de Fractions (B) Solutions

À l'aide des droites numériques, classifiez chaque série de fractions ci-dessous en ordre croissant.

$$1\frac{2}{5}, \frac{8}{11}, \frac{4}{15}, 1\frac{1}{13}, 1\frac{5}{6}$$



$$1\frac{44}{47}, \frac{6}{7}, \frac{9}{31}, 1\frac{23}{41}, 1\frac{1}{4}$$



$$\frac{1}{10}, \frac{1}{2}, 1\frac{8}{9}, 1\frac{6}{29}, 1\frac{7}{12}$$

