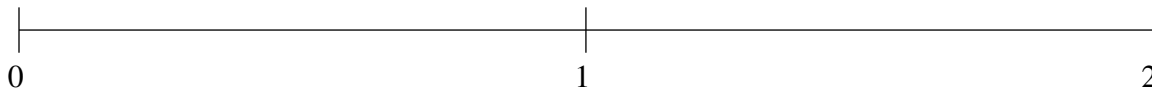


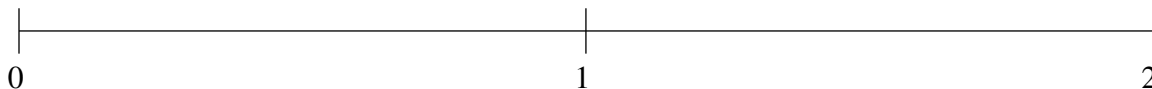
Classification de Fractions (A)

À l'aide des droites numériques, classifiez chaque série de fractions ci-dessous en ordre croissant.

$$1\frac{4}{5}, \frac{3}{4}, \frac{1}{8}, 1\frac{1}{2}, 1\frac{1}{5}$$



$$\frac{7}{9}, \frac{7}{15}, \frac{1}{7}, 1\frac{3}{4}, 1\frac{1}{6}$$



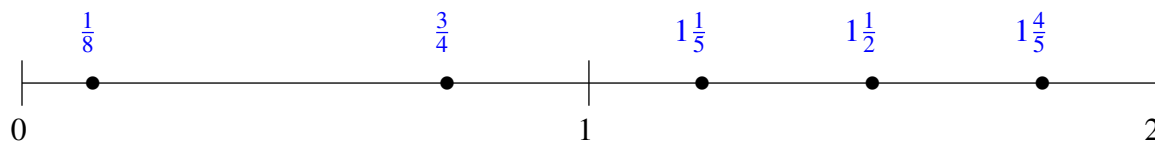
$$\frac{5}{12}, 1\frac{8}{11}, \frac{1}{11}, \frac{13}{17}, 1\frac{1}{9}$$



Classification de Fractions (A) Solutions

À l'aide des droites numériques, classifiez chaque série de fractions ci-dessous en ordre croissant.

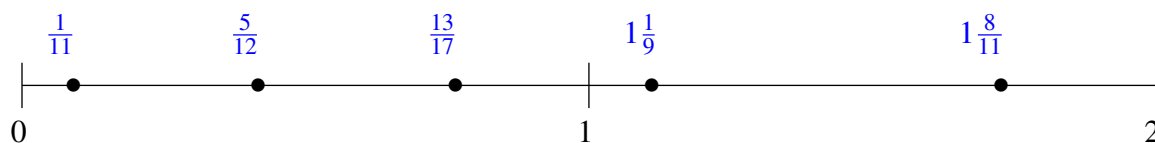
$$1\frac{4}{5}, \frac{3}{4}, \frac{1}{8}, 1\frac{1}{2}, 1\frac{1}{5}$$



$$\frac{7}{9}, \frac{7}{15}, \frac{1}{7}, 1\frac{3}{4}, 1\frac{1}{6}$$



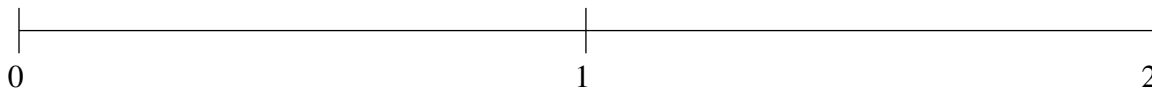
$$\frac{5}{12}, 1\frac{8}{11}, \frac{1}{11}, \frac{13}{17}, 1\frac{1}{9}$$



Classification de Fractions (B)

À l'aide des droites numériques, classifiez chaque série de fractions ci-dessous en ordre croissant.

$$1\frac{8}{13}, 1\frac{15}{16}, 1\frac{3}{10}, \frac{11}{12}, \frac{2}{5}$$



$$\frac{2}{3}, 1\frac{1}{2}, 1\frac{1}{5}, \frac{3}{10}, 1\frac{13}{14}$$



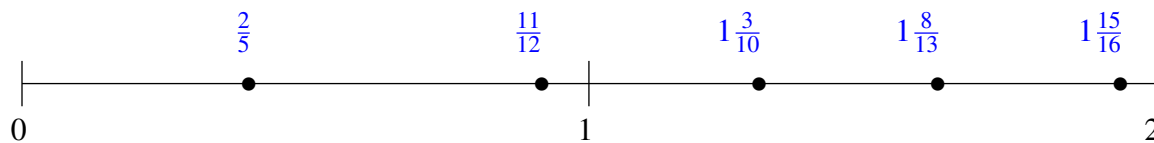
$$\frac{4}{5}, \frac{1}{18}, 1\frac{2}{11}, \frac{4}{9}, 1\frac{2}{3}$$



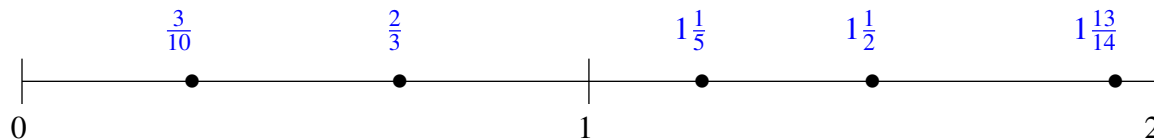
Classification de Fractions (B) Solutions

À l'aide des droites numériques, classifiez chaque série de fractions ci-dessous en ordre croissant.

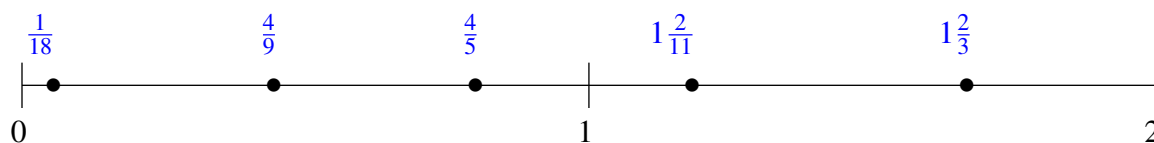
$$1\frac{8}{13}, 1\frac{15}{16}, 1\frac{3}{10}, \frac{11}{12}, \frac{2}{5}$$



$$\frac{2}{3}, 1\frac{1}{2}, 1\frac{1}{5}, \frac{3}{10}, 1\frac{13}{14}$$



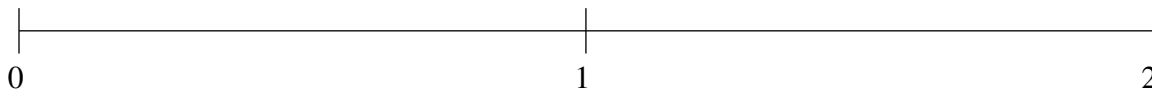
$$\frac{4}{5}, \frac{1}{18}, 1\frac{2}{11}, \frac{4}{9}, 1\frac{2}{3}$$



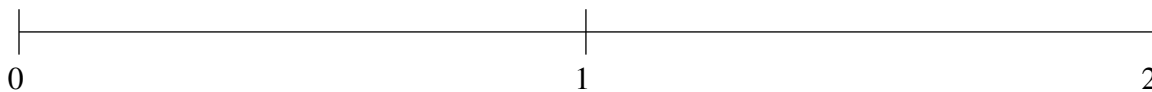
Classification de Fractions (C)

À l'aide des droites numériques, classifiez chaque série de fractions ci-dessous en ordre croissant.

$$\frac{1}{3}, \frac{15}{22}, 1\frac{1}{9}, 1\frac{3}{4}, 1\frac{7}{16}$$



$$1\frac{1}{9}, 1\frac{6}{7}, \frac{6}{11}, 1\frac{2}{5}, \frac{8}{9}$$



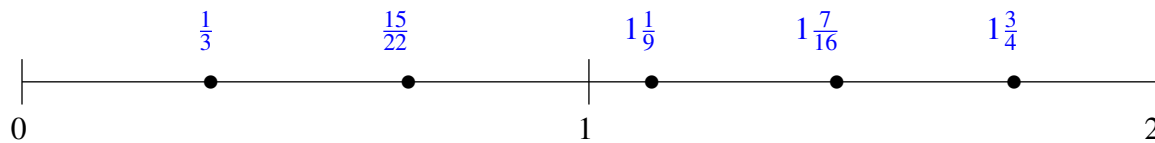
$$1\frac{6}{11}, \frac{3}{4}, \frac{1}{3}, 1\frac{1}{12}, 1\frac{6}{7}$$



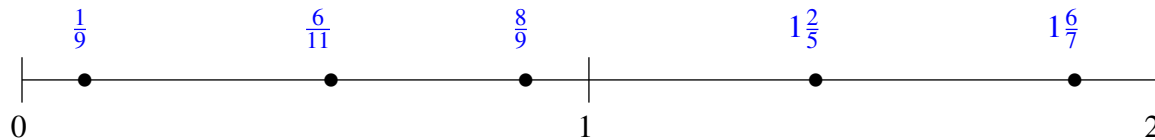
Classification de Fractions (C) Solutions

À l'aide des droites numériques, classifiez chaque série de fractions ci-dessous en ordre croissant.

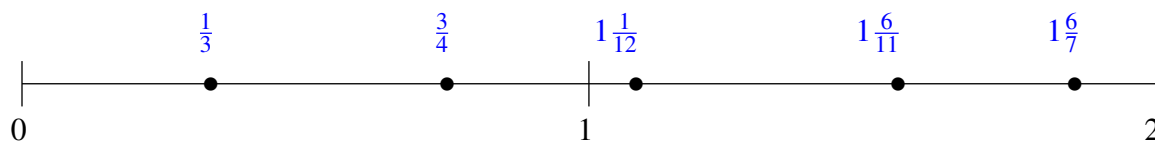
$$\frac{1}{3}, \frac{15}{22}, 1\frac{1}{9}, 1\frac{3}{4}, 1\frac{7}{16}$$



$$1\frac{1}{9}, 1\frac{6}{7}, \frac{6}{11}, 1\frac{2}{5}, \frac{8}{9}$$



$$1\frac{6}{11}, \frac{3}{4}, \frac{1}{3}, 1\frac{1}{12}, 1\frac{6}{7}$$



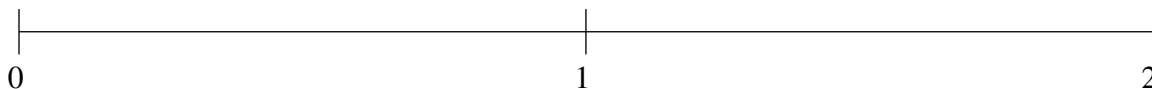
Classification de Fractions (D)

À l'aide des droites numériques, classifiez chaque série de fractions ci-dessous en ordre croissant.

$$1\frac{1}{7}, 1\frac{5}{6}, 1\frac{1}{2}, \frac{1}{3}, \frac{10}{13}$$



$$1\frac{5}{6}, \frac{4}{5}, \frac{1}{7}, 1\frac{7}{19}, \frac{1}{2}$$



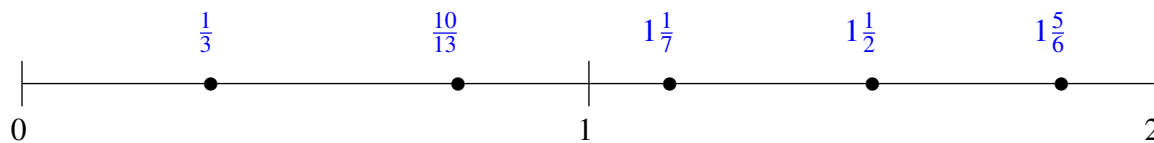
$$\frac{3}{4}, 1\frac{1}{7}, \frac{1}{17}, 1\frac{5}{6}, 1\frac{1}{2}$$



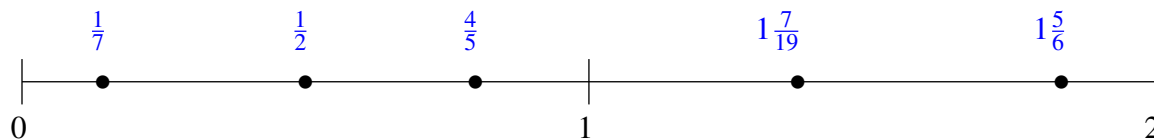
Classification de Fractions (D) Solutions

À l'aide des droites numériques, classifiez chaque série de fractions ci-dessous en ordre croissant.

$$1\frac{1}{7}, 1\frac{5}{6}, 1\frac{1}{2}, \frac{1}{3}, \frac{10}{13}$$



$$1\frac{5}{6}, \frac{4}{5}, \frac{1}{7}, 1\frac{7}{19}, \frac{1}{2}$$



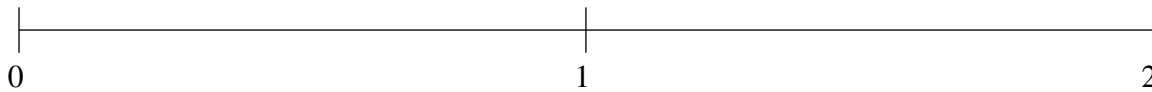
$$\frac{3}{4}, 1\frac{1}{7}, \frac{1}{17}, 1\frac{5}{6}, 1\frac{1}{2}$$



Classification de Fractions (E)

À l'aide des droites numériques, classifiez chaque série de fractions ci-dessous en ordre croissant.

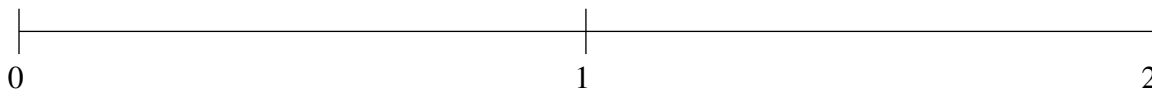
$$1\frac{1}{7}, 1\frac{2}{3}, \frac{3}{17}, \frac{4}{5}, \frac{1}{2}$$



$$\frac{1}{2}, 1\frac{4}{9}, \frac{15}{16}, \frac{1}{24}, 1\frac{9}{11}$$



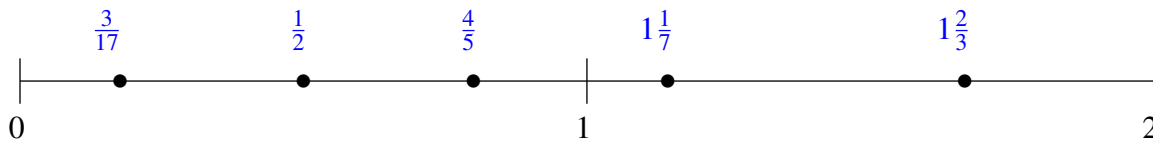
$$1\frac{3}{4}, \frac{1}{5}, \frac{1}{2}, 1\frac{2}{9}, \frac{4}{5}$$



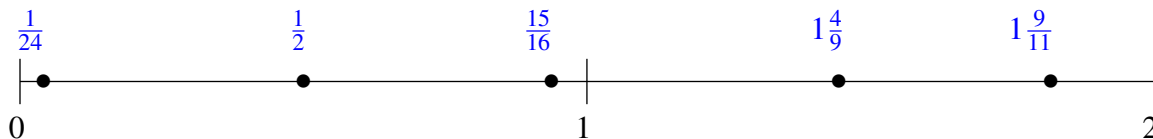
Classification de Fractions (E) Solutions

À l'aide des droites numériques, classifiez chaque série de fractions ci-dessous en ordre croissant.

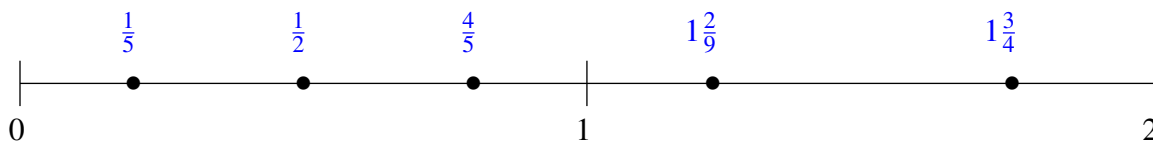
$$1\frac{1}{7}, 1\frac{2}{3}, \frac{3}{17}, \frac{4}{5}, \frac{1}{2}$$



$$\frac{1}{2}, 1\frac{4}{9}, \frac{15}{16}, \frac{1}{24}, 1\frac{9}{11}$$



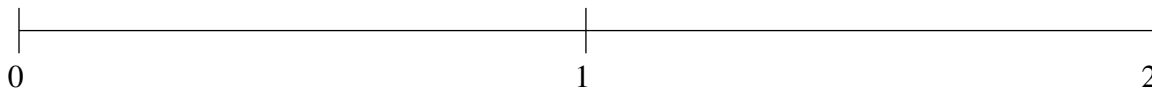
$$1\frac{3}{4}, \frac{1}{5}, \frac{1}{2}, 1\frac{2}{9}, \frac{4}{5}$$



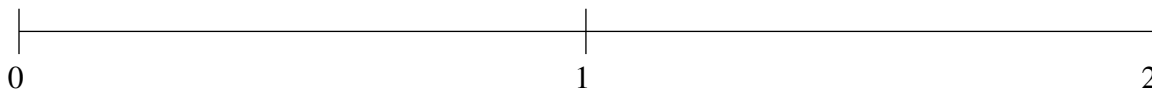
Classification de Fractions (F)

À l'aide des droites numériques, classifiez chaque série de fractions ci-dessous en ordre croissant.

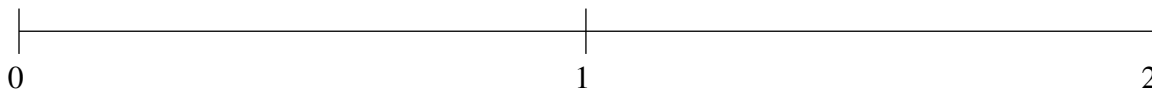
$$1\frac{6}{7}, 1\frac{5}{12}, \frac{1}{8}, \frac{11}{24}, \frac{11}{12}$$



$$\frac{13}{15}, \frac{1}{2}, 1\frac{1}{2}, 1\frac{20}{23}, 1\frac{1}{5}$$



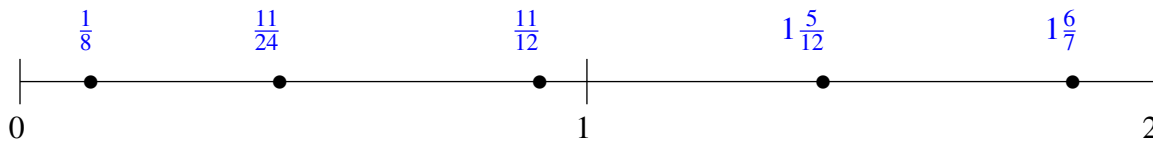
$$1\frac{7}{10}, \frac{10}{11}, 1\frac{1}{4}, \frac{1}{8}, \frac{3}{5}$$



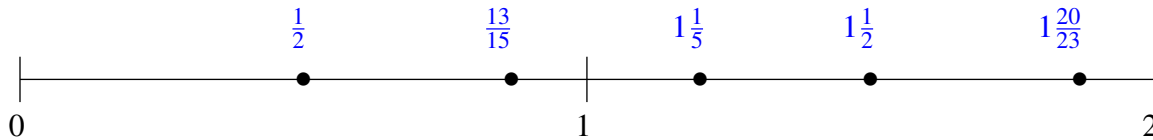
Classification de Fractions (F) Solutions

À l'aide des droites numériques, classifiez chaque série de fractions ci-dessous en ordre croissant.

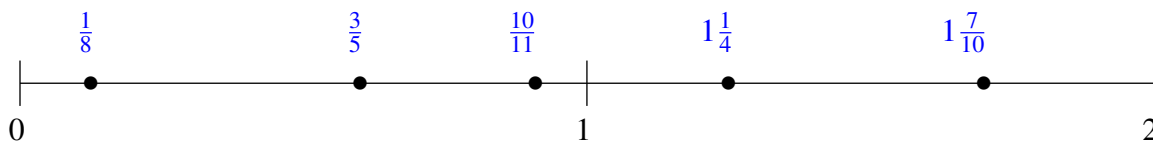
$$1\frac{6}{7}, 1\frac{5}{12}, \frac{1}{8}, \frac{11}{24}, \frac{11}{12}$$



$$\frac{13}{15}, \frac{1}{2}, 1\frac{1}{2}, 1\frac{20}{23}, 1\frac{1}{5}$$



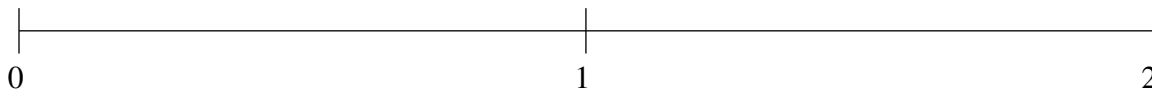
$$1\frac{7}{10}, \frac{10}{11}, 1\frac{1}{4}, \frac{1}{8}, \frac{3}{5}$$



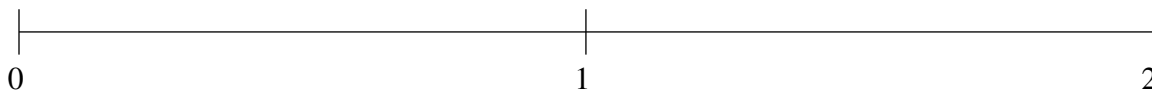
Classification de Fractions (G)

À l'aide des droites numériques, classifiez chaque série de fractions ci-dessous en ordre croissant.

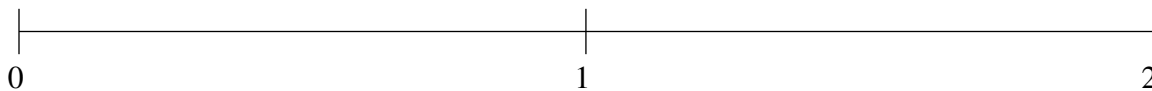
$$\frac{2}{9}, 1\frac{3}{5}, \frac{6}{11}, 1\frac{1}{4}, \frac{6}{7}$$



$$\frac{5}{11}, \frac{5}{6}, \frac{1}{11}, 1\frac{4}{5}, 1\frac{1}{2}$$



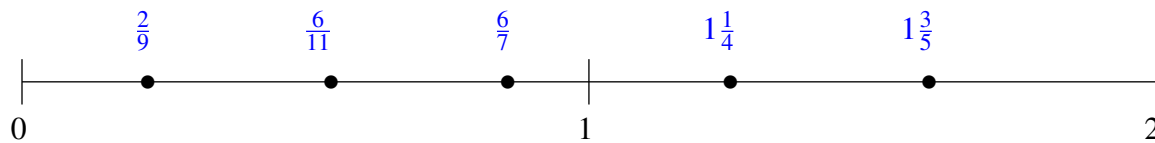
$$1\frac{1}{3}, \frac{1}{2}, \frac{3}{23}, 1\frac{9}{14}, \frac{4}{5}$$



Classification de Fractions (G) Solutions

À l'aide des droites numériques, classifiez chaque série de fractions ci-dessous en ordre croissant.

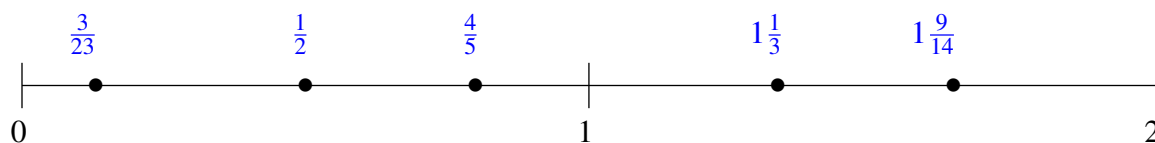
$$\frac{2}{9}, 1\frac{3}{5}, \frac{6}{11}, 1\frac{1}{4}, \frac{6}{7}$$



$$\frac{5}{11}, \frac{5}{6}, \frac{1}{11}, 1\frac{4}{5}, 1\frac{1}{2}$$



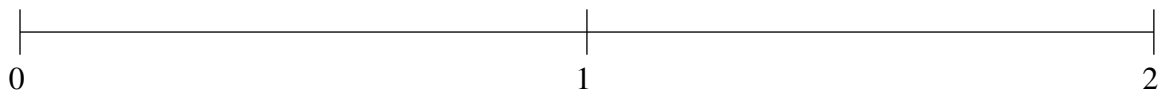
$$1\frac{1}{3}, \frac{1}{2}, \frac{3}{23}, 1\frac{9}{14}, \frac{4}{5}$$



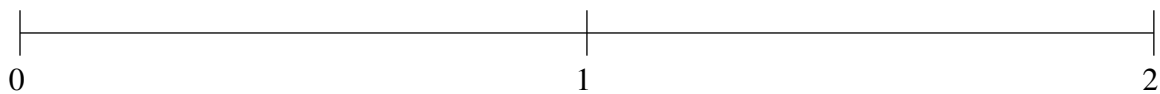
Classification de Fractions (H)

À l'aide des droites numériques, classifiez chaque série de fractions ci-dessous en ordre croissant.

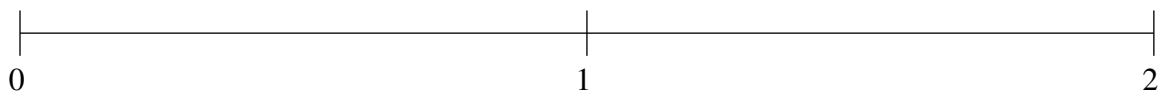
$$1\frac{12}{13}, \frac{1}{7}, 1\frac{1}{2}, \frac{1}{2}, \frac{7}{8}$$



$$1\frac{1}{6}, \frac{4}{5}, \frac{1}{8}, \frac{1}{2}, 1\frac{1}{2}$$



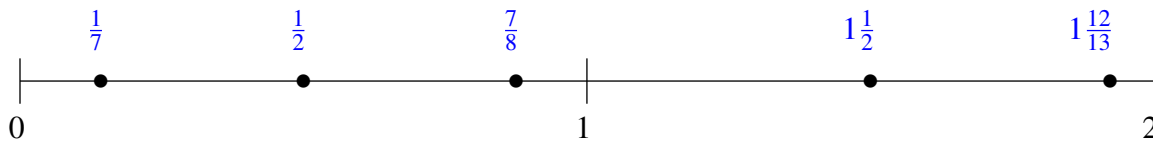
$$\frac{2}{11}, 1\frac{18}{19}, \frac{2}{3}, 1\frac{1}{4}, 1\frac{3}{5}$$



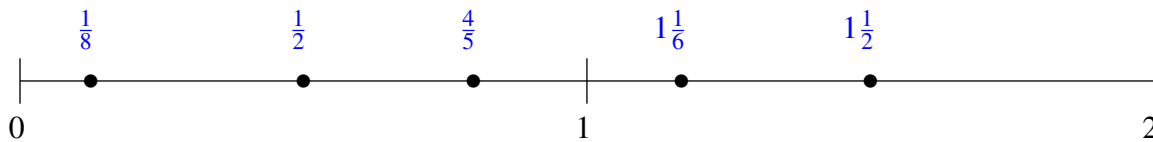
Classification de Fractions (H) Solutions

À l'aide des droites numériques, classifiez chaque série de fractions ci-dessous en ordre croissant.

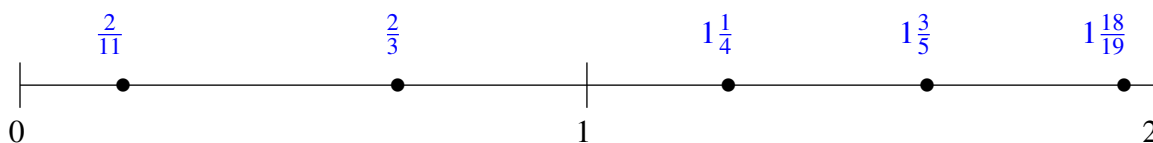
$$1\frac{12}{13}, \frac{1}{7}, 1\frac{1}{2}, \frac{1}{2}, \frac{7}{8}$$



$$1\frac{1}{6}, \frac{4}{5}, \frac{1}{8}, \frac{1}{2}, 1\frac{1}{2}$$



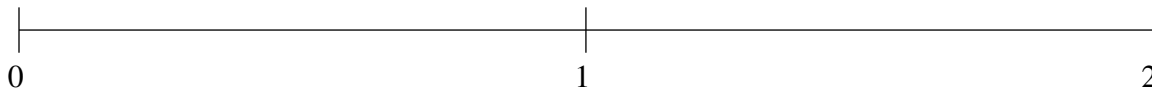
$$\frac{2}{11}, 1\frac{18}{19}, \frac{2}{3}, 1\frac{1}{4}, 1\frac{3}{5}$$



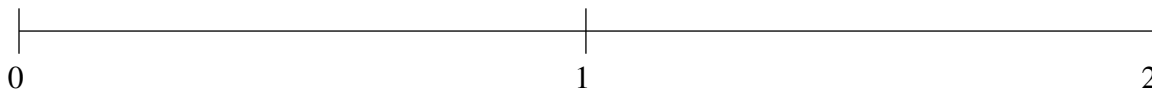
Classification de Fractions (I)

À l'aide des droites numériques, classifiez chaque série de fractions ci-dessous en ordre croissant.

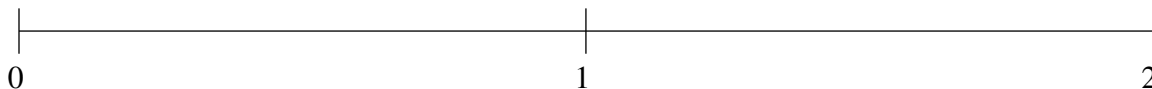
$$\frac{2}{7}, \frac{3}{5}, \frac{13}{14}, 1\frac{2}{3}, 1\frac{1}{4}$$



$$1\frac{1}{6}, \frac{4}{5}, 1\frac{2}{3}, \frac{1}{2}, \frac{4}{21}$$



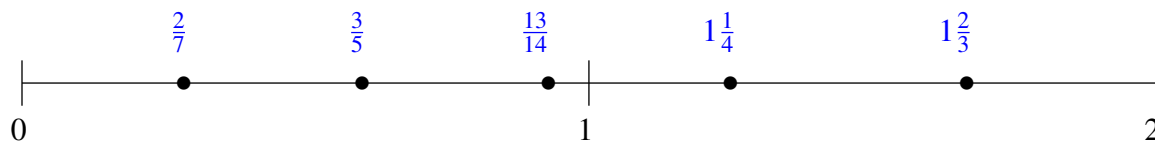
$$1\frac{1}{2}, \frac{3}{4}, \frac{1}{4}, 1\frac{1}{5}, 1\frac{10}{11}$$



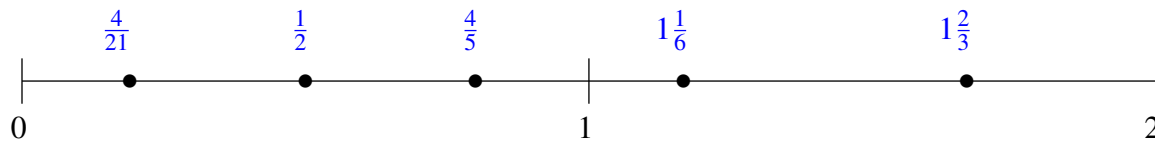
Classification de Fractions (I) Solutions

À l'aide des droites numériques, classifiez chaque série de fractions ci-dessous en ordre croissant.

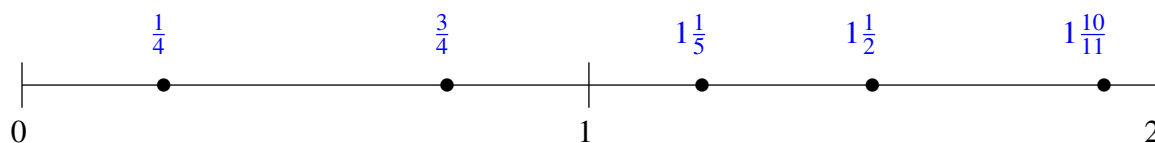
$$\frac{2}{7}, \frac{3}{5}, \frac{13}{14}, 1\frac{2}{3}, 1\frac{1}{4}$$



$$1\frac{1}{6}, \frac{4}{5}, 1\frac{2}{3}, \frac{1}{2}, \frac{4}{21}$$



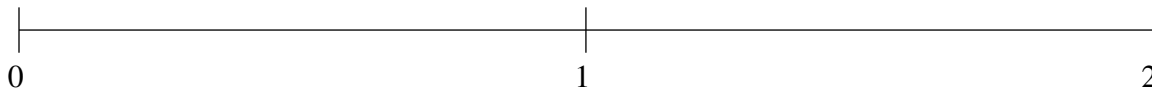
$$1\frac{1}{2}, \frac{3}{4}, \frac{1}{4}, 1\frac{1}{5}, 1\frac{10}{11}$$



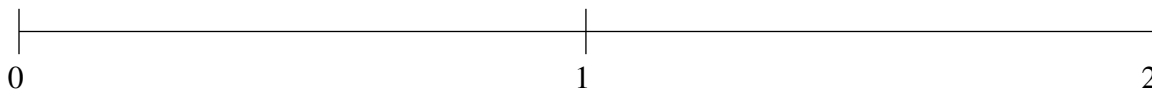
Classification de Fractions (J)

À l'aide des droites numériques, classifiez chaque série de fractions ci-dessous en ordre croissant.

$$1\frac{1}{10}, 1\frac{17}{21}, \frac{1}{2}, 1\frac{1}{2}, \frac{1}{6}$$



$$\frac{2}{11}, \frac{1}{2}, 1\frac{5}{19}, \frac{4}{5}, 1\frac{3}{5}$$



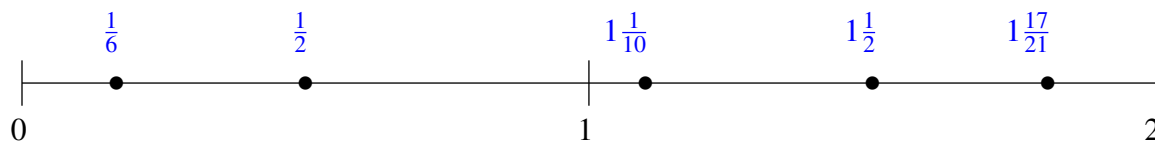
$$1\frac{8}{9}, \frac{2}{3}, 1\frac{1}{6}, \frac{1}{5}, 1\frac{1}{2}$$



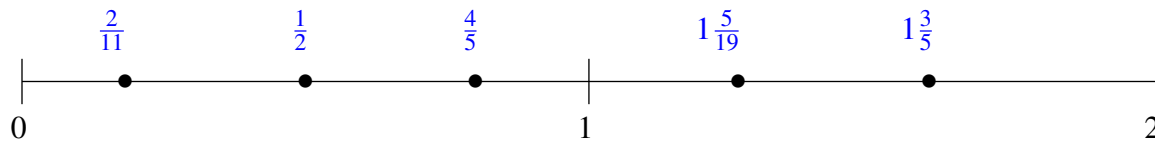
Classification de Fractions (J) Solutions

À l'aide des droites numériques, classifiez chaque série de fractions ci-dessous en ordre croissant.

$$1\frac{1}{10}, 1\frac{17}{21}, \frac{1}{2}, 1\frac{1}{2}, \frac{1}{6}$$



$$\frac{2}{11}, \frac{1}{2}, 1\frac{5}{19}, \frac{4}{5}, 1\frac{3}{5}$$



$$1\frac{8}{9}, \frac{2}{3}, 1\frac{1}{6}, \frac{1}{5}, 1\frac{1}{2}$$

