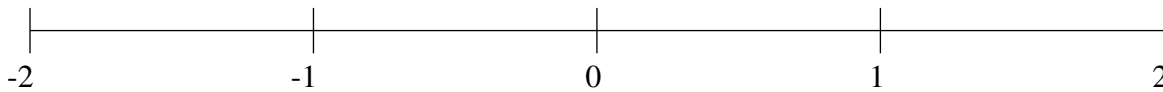


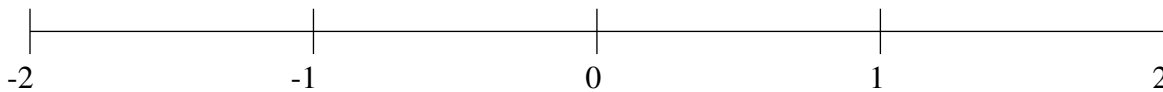
Classification de Fractions (C)

À l'aide des droites numériques, classifiez chaque série de fractions ci-dessous en ordre croissant.

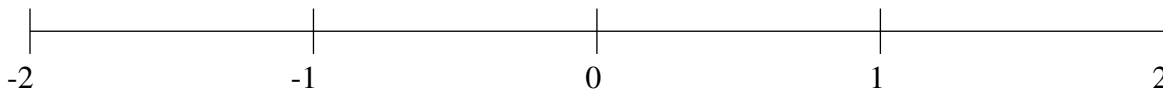
$$\frac{5}{8}, \frac{1}{17}, -\frac{2}{7}, -1\frac{2}{15}, -1\frac{7}{8}$$



$$1\frac{1}{6}, \frac{1}{2}, -\frac{2}{5}, 1\frac{7}{13}, 1\frac{11}{12}$$



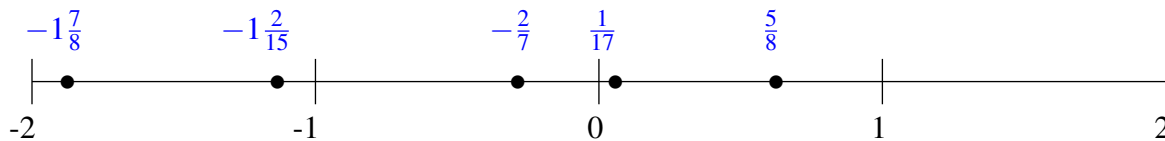
$$\frac{3}{4}, \frac{1}{4}, 1\frac{3}{4}, -\frac{4}{7}, -1\frac{2}{3}$$



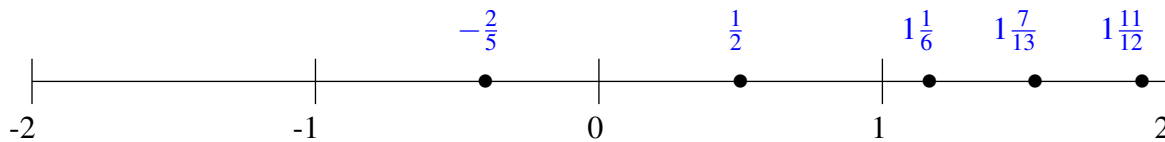
Classification de Fractions (C) Solutions

À l'aide des droites numériques, classifiez chaque série de fractions ci-dessous en ordre croissant.

$$\frac{5}{8}, \frac{1}{17}, -\frac{2}{7}, -1\frac{2}{15}, -1\frac{7}{8}$$



$$1\frac{1}{6}, \frac{1}{2}, -\frac{2}{5}, 1\frac{7}{13}, 1\frac{11}{12}$$



$$\frac{3}{4}, \frac{1}{4}, 1\frac{3}{4}, -\frac{4}{7}, -1\frac{2}{3}$$

