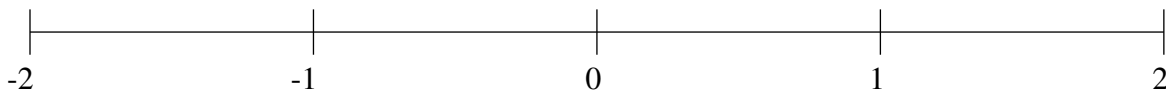


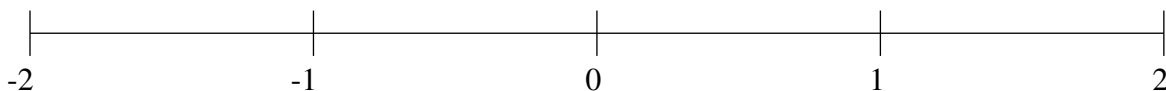
Classification de Fractions (F)

À l'aide des droites numériques, classifiez chaque série de fractions ci-dessous en ordre croissant.

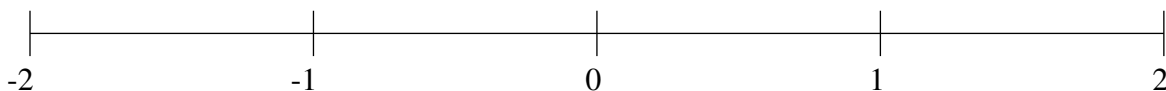
$$-\frac{1}{2}, -1\frac{1}{6}, -1\frac{1}{2}, -\frac{1}{8}, \frac{1}{4}$$



$$1\frac{1}{2}, \frac{1}{2}, -1\frac{1}{2}, -\frac{2}{3}, -1\frac{5}{6}$$



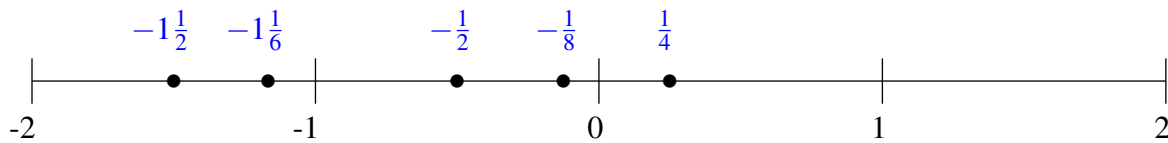
$$-1\frac{3}{4}, \frac{5}{12}, \frac{3}{4}, -\frac{1}{2}, -1\frac{1}{3}$$



Classification de Fractions (F) Solutions

À l'aide des droites numériques, classifiez chaque série de fractions ci-dessous en ordre croissant.

$$-\frac{1}{2}, -1\frac{1}{6}, -1\frac{1}{2}, -\frac{1}{8}, \frac{1}{4}$$



$$1\frac{1}{2}, \frac{1}{2}, -1\frac{1}{2}, -\frac{2}{3}, -1\frac{5}{6}$$



$$-1\frac{3}{4}, \frac{5}{12}, \frac{3}{4}, -\frac{1}{2}, -1\frac{1}{3}$$

