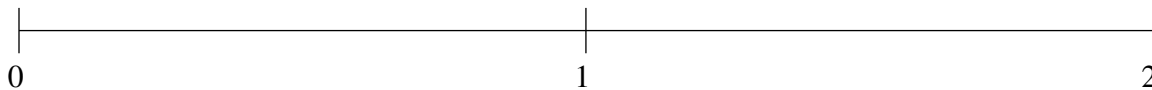


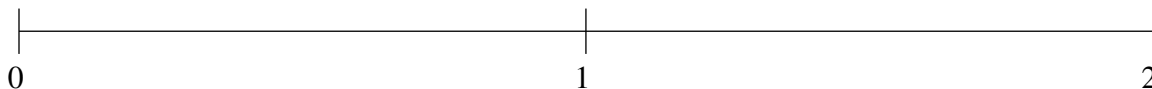
## Classification de Fractions (J)

À l'aide des droites numériques, classifiez chaque série de fractions ci-dessous en ordre croissant.

$$\frac{3}{4}, \frac{1}{2}, 1\frac{5}{6}, \frac{1}{6}, 1\frac{1}{4}$$



$$1\frac{3}{8}, \frac{1}{2}, \frac{1}{6}, 1\frac{1}{6}, \frac{3}{4}$$



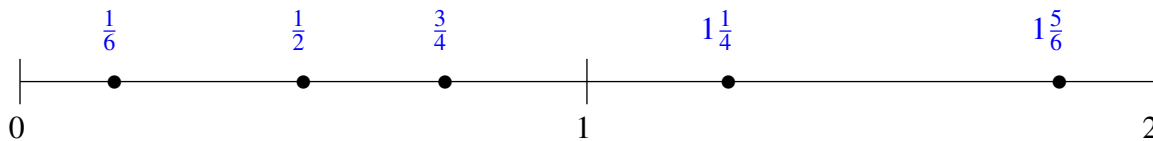
$$\frac{1}{2}, 1\frac{5}{6}, 1\frac{1}{2}, \frac{1}{4}, 1\frac{1}{4}$$



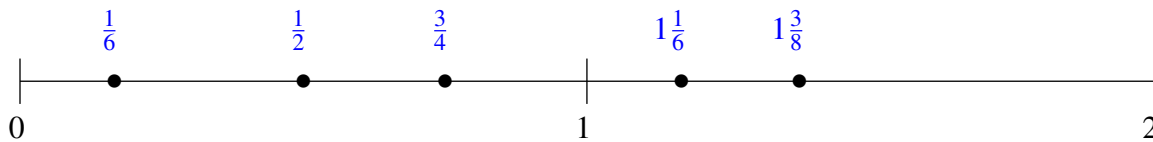
## Classification de Fractions (J) Solutions

À l'aide des droites numériques, classifiez chaque série de fractions ci-dessous en ordre croissant.

$$\frac{3}{4}, \frac{1}{2}, 1\frac{5}{6}, \frac{1}{6}, 1\frac{1}{4}$$



$$1\frac{3}{8}, \frac{1}{2}, \frac{1}{6}, 1\frac{1}{6}, \frac{3}{4}$$



$$\frac{1}{2}, 1\frac{5}{6}, 1\frac{1}{2}, \frac{1}{4}, 1\frac{1}{4}$$

