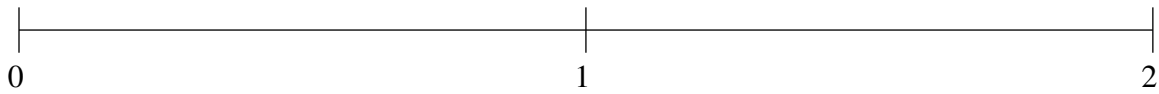


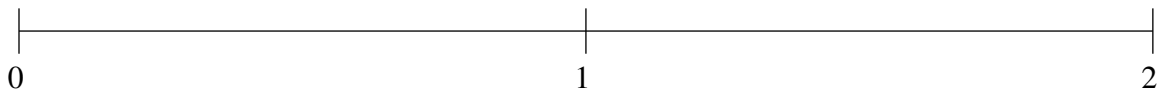
Classification de Fractions (E)

À l'aide des droites numériques, classifiez chaque série de fractions ci-dessous en ordre croissant.

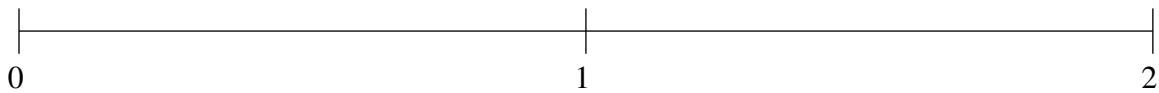
$$1\frac{1}{4}, 1\frac{1}{2}, 1\frac{3}{4}, \frac{2}{3}, \frac{1}{3}$$



$$1\frac{1}{2}, 1\frac{1}{4}, \frac{3}{4}, \frac{1}{4}, 1\frac{7}{8}$$



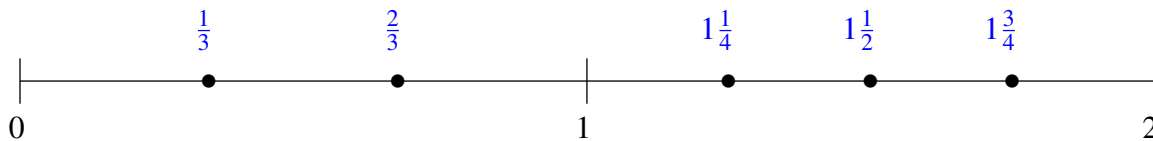
$$1\frac{1}{6}, \frac{1}{12}, \frac{2}{3}, 1\frac{7}{8}, 1\frac{1}{2}$$



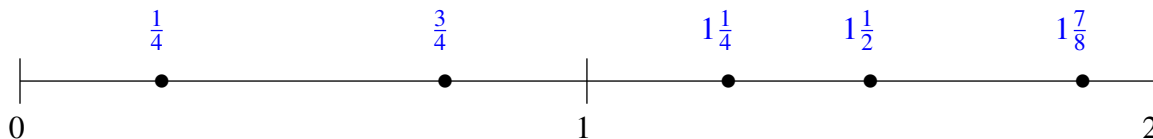
Classification de Fractions (E) Solutions

À l'aide des droites numériques, classifiez chaque série de fractions ci-dessous en ordre croissant.

$$1\frac{1}{4}, 1\frac{1}{2}, 1\frac{3}{4}, \frac{2}{3}, \frac{1}{3}$$



$$1\frac{1}{2}, 1\frac{1}{4}, \frac{3}{4}, \frac{1}{4}, 1\frac{7}{8}$$



$$1\frac{1}{6}, \frac{1}{12}, \frac{2}{3}, 1\frac{7}{8}, 1\frac{1}{2}$$

