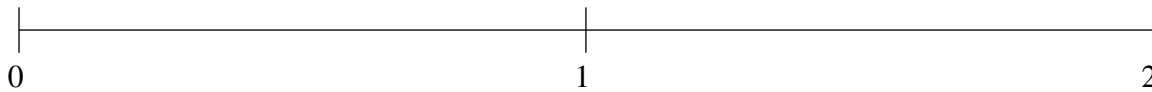


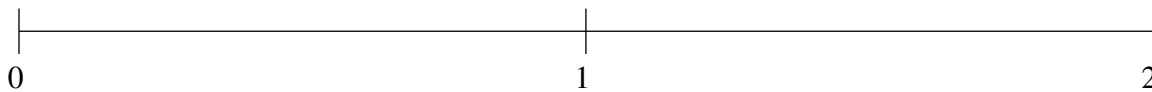
## Classification de Fractions (B)

À l'aide des droites numériques, classifiez chaque série de fractions ci-dessous en ordre croissant.

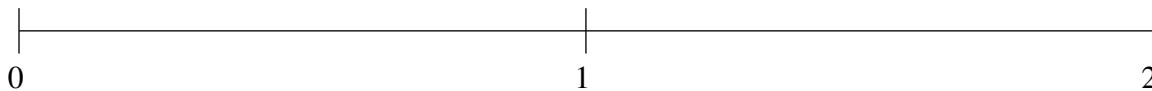
$$\frac{1}{4}, \frac{3}{4}, 1\frac{1}{6}, 1\frac{1}{2}, \frac{1}{2}$$



$$\frac{7}{12}, 1\frac{1}{4}, 1\frac{2}{3}, \frac{1}{8}, \frac{1}{3}$$



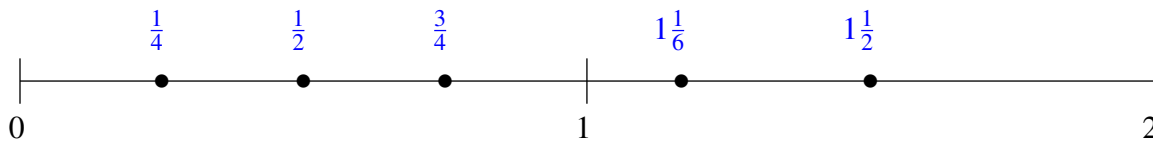
$$\frac{1}{2}, \frac{19}{24}, \frac{1}{4}, 1\frac{1}{2}, 1\frac{3}{4}$$



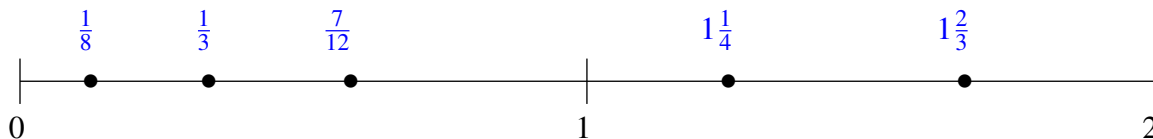
## Classification de Fractions (B) Solutions

À l'aide des droites numériques, classifiez chaque série de fractions ci-dessous en ordre croissant.

$$\frac{1}{4}, \frac{3}{4}, 1\frac{1}{6}, 1\frac{1}{2}, \frac{1}{2}$$



$$\frac{7}{12}, 1\frac{1}{4}, 1\frac{2}{3}, \frac{1}{8}, \frac{1}{3}$$



$$\frac{1}{2}, \frac{19}{24}, \frac{1}{4}, 1\frac{1}{2}, 1\frac{3}{4}$$

