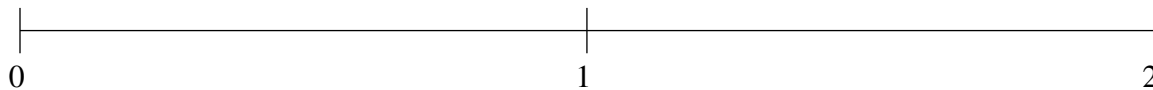


## Classification de Fractions (A)

À l'aide des droites numériques, classifiez chaque série de fractions ci-dessous en ordre croissant.

$$1\frac{2}{3}, 1\frac{1}{3}, 1\frac{7}{8}, \frac{5}{8}, \frac{1}{4}$$



$$1\frac{1}{3}, 1\frac{11}{12}, 1\frac{1}{8}, \frac{1}{8}, 1\frac{2}{3}$$



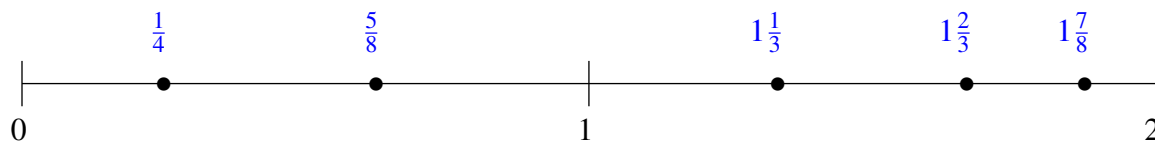
$$1\frac{1}{3}, \frac{7}{8}, 1\frac{1}{12}, \frac{1}{2}, \frac{1}{4}$$



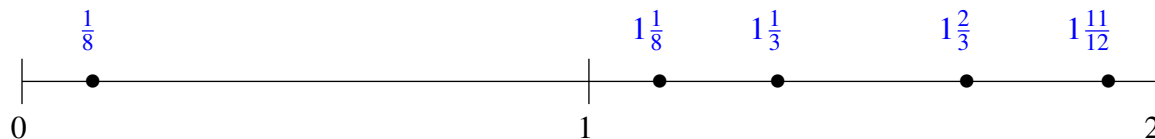
## Classification de Fractions (A) Solutions

À l'aide des droites numériques, classifiez chaque série de fractions ci-dessous en ordre croissant.

$$1\frac{2}{3}, 1\frac{1}{3}, 1\frac{7}{8}, \frac{5}{8}, \frac{1}{4}$$



$$1\frac{1}{3}, 1\frac{11}{12}, 1\frac{1}{8}, \frac{1}{8}, 1\frac{2}{3}$$



$$1\frac{1}{3}, \frac{7}{8}, 1\frac{1}{12}, \frac{1}{2}, \frac{1}{4}$$

