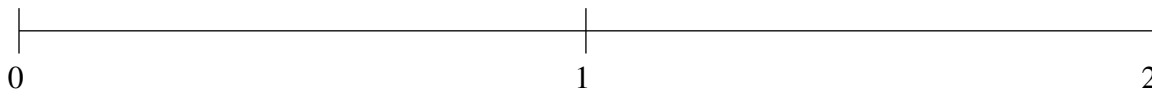


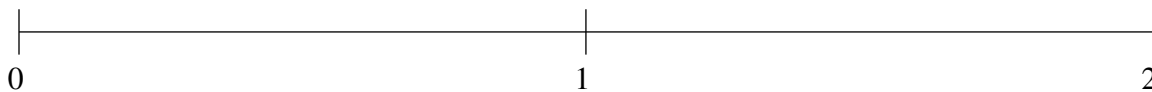
Classification de Fractions (G)

À l'aide des droites numériques, classifiez chaque série de fractions ci-dessous en ordre croissant.

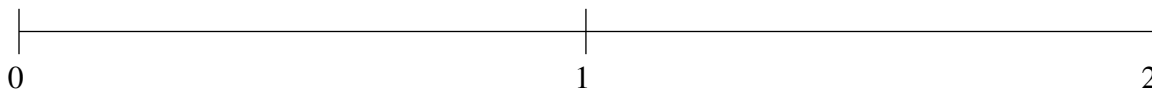
$$\frac{2}{9}, 1\frac{3}{5}, \frac{6}{11}, 1\frac{1}{4}, \frac{6}{7}$$



$$\frac{5}{11}, \frac{5}{6}, \frac{1}{11}, 1\frac{4}{5}, 1\frac{1}{2}$$



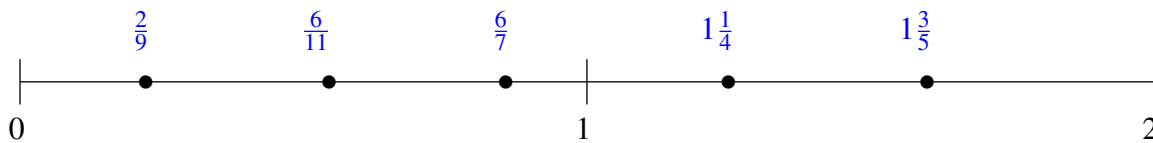
$$1\frac{1}{3}, \frac{1}{2}, \frac{3}{23}, 1\frac{9}{14}, \frac{4}{5}$$



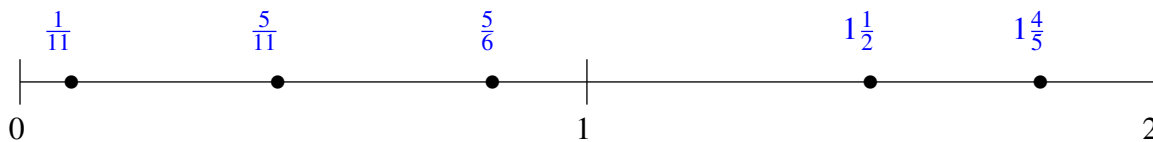
Classification de Fractions (G) Solutions

À l'aide des droites numériques, classifiez chaque série de fractions ci-dessous en ordre croissant.

$$\frac{2}{9}, 1\frac{3}{5}, \frac{6}{11}, 1\frac{1}{4}, \frac{6}{7}$$



$$\frac{5}{11}, \frac{5}{6}, \frac{1}{11}, 1\frac{4}{5}, 1\frac{1}{2}$$



$$1\frac{1}{3}, \frac{1}{2}, \frac{3}{23}, 1\frac{9}{14}, \frac{4}{5}$$

