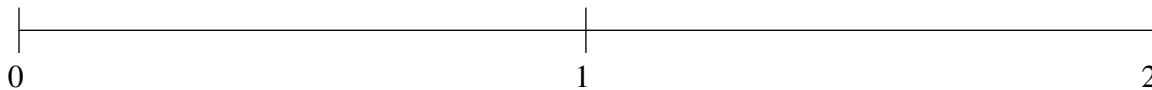


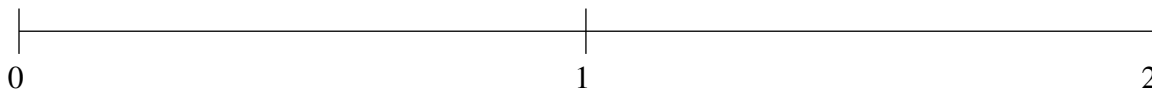
## Classification de Fractions (A)

À l'aide des droites numériques, classifiez chaque série de fractions ci-dessous en ordre croissant.

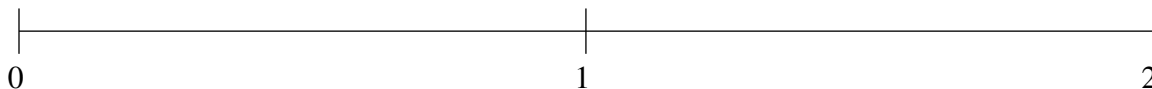
$$1\frac{1}{5}, 1\frac{1}{2}, \frac{8}{9}, 1\frac{4}{5}, \frac{1}{4}$$



$$1\frac{4}{5}, 1\frac{1}{2}, \frac{3}{4}, 1\frac{1}{6}, \frac{1}{3}$$



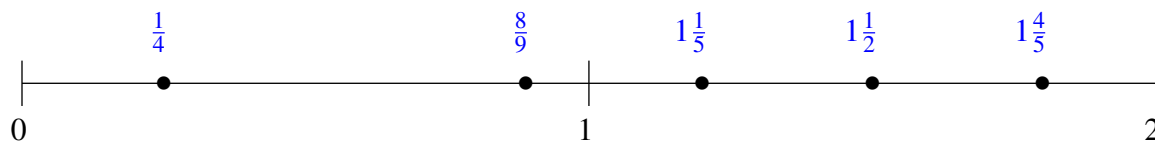
$$1\frac{1}{2}, 1\frac{1}{5}, \frac{4}{5}, \frac{1}{5}, \frac{1}{2}$$



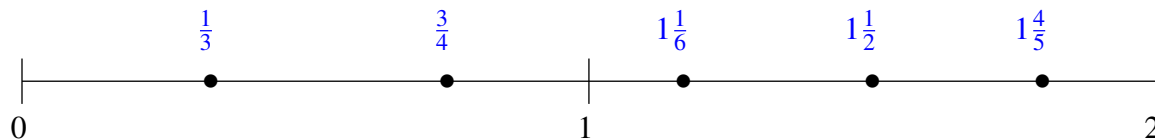
## Classification de Fractions (A) Solutions

À l'aide des droites numériques, classifiez chaque série de fractions ci-dessous en ordre croissant.

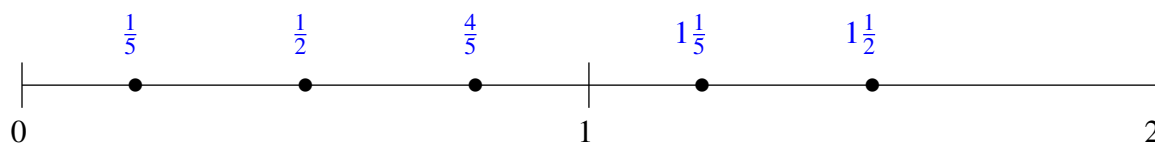
$$1\frac{1}{5}, 1\frac{1}{2}, \frac{8}{9}, 1\frac{4}{5}, \frac{1}{4}$$



$$1\frac{4}{5}, 1\frac{1}{2}, \frac{3}{4}, 1\frac{1}{6}, \frac{1}{3}$$



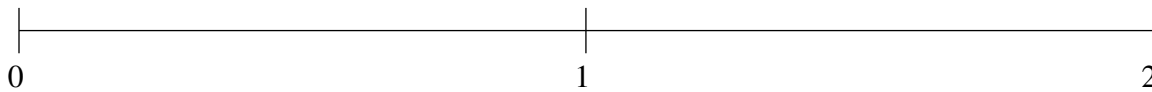
$$1\frac{1}{2}, 1\frac{1}{5}, \frac{4}{5}, \frac{1}{5}, \frac{1}{2}$$



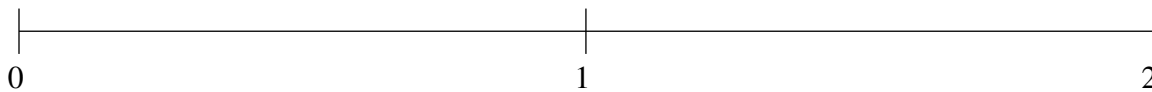
## Classification de Fractions (B)

À l'aide des droites numériques, classifiez chaque série de fractions ci-dessous en ordre croissant.

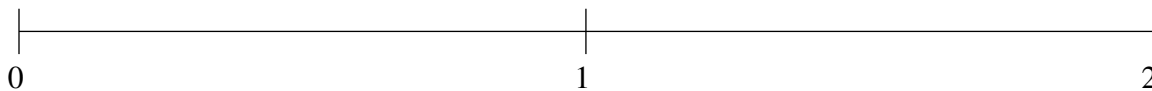
$$1\frac{1}{2}, \frac{1}{3}, 1\frac{1}{6}, 1\frac{6}{7}, \frac{3}{4}$$



$$1\frac{1}{2}, \frac{4}{5}, \frac{1}{7}, \frac{1}{2}, 1\frac{4}{5}$$



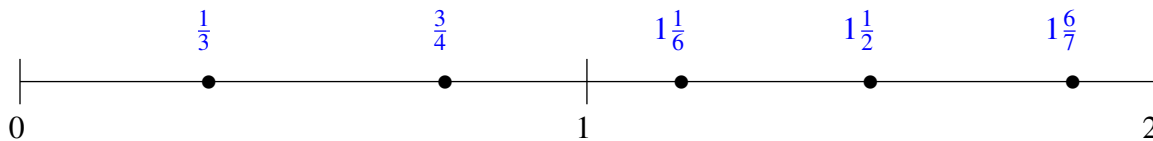
$$1\frac{3}{4}, 1\frac{2}{5}, \frac{5}{6}, \frac{1}{2}, \frac{1}{5}$$



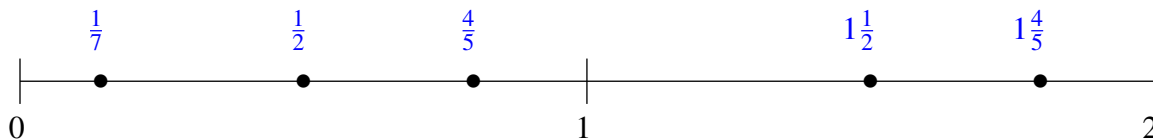
## Classification de Fractions (B) Solutions

À l'aide des droites numériques, classifiez chaque série de fractions ci-dessous en ordre croissant.

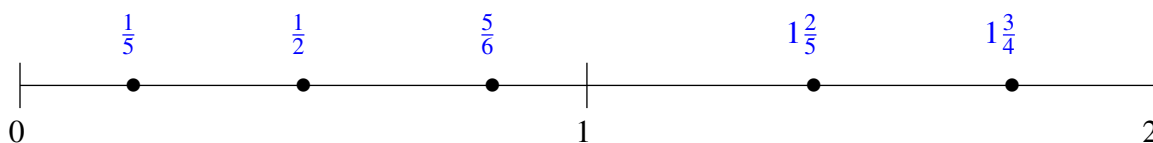
$$1\frac{1}{2}, \frac{1}{3}, 1\frac{1}{6}, 1\frac{6}{7}, \frac{3}{4}$$



$$1\frac{1}{2}, \frac{4}{5}, \frac{1}{7}, \frac{1}{2}, 1\frac{4}{5}$$



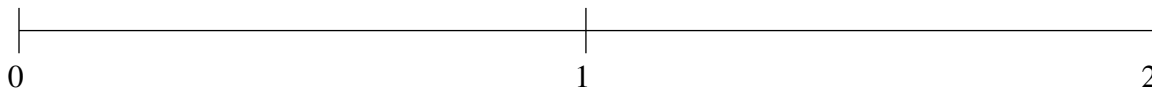
$$1\frac{3}{4}, 1\frac{2}{5}, \frac{5}{6}, \frac{1}{2}, \frac{1}{5}$$



## Classification de Fractions (C)

À l'aide des droites numériques, classifiez chaque série de fractions ci-dessous en ordre croissant.

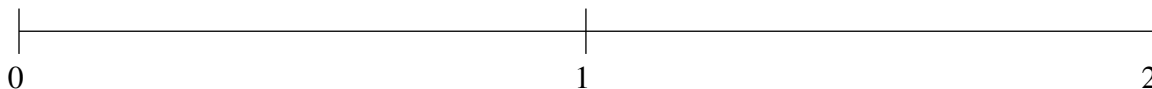
$$1\frac{5}{6}, \frac{1}{8}, 1\frac{1}{5}, 1\frac{1}{2}, \frac{3}{7}$$



$$\frac{2}{3}, 1\frac{1}{2}, 1\frac{1}{6}, \frac{1}{3}, 1\frac{4}{5}$$



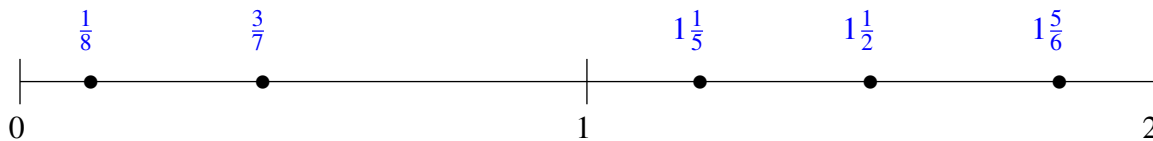
$$1\frac{2}{3}, \frac{3}{7}, \frac{1}{10}, \frac{4}{5}, 1\frac{1}{3}$$



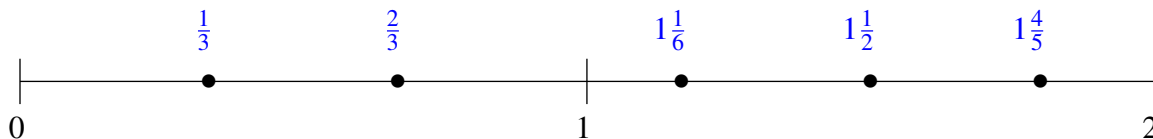
## Classification de Fractions (C) Solutions

À l'aide des droites numériques, classifiez chaque série de fractions ci-dessous en ordre croissant.

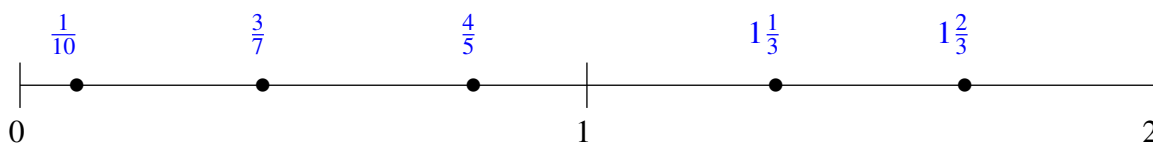
$$1\frac{5}{6}, \frac{1}{8}, 1\frac{1}{5}, 1\frac{1}{2}, \frac{3}{7}$$



$$\frac{2}{3}, 1\frac{1}{2}, 1\frac{1}{6}, \frac{1}{3}, 1\frac{4}{5}$$



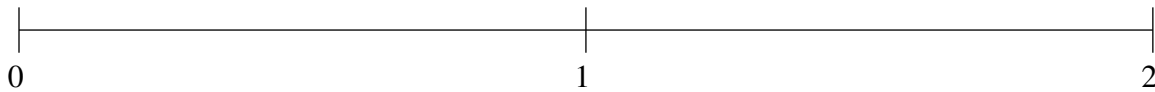
$$1\frac{2}{3}, \frac{3}{7}, \frac{1}{10}, \frac{4}{5}, 1\frac{1}{3}$$



## Classification de Fractions (D)

À l'aide des droites numériques, classifiez chaque série de fractions ci-dessous en ordre croissant.

$$1\frac{1}{2}, \frac{3}{4}, 1\frac{4}{5}, 1\frac{1}{5}, \frac{2}{5}$$



$$1\frac{3}{10}, 1\frac{5}{6}, \frac{3}{4}, \frac{3}{7}, \frac{1}{9}$$



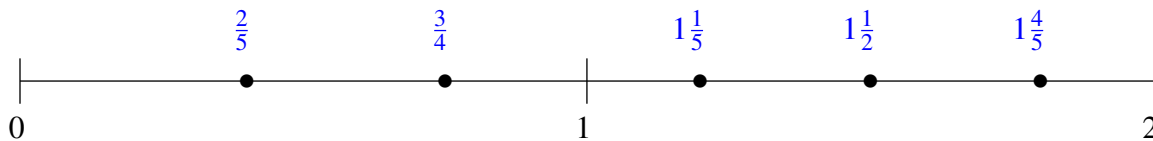
$$1\frac{3}{7}, 1\frac{1}{8}, \frac{1}{3}, 1\frac{3}{4}, \frac{3}{4}$$



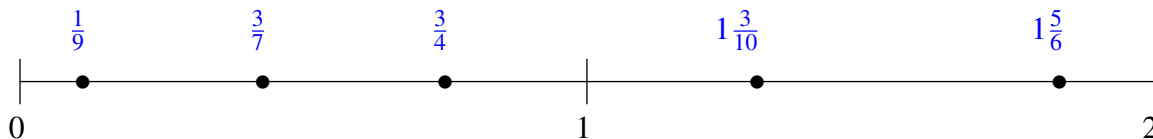
## Classification de Fractions (D) Solutions

À l'aide des droites numériques, classifiez chaque série de fractions ci-dessous en ordre croissant.

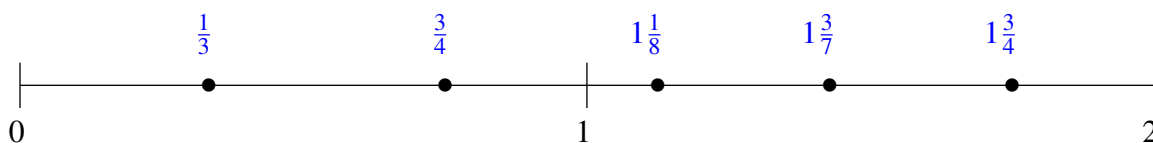
$$1\frac{1}{2}, \frac{3}{4}, 1\frac{4}{5}, 1\frac{1}{5}, \frac{2}{5}$$



$$1\frac{3}{10}, 1\frac{5}{6}, \frac{3}{4}, \frac{3}{7}, \frac{1}{9}$$



$$1\frac{3}{7}, 1\frac{1}{8}, \frac{1}{3}, 1\frac{3}{4}, \frac{3}{4}$$

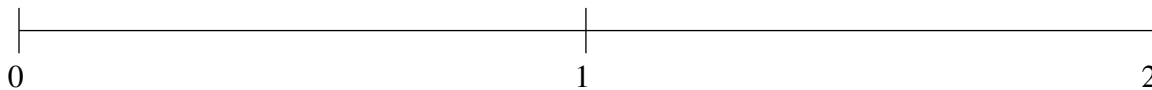




## Classification de Fractions (E)

À l'aide des droites numériques, classifiez chaque série de fractions ci-dessous en ordre croissant.

$$\frac{4}{5}, 1\frac{6}{7}, \frac{1}{2}, 1\frac{2}{7}, \frac{1}{5}$$



$$\frac{1}{8}, \frac{3}{7}, 1\frac{5}{6}, 1\frac{1}{5}, \frac{3}{4}$$



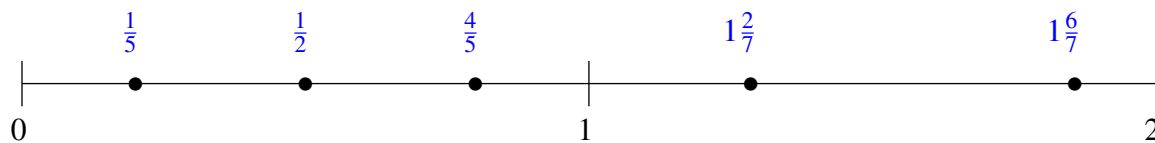
$$1\frac{1}{4}, \frac{1}{2}, 1\frac{4}{7}, 1\frac{8}{9}, \frac{7}{8}$$



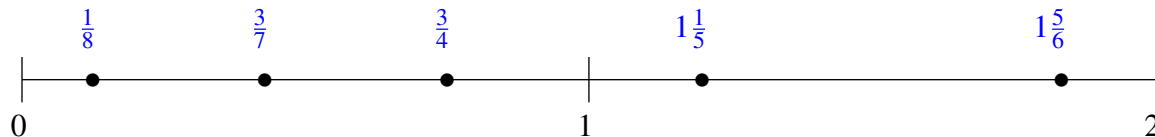
## Classification de Fractions (E) Solutions

À l'aide des droites numériques, classifiez chaque série de fractions ci-dessous en ordre croissant.

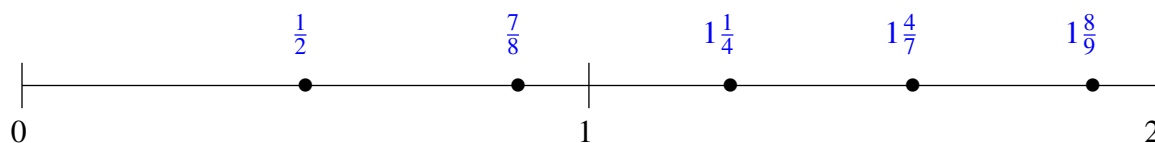
$$\frac{4}{5}, 1\frac{6}{7}, \frac{1}{2}, 1\frac{2}{7}, \frac{1}{5}$$



$$\frac{1}{8}, \frac{3}{7}, 1\frac{5}{6}, 1\frac{1}{5}, \frac{3}{4}$$



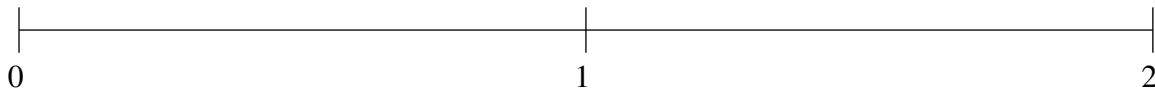
$$1\frac{1}{4}, \frac{1}{2}, 1\frac{4}{7}, 1\frac{8}{9}, \frac{7}{8}$$



## Classification de Fractions (F)

À l'aide des droites numériques, classifiez chaque série de fractions ci-dessous en ordre croissant.

$$1\frac{1}{3}, 1\frac{3}{4}, \frac{7}{8}, \frac{1}{2}, \frac{1}{5}$$



$$1\frac{1}{7}, 1\frac{6}{7}, \frac{1}{3}, \frac{5}{7}, 1\frac{1}{2}$$



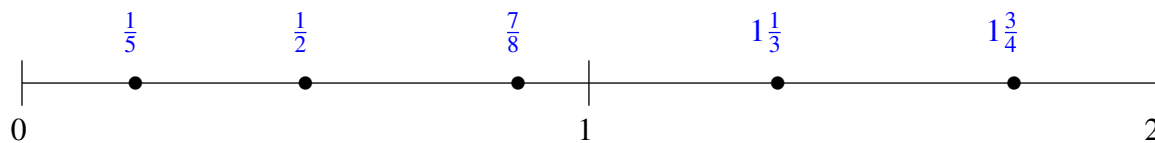
$$\frac{1}{5}, \frac{8}{9}, 1\frac{1}{4}, 1\frac{7}{9}, \frac{1}{2}$$



## Classification de Fractions (F) Solutions

À l'aide des droites numériques, classifiez chaque série de fractions ci-dessous en ordre croissant.

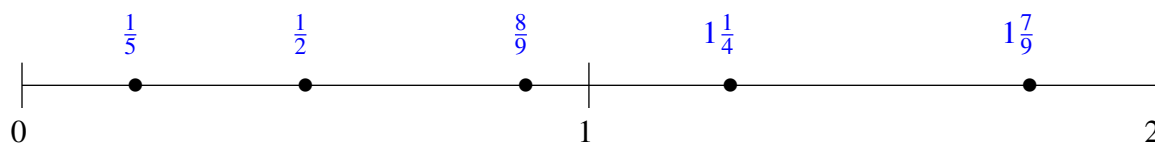
$$1\frac{1}{3}, 1\frac{3}{4}, \frac{7}{8}, \frac{1}{2}, \frac{1}{5}$$



$$1\frac{1}{7}, 1\frac{6}{7}, \frac{1}{3}, \frac{5}{7}, 1\frac{1}{2}$$



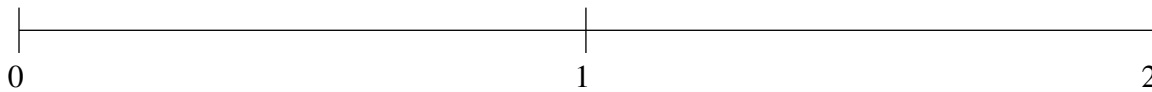
$$\frac{1}{5}, \frac{8}{9}, 1\frac{1}{4}, 1\frac{7}{9}, \frac{1}{2}$$



## Classification de Fractions (G)

À l'aide des droites numériques, classifiez chaque série de fractions ci-dessous en ordre croissant.

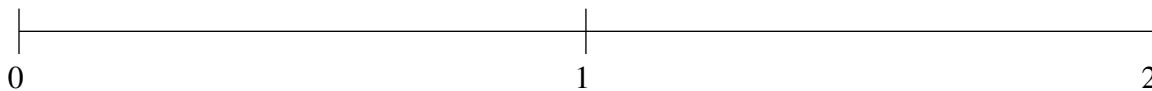
$$\frac{3}{4}, \frac{1}{10}, 1\frac{1}{4}, \frac{4}{9}, 1\frac{2}{3}$$



$$\frac{5}{6}, \frac{1}{3}, 1\frac{6}{7}, 1\frac{1}{2}, 1\frac{1}{5}$$



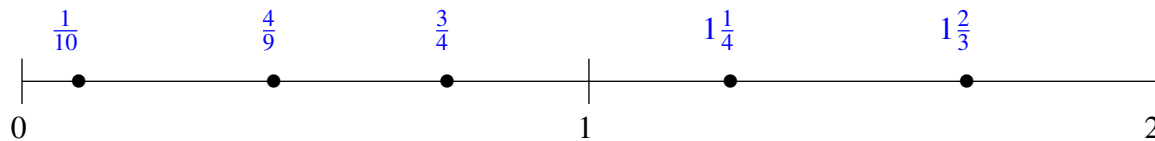
$$1\frac{7}{8}, \frac{1}{4}, 1\frac{4}{7}, \frac{4}{7}, 1\frac{1}{5}$$



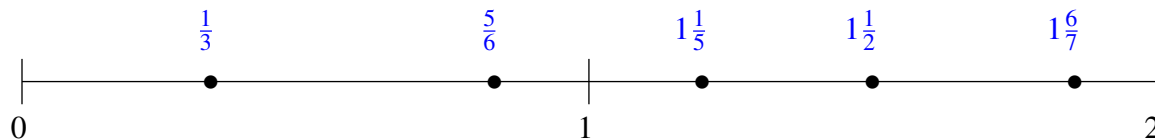
## Classification de Fractions (G) Solutions

À l'aide des droites numériques, classifiez chaque série de fractions ci-dessous en ordre croissant.

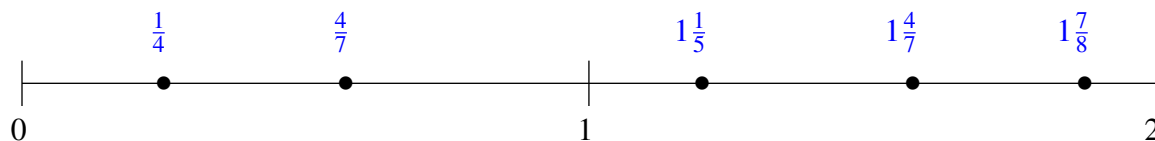
$$\frac{3}{4}, \frac{1}{10}, 1\frac{1}{4}, \frac{4}{9}, 1\frac{2}{3}$$



$$\frac{5}{6}, \frac{1}{3}, 1\frac{6}{7}, 1\frac{1}{2}, 1\frac{1}{5}$$



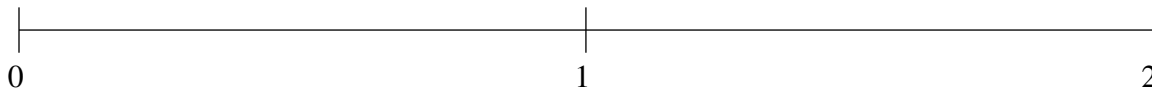
$$1\frac{7}{8}, \frac{1}{4}, 1\frac{4}{7}, \frac{4}{7}, 1\frac{1}{5}$$



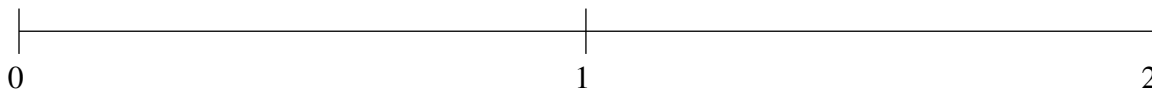
## Classification de Fractions (H)

À l'aide des droites numériques, classifiez chaque série de fractions ci-dessous en ordre croissant.

$$1\frac{1}{3}, \frac{1}{2}, \frac{1}{5}, \frac{7}{8}, 1\frac{2}{3}$$



$$1\frac{1}{2}, 1\frac{6}{7}, 1\frac{1}{6}, \frac{1}{8}, \frac{5}{7}$$



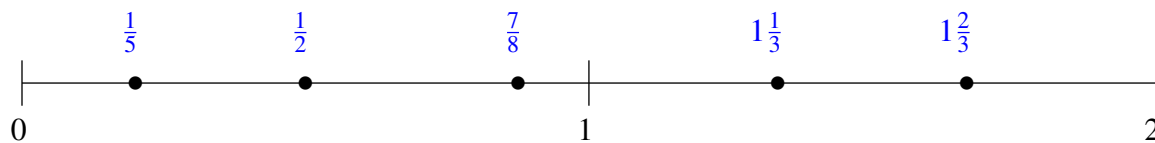
$$1\frac{3}{4}, \frac{1}{2}, 1\frac{1}{6}, \frac{5}{6}, \frac{1}{7}$$



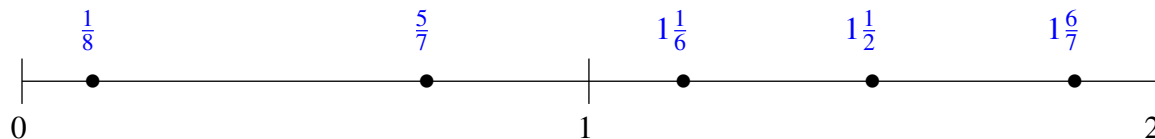
## Classification de Fractions (H) Solutions

À l'aide des droites numériques, classifiez chaque série de fractions ci-dessous en ordre croissant.

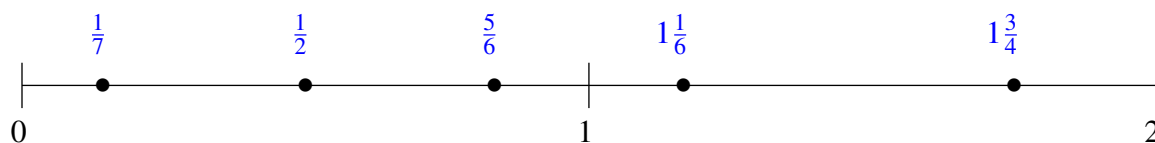
$$1\frac{1}{3}, \frac{1}{2}, \frac{1}{5}, \frac{7}{8}, 1\frac{2}{3}$$



$$1\frac{1}{2}, 1\frac{6}{7}, 1\frac{1}{6}, \frac{1}{8}, \frac{5}{7}$$



$$1\frac{3}{4}, \frac{1}{2}, 1\frac{1}{6}, \frac{5}{6}, \frac{1}{7}$$

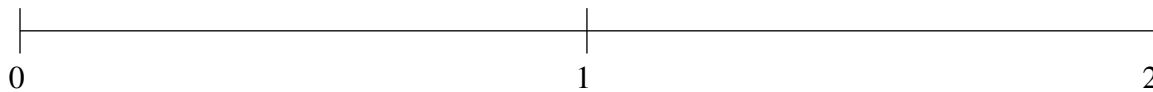




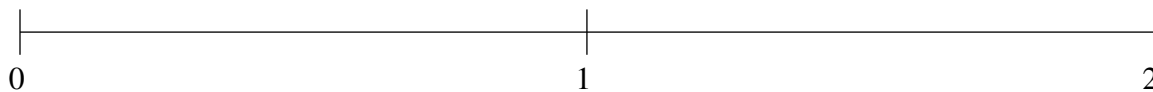
## Classification de Fractions (I)

À l'aide des droites numériques, classifiez chaque série de fractions ci-dessous en ordre croissant.

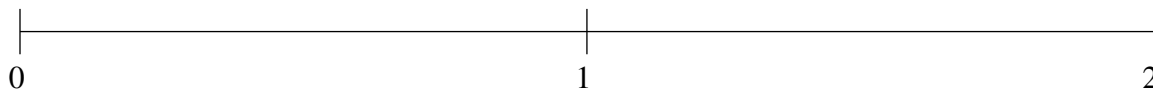
$$1\frac{3}{5}, \frac{6}{7}, 1\frac{1}{5}, \frac{1}{2}, \frac{1}{9}$$



$$1\frac{3}{5}, \frac{5}{6}, \frac{1}{8}, \frac{4}{9}, 1\frac{1}{4}$$



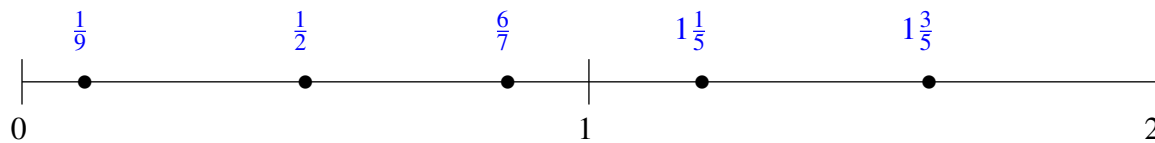
$$1\frac{1}{2}, \frac{1}{3}, 1\frac{1}{6}, \frac{2}{3}, 1\frac{4}{5}$$



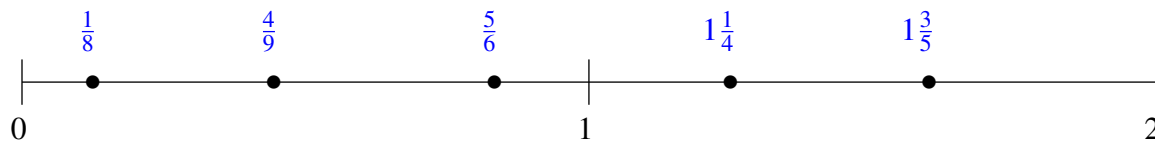
## Classification de Fractions (I) Solutions

À l'aide des droites numériques, classifiez chaque série de fractions ci-dessous en ordre croissant.

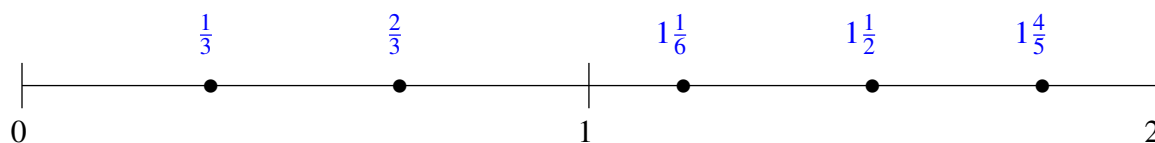
$$1\frac{3}{5}, \frac{6}{7}, 1\frac{1}{5}, \frac{1}{2}, \frac{1}{9}$$



$$1\frac{3}{5}, \frac{5}{6}, \frac{1}{8}, \frac{4}{9}, 1\frac{1}{4}$$



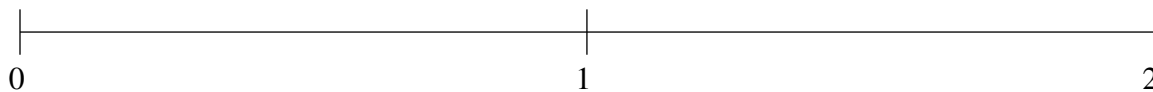
$$1\frac{1}{2}, \frac{1}{3}, 1\frac{1}{6}, \frac{2}{3}, 1\frac{4}{5}$$



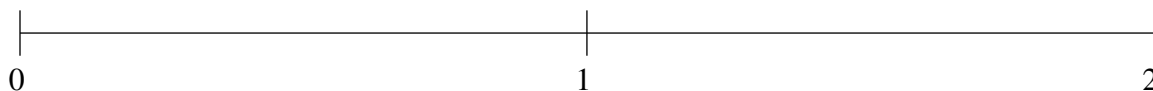
## Classification de Fractions (J)

À l'aide des droites numériques, classifiez chaque série de fractions ci-dessous en ordre croissant.

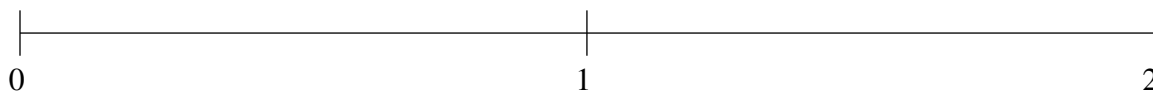
$$1\frac{1}{6}, 1\frac{1}{2}, 1\frac{9}{10}, \frac{1}{4}, \frac{4}{5}$$



$$\frac{1}{2}, \frac{4}{5}, \frac{1}{5}, 1\frac{4}{5}, 1\frac{1}{2}$$



$$\frac{1}{7}, 1\frac{2}{3}, \frac{7}{8}, \frac{1}{2}, 1\frac{1}{3}$$



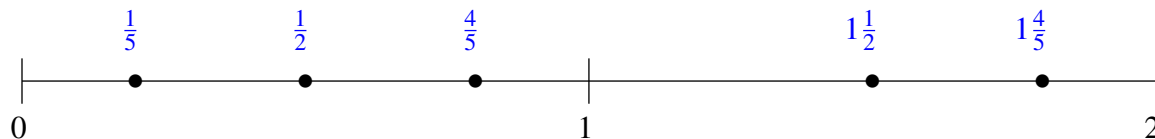
## Classification de Fractions (J) Solutions

À l'aide des droites numériques, classifiez chaque série de fractions ci-dessous en ordre croissant.

$$1\frac{1}{6}, 1\frac{1}{2}, 1\frac{9}{10}, \frac{1}{4}, \frac{4}{5}$$



$$\frac{1}{2}, \frac{4}{5}, \frac{1}{5}, 1\frac{4}{5}, 1\frac{1}{2}$$



$$\frac{1}{7}, 1\frac{2}{3}, \frac{7}{8}, \frac{1}{2}, 1\frac{1}{3}$$

