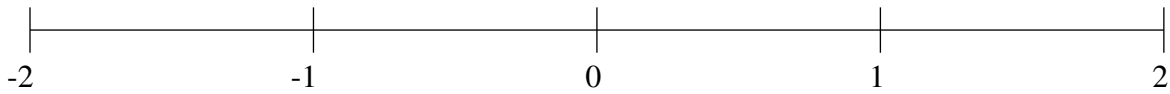


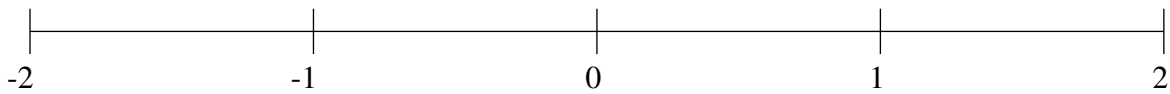
## Classification de Fractions (H)

À l'aide des droites numériques, classifiez chaque série de fractions ci-dessous en ordre croissant.

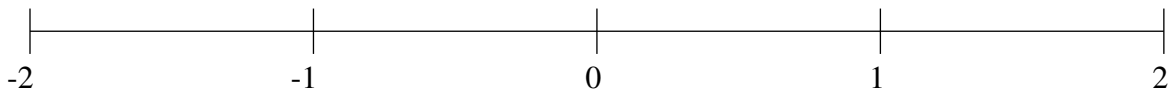
$$-\frac{1}{3}, -1\frac{1}{6}, \frac{1}{2}, \frac{1}{7}, 1\frac{3}{4}$$



$$1\frac{2}{3}, \frac{6}{7}, -1\frac{1}{2}, -1\frac{5}{6}, -1\frac{1}{6}$$



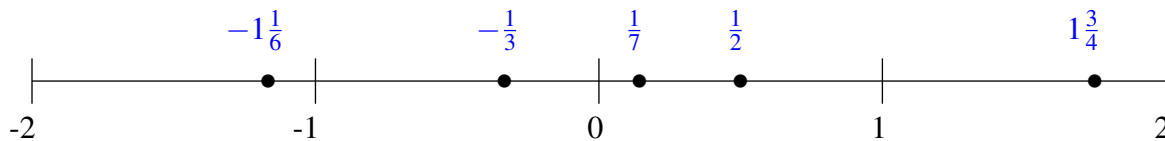
$$\frac{1}{4}, \frac{2}{3}, 1\frac{3}{5}, -\frac{1}{4}, -1\frac{3}{8}$$



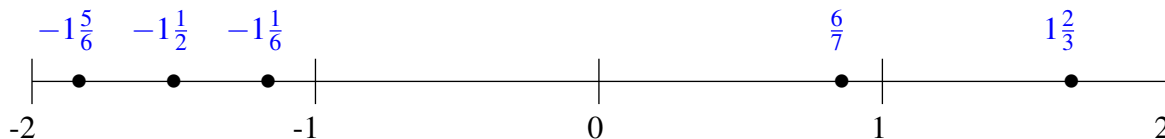
## Classification de Fractions (H) Solutions

À l'aide des droites numériques, classifiez chaque série de fractions ci-dessous en ordre croissant.

$$-\frac{1}{3}, -1\frac{1}{6}, \frac{1}{2}, \frac{1}{7}, 1\frac{3}{4}$$



$$1\frac{2}{3}, \frac{6}{7}, -1\frac{1}{2}, -1\frac{5}{6}, -1\frac{1}{6}$$



$$\frac{1}{4}, \frac{2}{3}, 1\frac{3}{5}, -\frac{1}{4}, -1\frac{3}{8}$$

