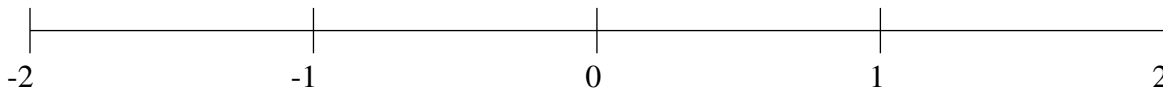


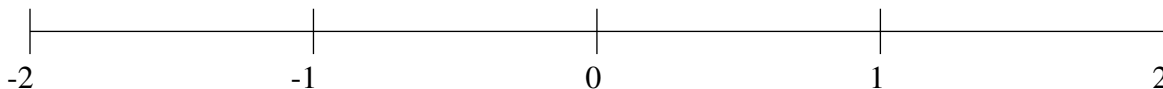
## Classification de Fractions (G)

À l'aide des droites numériques, classifiez chaque série de fractions ci-dessous en ordre croissant.

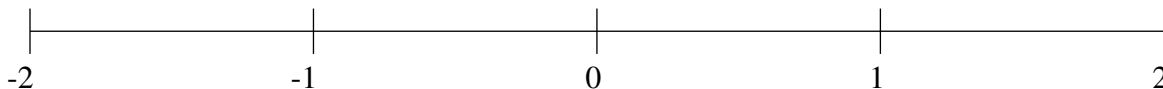
$$-\frac{5}{6}, 1\frac{2}{3}, \frac{4}{5}, -\frac{3}{7}, -1\frac{7}{10}$$



$$-\frac{4}{5}, -1\frac{1}{5}, \frac{1}{3}, -1\frac{4}{7}, 1\frac{3}{4}$$



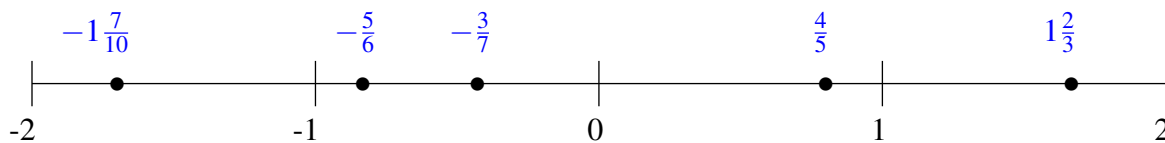
$$-\frac{1}{6}, 1\frac{3}{8}, -1\frac{2}{7}, 1\frac{3}{4}, \frac{1}{3}$$



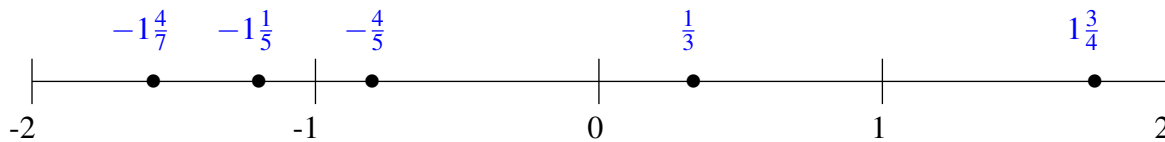
## Classification de Fractions (G) Solutions

À l'aide des droites numériques, classifiez chaque série de fractions ci-dessous en ordre croissant.

$$-\frac{5}{6}, 1\frac{2}{3}, \frac{4}{5}, -\frac{3}{7}, -1\frac{7}{10}$$



$$-\frac{4}{5}, -1\frac{1}{5}, \frac{1}{3}, -1\frac{4}{7}, 1\frac{3}{4}$$



$$-\frac{1}{6}, 1\frac{3}{8}, -1\frac{2}{7}, 1\frac{3}{4}, \frac{1}{3}$$

