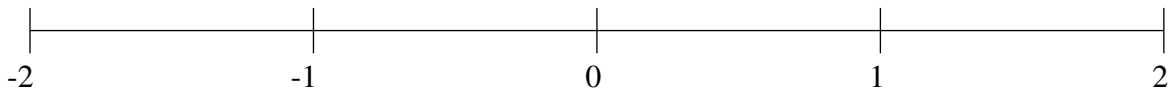


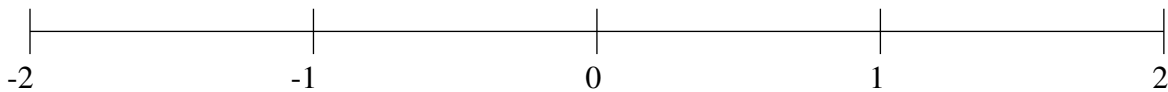
Classification de Fractions (B)

À l'aide des droites numériques, classifiez chaque série de fractions ci-dessous en ordre croissant.

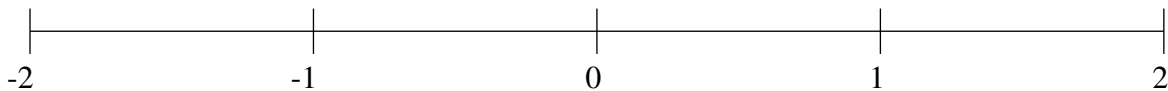
$$-1\frac{2}{5}, -1\frac{6}{7}, \frac{2}{3}, -\frac{4}{5}, -\frac{1}{2}$$



$$1\frac{1}{2}, -\frac{1}{8}, -\frac{4}{7}, \frac{1}{2}, -1\frac{4}{7}$$



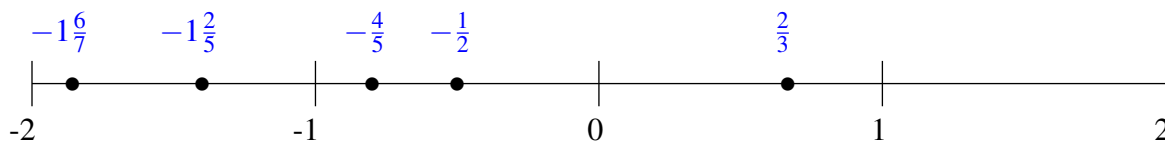
$$-1\frac{2}{3}, \frac{2}{3}, -\frac{1}{3}, -1\frac{1}{3}, \frac{1}{4}$$



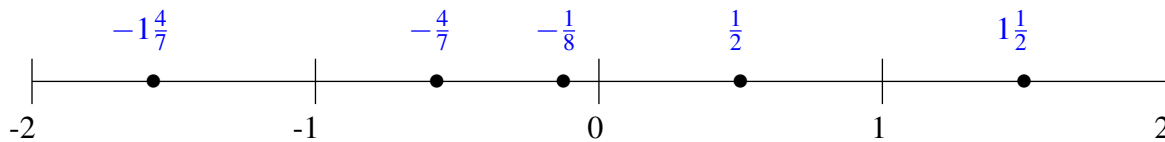
Classification de Fractions (B) Solutions

À l'aide des droites numériques, classifiez chaque série de fractions ci-dessous en ordre croissant.

$$-1\frac{2}{5}, -1\frac{6}{7}, \frac{2}{3}, -\frac{4}{5}, -\frac{1}{2}$$



$$1\frac{1}{2}, -\frac{1}{8}, -\frac{4}{7}, \frac{1}{2}, -1\frac{4}{7}$$



$$-1\frac{2}{3}, \frac{2}{3}, -\frac{1}{3}, -1\frac{1}{3}, \frac{1}{4}$$

