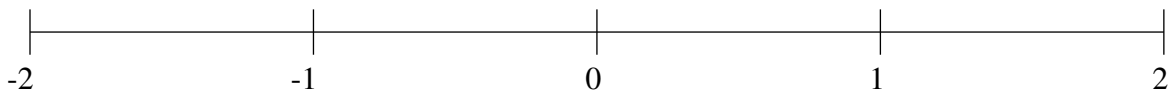


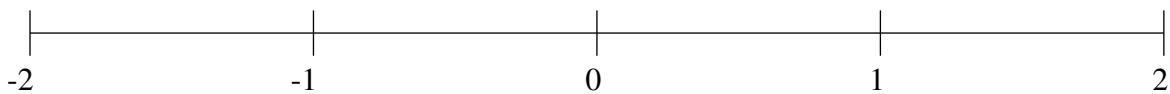
Classification de Fractions (B)

À l'aide des droites numériques, classifiez chaque série de fractions ci-dessous en ordre croissant.

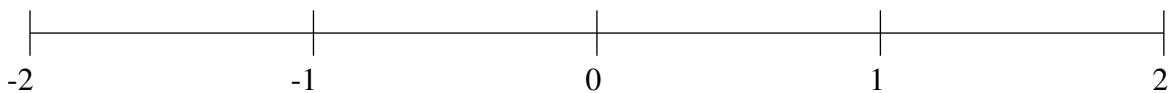
$$-\frac{4}{5}, -1\frac{4}{5}, 1\frac{1}{5}, -\frac{1}{5}, -1\frac{1}{2}$$



$$-1\frac{1}{2}, -\frac{1}{2}, 1\frac{2}{5}, \frac{3}{5}, \frac{9}{10}$$



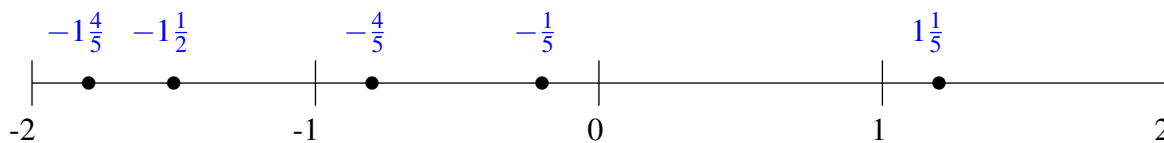
$$-\frac{3}{5}, \frac{1}{2}, 1\frac{1}{5}, 1\frac{3}{5}, \frac{1}{5}$$



Classification de Fractions (B) Solutions

À l'aide des droites numériques, classifiez chaque série de fractions ci-dessous en ordre croissant.

$$-\frac{4}{5}, -1\frac{4}{5}, 1\frac{1}{5}, -\frac{1}{5}, -1\frac{1}{2}$$



$$-1\frac{1}{2}, -\frac{1}{2}, 1\frac{2}{5}, \frac{3}{5}, \frac{9}{10}$$



$$-\frac{3}{5}, \frac{1}{2}, 1\frac{1}{5}, 1\frac{3}{5}, \frac{1}{5}$$

