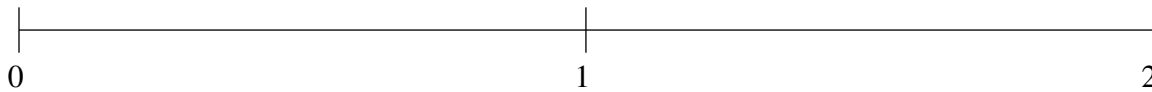


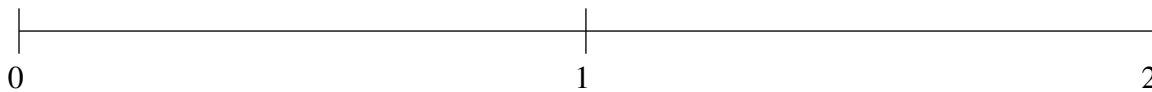
## Classification de Fractions (A)

À l'aide des droites numériques, classifiez chaque série de fractions ci-dessous en ordre croissant.

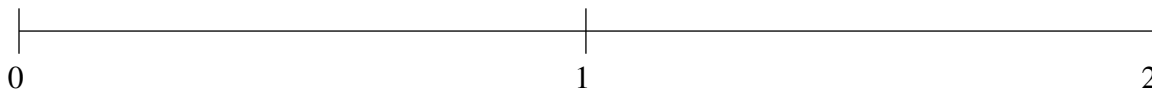
$$\frac{4}{5}, 1\frac{2}{5}, 1\frac{4}{5}, \frac{1}{5}, \frac{1}{2}$$



$$1\frac{1}{2}, \frac{1}{5}, \frac{1}{2}, \frac{4}{5}, 1\frac{4}{5}$$



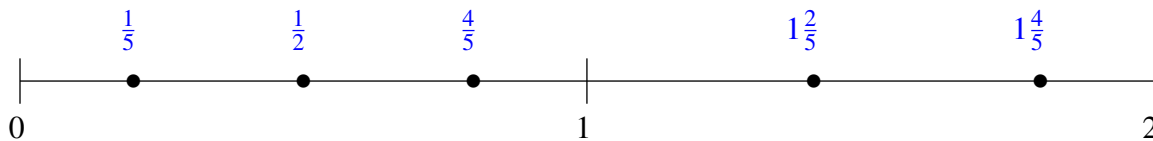
$$\frac{4}{5}, \frac{1}{2}, 1\frac{2}{5}, \frac{1}{5}, 1\frac{4}{5}$$



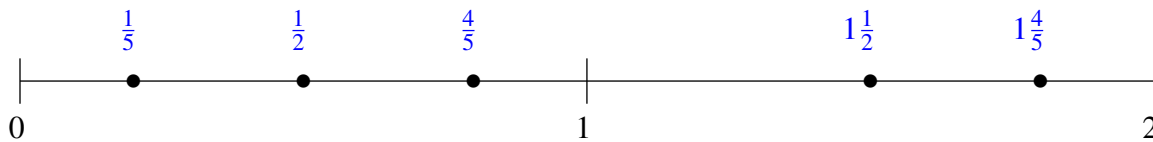
## Classification de Fractions (A) Solutions

À l'aide des droites numériques, classifiez chaque série de fractions ci-dessous en ordre croissant.

$$\frac{4}{5}, 1\frac{2}{5}, 1\frac{4}{5}, \frac{1}{5}, \frac{1}{2}$$



$$1\frac{1}{2}, \frac{1}{5}, \frac{1}{2}, \frac{4}{5}, 1\frac{4}{5}$$



$$\frac{4}{5}, \frac{1}{2}, 1\frac{2}{5}, \frac{1}{5}, 1\frac{4}{5}$$

