



# Modèles de Quarts (A)


Instructions: Inscrivez le bon numérateur.



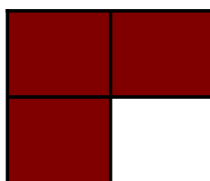
$$\frac{4}{4}$$



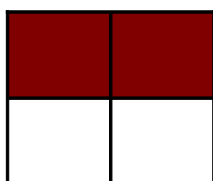
$$\frac{\quad}{4}$$



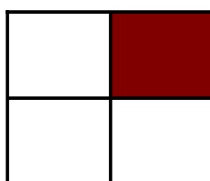
$$\frac{\quad}{4}$$



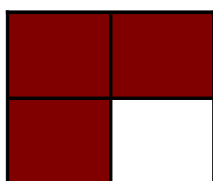
$$\frac{\quad}{4}$$




$$\frac{\quad}{4}$$



$$\frac{\quad}{4}$$




$$\frac{\quad}{4}$$



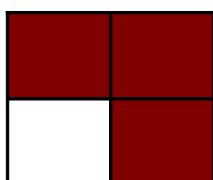
$$\frac{\quad}{4}$$



$$\frac{\quad}{4}$$



$$\frac{\quad}{4}$$




$$\frac{\quad}{4}$$



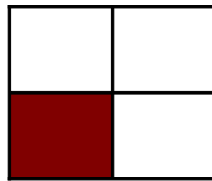
$$\frac{\quad}{4}$$

# Modèles de Quarts (A) Solutions


Instructions: Inscrivez le bon numérateur.



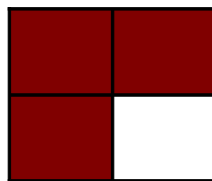
$$\frac{4}{4}$$



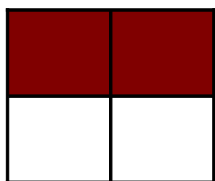
$$\frac{1}{4}$$



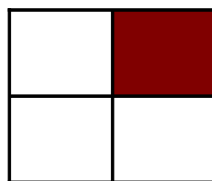
$$\frac{4}{4}$$




$$\frac{3}{4}$$




$$\frac{2}{4}$$




$$\frac{1}{4}$$




$$\frac{3}{4}$$



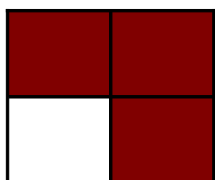
$$\frac{2}{4}$$




$$\frac{4}{4}$$



$$\frac{1}{4}$$




$$\frac{3}{4}$$




$$\frac{4}{4}$$

# Modèles de Quarts (B)


Instructions: Inscrivez le bon numérateur.



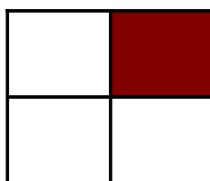
$$\frac{1}{4}$$



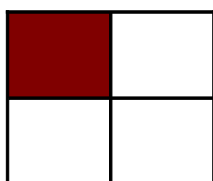
$$\frac{4}{4}$$



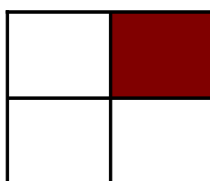
$$\frac{4}{4}$$



$$\frac{4}{4}$$




$$\frac{4}{4}$$




$$\frac{4}{4}$$




$$\frac{4}{4}$$



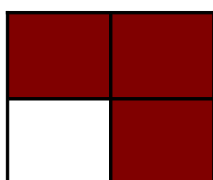
$$\frac{4}{4}$$



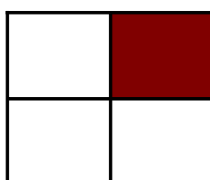
$$\frac{4}{4}$$



$$\frac{4}{4}$$



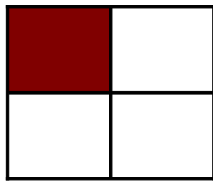
$$\frac{4}{4}$$



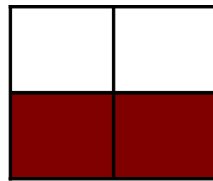
$$\frac{4}{4}$$

# Modèles de Quarts (B) Solutions


Instructions: Inscrivez le bon numérateur.



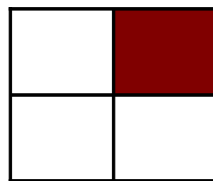
$$\frac{1}{4}$$



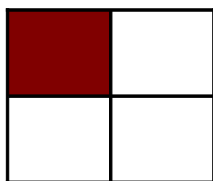
$$\frac{2}{4}$$



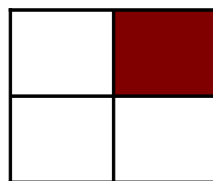
$$\frac{4}{4}$$



$$\frac{1}{4}$$




$$\frac{1}{4}$$




$$\frac{1}{4}$$




$$\frac{4}{4}$$



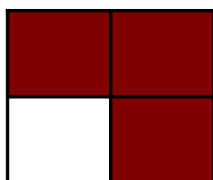
$$\frac{2}{4}$$




$$\frac{2}{4}$$



$$\frac{2}{4}$$



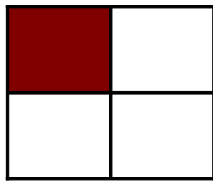
$$\frac{3}{4}$$



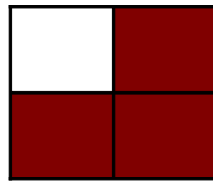
$$\frac{1}{4}$$

# Modèles de Quarts (C)

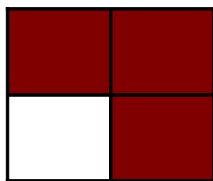
Instructions: Inscrivez le bon numérateur.



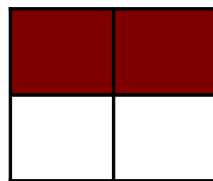
$$\frac{1}{4}$$



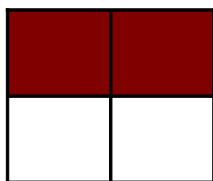
$$\frac{4}{4}$$



$$\frac{4}{4}$$



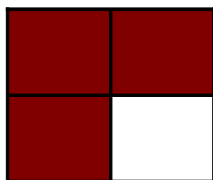
$$\frac{4}{4}$$



$$\frac{4}{4}$$




$$\frac{4}{4}$$



$$\frac{4}{4}$$



$$\frac{4}{4}$$




$$\frac{4}{4}$$



$$\frac{4}{4}$$



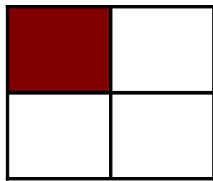
$$\frac{4}{4}$$



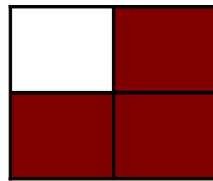
$$\frac{4}{4}$$

# Modèles de Quarts (C) Solutions

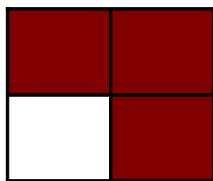
Instructions: Inscrivez le bon numérateur.



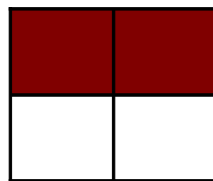
$$\frac{1}{4}$$



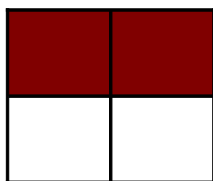
$$\frac{3}{4}$$



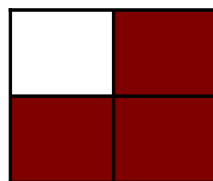
$$\frac{3}{4}$$



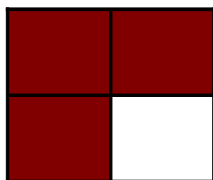
$$\frac{2}{4}$$



$$\frac{2}{4}$$




$$\frac{3}{4}$$



$$\frac{3}{4}$$



$$\frac{3}{4}$$




$$\frac{2}{4}$$



$$\frac{3}{4}$$



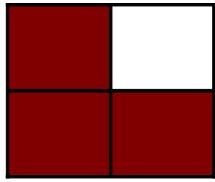
$$\frac{2}{4}$$



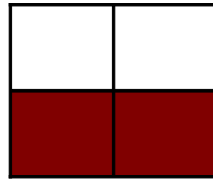
$$\frac{2}{4}$$

# Modèles de Quarts (D)


Instructions: Inscrivez le bon numérateur.



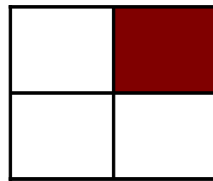
$$\frac{3}{4}$$



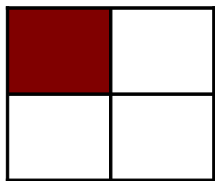
$$\frac{\quad}{4}$$



$$\frac{\quad}{4}$$




$$\frac{\quad}{4}$$




$$\frac{\quad}{4}$$



$$\frac{\quad}{4}$$




$$\frac{\quad}{4}$$



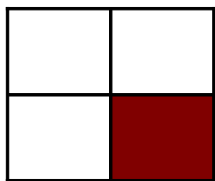
$$\frac{\quad}{4}$$



$$\frac{\quad}{4}$$



$$\frac{\quad}{4}$$



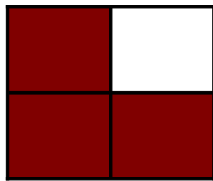
$$\frac{\quad}{4}$$



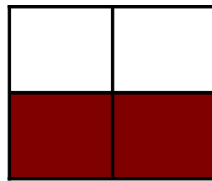
$$\frac{\quad}{4}$$

# Modèles de Quarts (D) Solutions

Instructions: Inscrivez le bon numérateur.



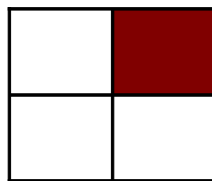
$$\frac{3}{4}$$



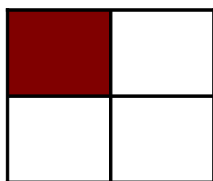
$$\frac{2}{4}$$



$$\frac{4}{4}$$



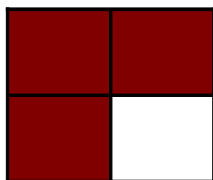
$$\frac{1}{4}$$



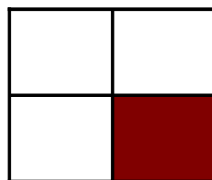
$$\frac{1}{4}$$



$$\frac{3}{4}$$



$$\frac{3}{4}$$



$$\frac{1}{4}$$




$$\frac{4}{4}$$



$$\frac{4}{4}$$



$$\frac{1}{4}$$




$$\frac{4}{4}$$

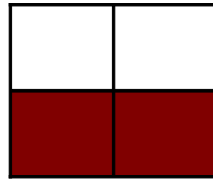


# Modèles de Quarts (E)

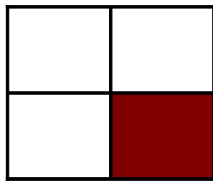
Instructions: Inscrivez le bon numérateur.



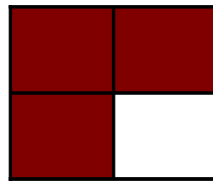
$$\frac{2}{4}$$




$$\frac{4}{4}$$




$$\frac{4}{4}$$



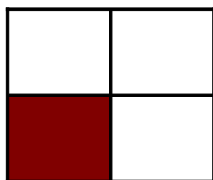
$$\frac{4}{4}$$




$$\frac{4}{4}$$



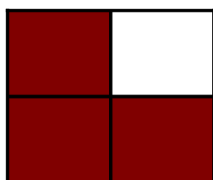
$$\frac{4}{4}$$




$$\frac{4}{4}$$



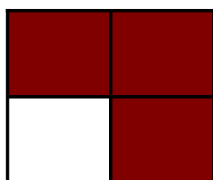
$$\frac{4}{4}$$




$$\frac{4}{4}$$



$$\frac{4}{4}$$



$$\frac{4}{4}$$



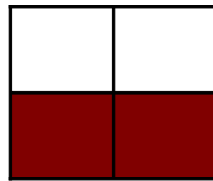
$$\frac{4}{4}$$

# Modèles de Quarts (E) Solutions

Instructions: Inscrivez le bon numérateur.



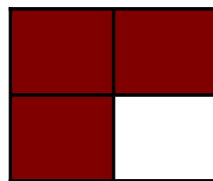
$$\frac{2}{4}$$




$$\frac{2}{4}$$




$$\frac{1}{4}$$



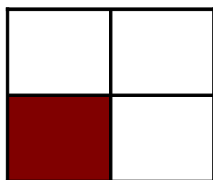
$$\frac{3}{4}$$



$$\frac{3}{4}$$



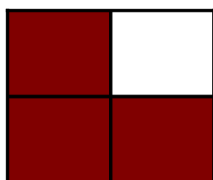
$$\frac{2}{4}$$



$$\frac{1}{4}$$



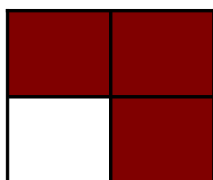
$$\frac{3}{4}$$




$$\frac{3}{4}$$



$$\frac{2}{4}$$



$$\frac{3}{4}$$



$$\frac{2}{4}$$