

Modèles de Quarts (A)

Instructions: Représentez chaque fraction en colorant les sections appropriées du carré correspondant. Essayez de représenter les mêmes fractions de différentes façons.



$$\frac{3}{4}$$



$$\frac{3}{4}$$




$$\frac{3}{4}$$



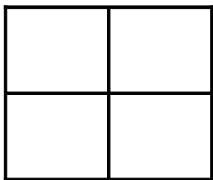
$$\frac{2}{4}$$



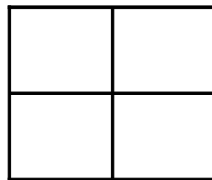
$$\frac{2}{4}$$



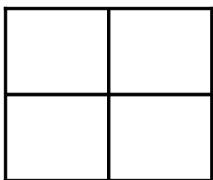
$$\frac{1}{4}$$



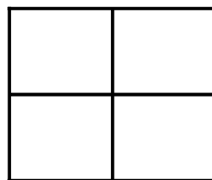
$$\frac{1}{4}$$



$$\frac{3}{4}$$




$$\frac{2}{4}$$



$$\frac{1}{4}$$



$$\frac{3}{4}$$



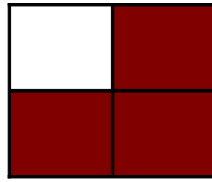
$$\frac{3}{4}$$

Modèles de Quarts (A) Solutions


Instructions: Représentez chaque fraction en colorant les sections appropriées du carré correspondant. Essayez de représenter les mêmes fractions de différentes façons.



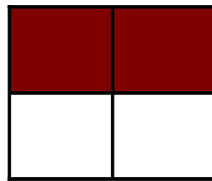
$$\frac{3}{4}$$



$$\frac{3}{4}$$



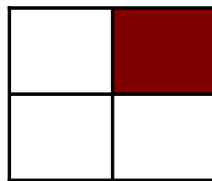
$$\frac{3}{4}$$




$$\frac{2}{4}$$



$$\frac{2}{4}$$




$$\frac{1}{4}$$




$$\frac{1}{4}$$




$$\frac{3}{4}$$



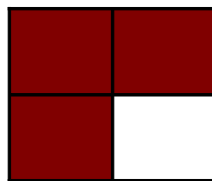
$$\frac{2}{4}$$



$$\frac{1}{4}$$



$$\frac{3}{4}$$



$$\frac{3}{4}$$

Modèles de Quarts (B)

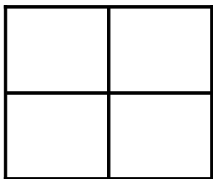
Instructions: Représentez chaque fraction en colorant les sections appropriées du carré correspondant. Essayez de représenter les mêmes fractions de différentes façons.



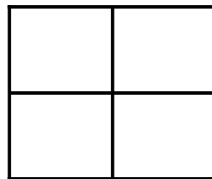
$$\frac{3}{4}$$



$$\frac{3}{4}$$




$$\frac{3}{4}$$



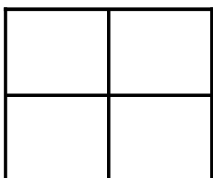
$$\frac{3}{4}$$



$$\frac{3}{4}$$



$$\frac{2}{4}$$




$$\frac{2}{4}$$



$$\frac{3}{4}$$




$$\frac{1}{4}$$



$$\frac{3}{4}$$



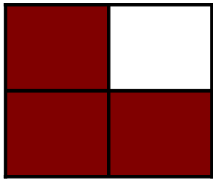
$$\frac{3}{4}$$



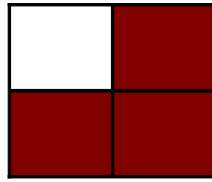
$$\frac{3}{4}$$

Modèles de Quarts (B) Solutions


Instructions: Représentez chaque fraction en colorant les sections appropriées du carré correspondant. Essayez de représenter les mêmes fractions de différentes façons.



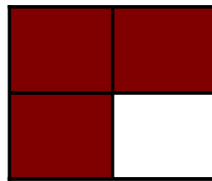
$$\frac{3}{4}$$




$$\frac{3}{4}$$




$$\frac{3}{4}$$




$$\frac{3}{4}$$



$$\frac{3}{4}$$




$$\frac{2}{4}$$



$$\frac{2}{4}$$




$$\frac{3}{4}$$



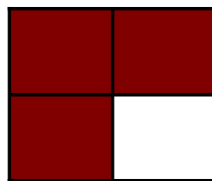
$$\frac{1}{4}$$



$$\frac{3}{4}$$



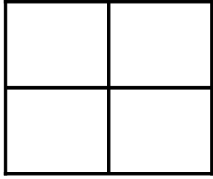
$$\frac{3}{4}$$



$$\frac{3}{4}$$

Modèles de Quarts (C)

Instructions: Représentez chaque fraction en colorant les sections appropriées du carré correspondant. Essayez de représenter les mêmes fractions de différentes façons.



$$\frac{2}{4}$$



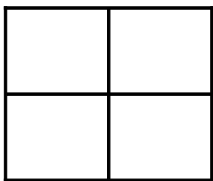
$$\frac{3}{4}$$




$$\frac{3}{4}$$



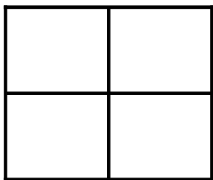
$$\frac{2}{4}$$



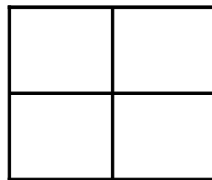
$$\frac{3}{4}$$



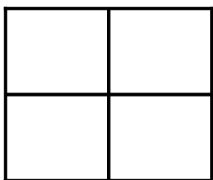
$$\frac{2}{4}$$



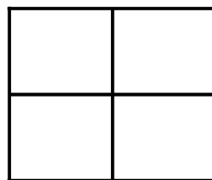
$$\frac{1}{4}$$



$$\frac{1}{4}$$




$$\frac{3}{4}$$



$$\frac{1}{4}$$




$$\frac{3}{4}$$



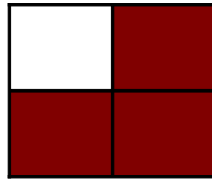
$$\frac{3}{4}$$

Modèles de Quarts (C) Solutions


Instructions: Représentez chaque fraction en colorant les sections appropriées du carré correspondant. Essayez de représenter les mêmes fractions de différentes façons.



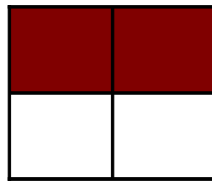
$$\frac{2}{4}$$




$$\frac{3}{4}$$




$$\frac{3}{4}$$




$$\frac{2}{4}$$



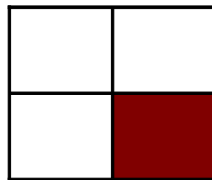
$$\frac{3}{4}$$




$$\frac{2}{4}$$




$$\frac{1}{4}$$




$$\frac{1}{4}$$



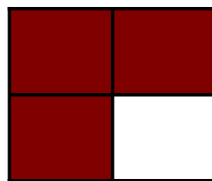
$$\frac{3}{4}$$



$$\frac{1}{4}$$



$$\frac{3}{4}$$



$$\frac{3}{4}$$

Modèles de Quarts (D)

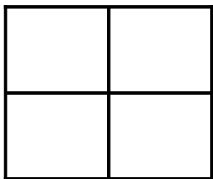
Instructions: Représentez chaque fraction en colorant les sections appropriées du carré correspondant. Essayez de représenter les mêmes fractions de différentes façons.



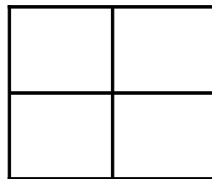
$$\frac{1}{4}$$



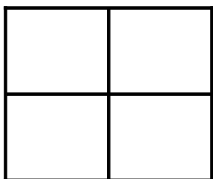
$$\frac{2}{4}$$



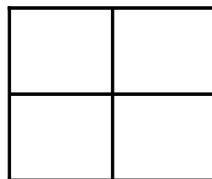
$$\frac{2}{4}$$



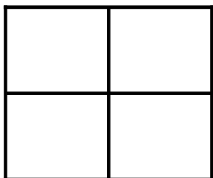
$$\frac{3}{4}$$



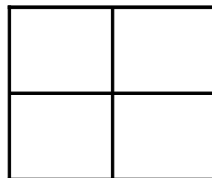
$$\frac{1}{4}$$



$$\frac{1}{4}$$




$$\frac{1}{4}$$



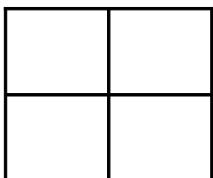
$$\frac{1}{4}$$




$$\frac{2}{4}$$



$$\frac{1}{4}$$



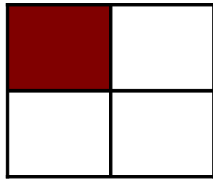
$$\frac{4}{4}$$



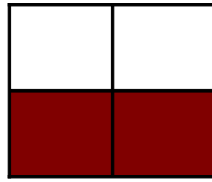
$$\frac{2}{4}$$

Modèles de Quarts (D) Solutions


Instructions: Représentez chaque fraction en colorant les sections appropriées du carré correspondant. Essayez de représenter les mêmes fractions de différentes façons.



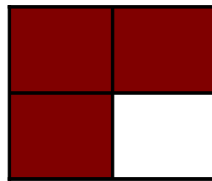
$$\frac{1}{4}$$



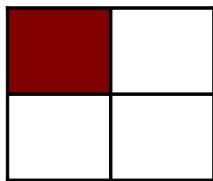
$$\frac{2}{4}$$



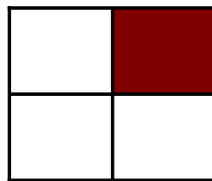
$$\frac{2}{4}$$




$$\frac{3}{4}$$



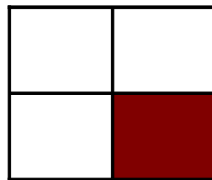
$$\frac{1}{4}$$




$$\frac{1}{4}$$




$$\frac{1}{4}$$




$$\frac{1}{4}$$



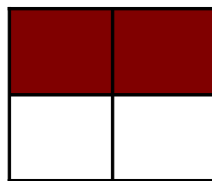
$$\frac{2}{4}$$



$$\frac{1}{4}$$



$$\frac{4}{4}$$



$$\frac{2}{4}$$

Modèles de Quarts (E)

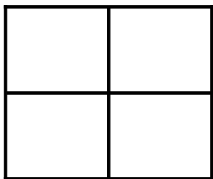
Instructions: Représentez chaque fraction en colorant les sections appropriées du carré correspondant. Essayez de représenter les mêmes fractions de différentes façons.



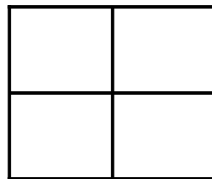
$$\frac{3}{4}$$



$$\frac{1}{4}$$




$$\frac{1}{4}$$



$$\frac{1}{4}$$




$$\frac{1}{4}$$



$$\frac{3}{4}$$




$$\frac{3}{4}$$



$$\frac{1}{4}$$




$$\frac{3}{4}$$



$$\frac{2}{4}$$



$$\frac{4}{4}$$



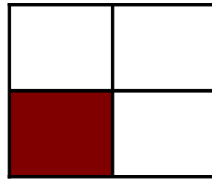
$$\frac{2}{4}$$

Modèles de Quarts (E) Solutions

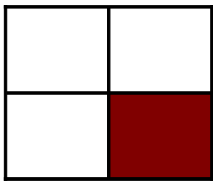
Instructions: Représentez chaque fraction en colorant les sections appropriées du carré correspondant. Essayez de représenter les mêmes fractions de différentes façons.



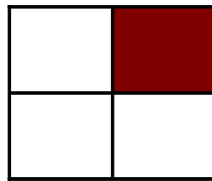
$$\frac{3}{4}$$



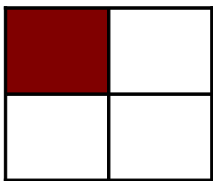
$$\frac{1}{4}$$



$$\frac{1}{4}$$




$$\frac{1}{4}$$



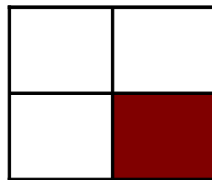
$$\frac{1}{4}$$



$$\frac{3}{4}$$



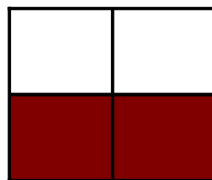
$$\frac{3}{4}$$




$$\frac{1}{4}$$



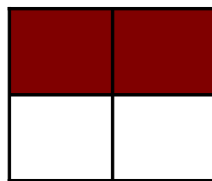
$$\frac{3}{4}$$



$$\frac{2}{4}$$



$$\frac{4}{4}$$



$$\frac{2}{4}$$