

Modèles de Quarts (D)

Instructions: Représentez chaque fraction en colorant les sections appropriées du carré correspondant. Essayez de représenter les mêmes fractions de différentes façons.



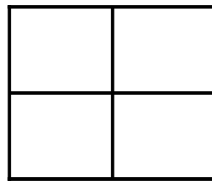
$$\frac{1}{4}$$



$$\frac{2}{4}$$




$$\frac{2}{4}$$



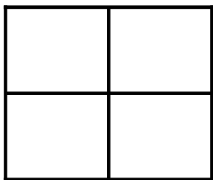
$$\frac{3}{4}$$



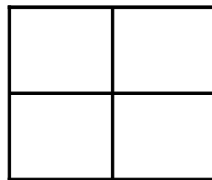
$$\frac{1}{4}$$



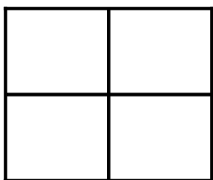
$$\frac{1}{4}$$



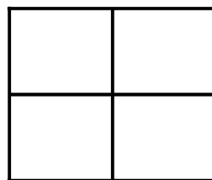
$$\frac{1}{4}$$



$$\frac{1}{4}$$



$$\frac{2}{4}$$



$$\frac{1}{4}$$



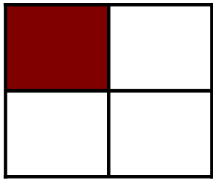
$$\frac{4}{4}$$



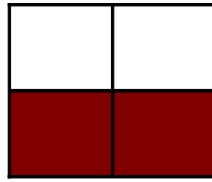
$$\frac{2}{4}$$

Modèles de Quarts (D) Solutions

Instructions: Représentez chaque fraction en colorant les sections appropriées du carré correspondant. Essayez de représenter les mêmes fractions de différentes façons.



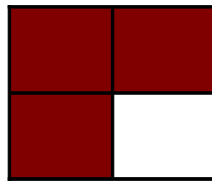
$$\frac{1}{4}$$



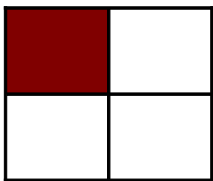
$$\frac{2}{4}$$



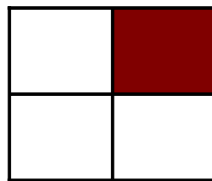
$$\frac{2}{4}$$



$$\frac{3}{4}$$



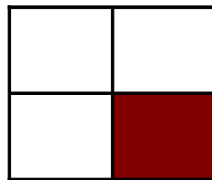
$$\frac{1}{4}$$




$$\frac{1}{4}$$




$$\frac{1}{4}$$




$$\frac{1}{4}$$



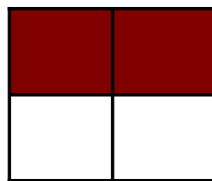
$$\frac{2}{4}$$



$$\frac{1}{4}$$



$$\frac{4}{4}$$



$$\frac{2}{4}$$