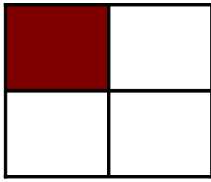
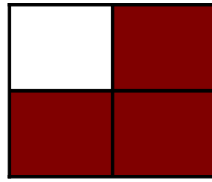


Modèles de Quarts (C)

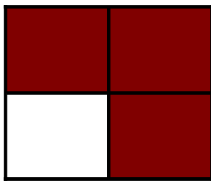
Instructions: Inscrivez le bon numérateur.



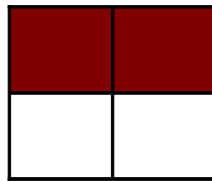
$$\frac{1}{4}$$



$$\frac{\quad}{4}$$



$$\frac{\quad}{4}$$




$$\frac{\quad}{4}$$



$$\frac{\quad}{4}$$




$$\frac{\quad}{4}$$



$$\frac{\quad}{4}$$



$$\frac{\quad}{4}$$



$$\frac{\quad}{4}$$



$$\frac{\quad}{4}$$



$$\frac{\quad}{4}$$



$$\frac{\quad}{4}$$