



Modèles de Quarts (B)


Instructions: Inscrivez le bon numérateur.



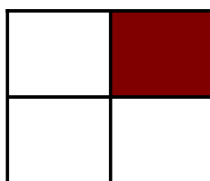
$$\frac{1}{4}$$



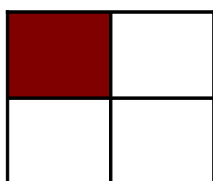
$$\frac{4}{4}$$



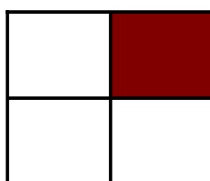
$$\frac{4}{4}$$



$$\frac{4}{4}$$




$$\frac{4}{4}$$




$$\frac{4}{4}$$




$$\frac{4}{4}$$



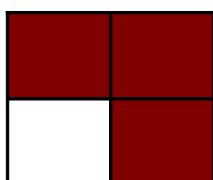
$$\frac{4}{4}$$



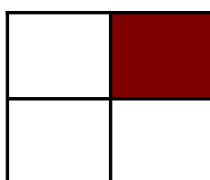
$$\frac{4}{4}$$



$$\frac{4}{4}$$



$$\frac{4}{4}$$



$$\frac{4}{4}$$