



Modèles de Quarts (A)


Instructions: Inscrivez le bon numérateur.



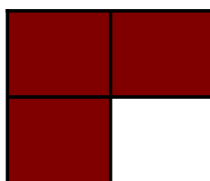
$$\frac{4}{4}$$



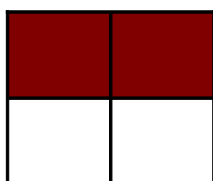
$$\frac{\quad}{4}$$



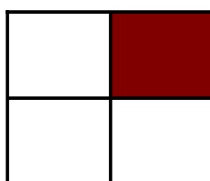
$$\frac{\quad}{4}$$



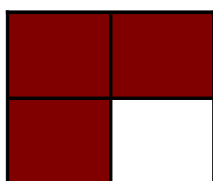
$$\frac{\quad}{4}$$




$$\frac{\quad}{4}$$



$$\frac{\quad}{4}$$




$$\frac{\quad}{4}$$



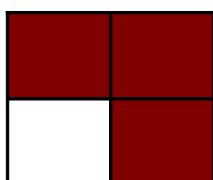
$$\frac{\quad}{4}$$



$$\frac{\quad}{4}$$



$$\frac{\quad}{4}$$



$$\frac{\quad}{4}$$



$$\frac{\quad}{4}$$