
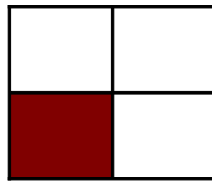


Modèles de Quarts (A)

Instructions: Inscrivez le bon numérateur.



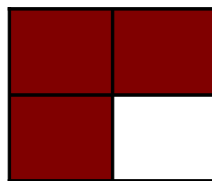
$$\frac{4}{4}$$



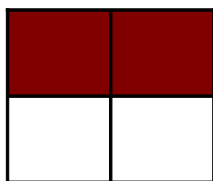
$$\frac{\quad}{4}$$



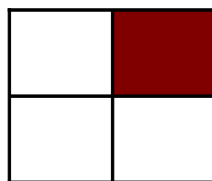
$$\frac{\quad}{4}$$



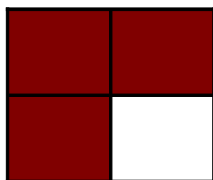
$$\frac{\quad}{4}$$




$$\frac{\quad}{4}$$



$$\frac{\quad}{4}$$




$$\frac{\quad}{4}$$



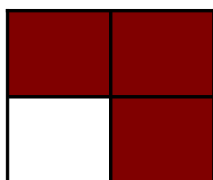
$$\frac{\quad}{4}$$




$$\frac{\quad}{4}$$



$$\frac{\quad}{4}$$




$$\frac{\quad}{4}$$



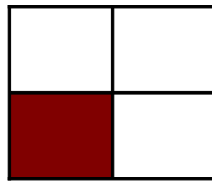
$$\frac{\quad}{4}$$

Modèles de Quarts (A) Solutions

Instructions: Inscrivez le bon numérateur.



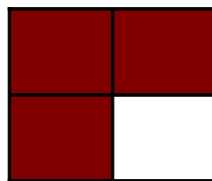
$$\frac{4}{4}$$



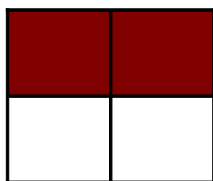
$$\frac{1}{4}$$



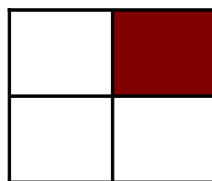
$$\frac{4}{4}$$



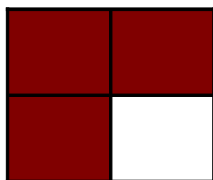
$$\frac{3}{4}$$




$$\frac{2}{4}$$



$$\frac{1}{4}$$




$$\frac{3}{4}$$



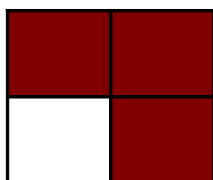
$$\frac{2}{4}$$




$$\frac{4}{4}$$



$$\frac{1}{4}$$



$$\frac{3}{4}$$



$$\frac{4}{4}$$