


Modèles de Demis (A)




Ce modèle est divisé en deux parts égales. L'une des parts est ombragée.

$\frac{1}{2}$ part ombragée
2 parts

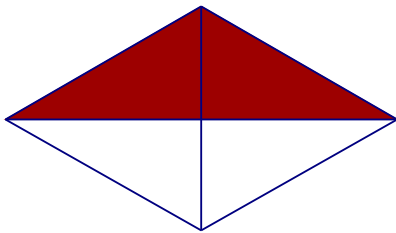
Pour chaque modèle, inscrivez la fraction qui le décrit.




—




—




—



—




—



—


Modèles de Demis (A) Solutions




Ce modèle est
divisé en deux
parts égales.
L'une des parts
est ombragée.

$\frac{1}{2}$ part ombragée
2 parts

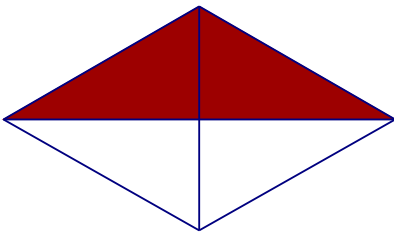
Pour chaque modèle, inscrivez la fraction qui le décrit.




$\frac{1}{2}$




$\frac{0}{2}$




$\frac{1}{2}$



$\frac{1}{2}$



$\frac{2}{2}$



$\frac{1}{2}$