


# Modèles de Cinquièmes (D)


Instructions: Représentez chaque fraction en colorant les sections appropriées du modèle correspondant. Essayez de représenter les mêmes fractions de divers façons.



$$\frac{2}{5}$$



$$\frac{4}{5}$$




$$\frac{4}{5}$$



$$\frac{1}{5}$$




$$\frac{4}{5}$$




$$\frac{2}{5}$$



$$\frac{2}{5}$$



$$\frac{2}{5}$$



$$\frac{5}{5}$$