


Modèles de Cinquièmes (B)


Instructions: Représentez chaque fraction en colorant les sections appropriées du modèle correspondant. Essayez de représenter les mêmes fractions de divers façons.




$$\frac{1}{5}$$



$$\frac{4}{5}$$




$$\frac{4}{5}$$




$$\frac{4}{5}$$



$$\frac{3}{5}$$




$$\frac{4}{5}$$



$$\frac{3}{5}$$



$$\frac{3}{5}$$



$$\frac{3}{5}$$