



Modèles de Cinquièmes (A)


Instructions: Représentez chaque fraction en colorant les sections appropriées du modèle correspondant. Essayez de représenter les mêmes fractions de divers façons.




$$\frac{3}{5}$$



$$\frac{1}{5}$$




$$\frac{3}{5}$$



$$\frac{2}{5}$$




$$\frac{1}{5}$$




$$\frac{1}{5}$$



$$\frac{3}{5}$$



$$\frac{2}{5}$$




$$\frac{2}{5}$$

Modèles de Cinquièmes (A) Solutions

Instructions: Représentez chaque fraction en colorant les sections appropriées du modèle correspondant. Essayez de représenter les mêmes fractions de divers façons.



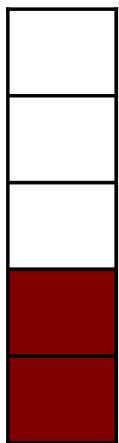
$$\frac{3}{5}$$



$$\frac{1}{5}$$




$$\frac{3}{5}$$




$$\frac{2}{5}$$



$$\frac{1}{5}$$




$$\frac{1}{5}$$



$$\frac{4}{5}$$



$$\frac{2}{5}$$



$$\frac{2}{5}$$