


Coloriage des Fractions (E)

Colorez chaque groupe de figures pour représenter chaque fraction.


1.

$$\frac{1}{4}$$




2.

$$\frac{1}{3}$$




3.

$$\frac{3}{4}$$




4.

$$\frac{3}{4}$$



5.

$$\frac{2}{3}$$



6.

$$\frac{1}{2}$$

