

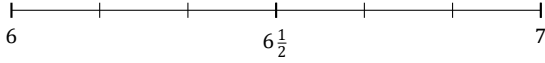
# L'Arrondi de Nombres Mixtes (A)

Nom: \_\_\_\_\_

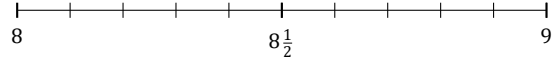
Date: \_\_\_\_\_

Arrondissez chaque nombre mixte à la plus proche moitié. Arrondissez à l'entier supérieur en cas d'égalité.

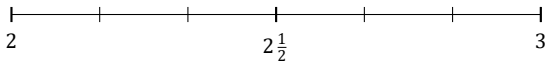
1.  $6\frac{4}{6} \approx$



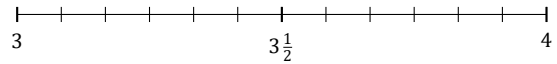
2.  $8\frac{6}{10} \approx$



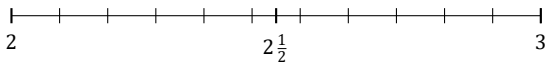
3.  $2\frac{3}{6} \approx$



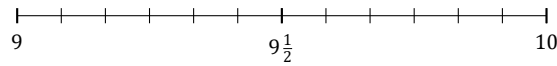
4.  $3\frac{11}{12} \approx$



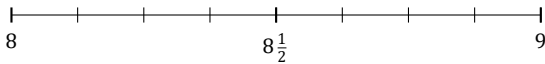
5.  $2\frac{10}{11} \approx$



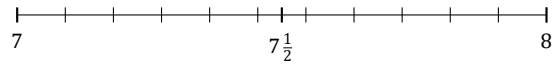
6.  $9\frac{7}{12} \approx$



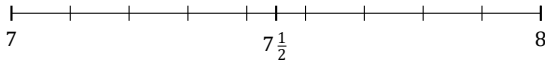
7.  $8\frac{3}{8} \approx$



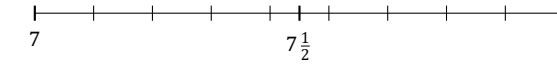
8.  $7\frac{9}{11} \approx$



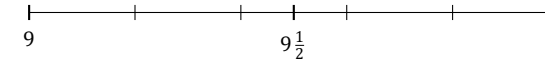
9.  $7\frac{8}{9} \approx$



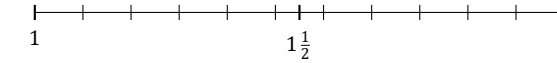
10.  $7\frac{7}{9} \approx$



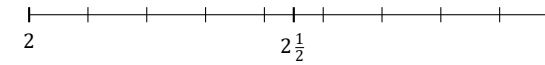
11.  $9\frac{3}{5} \approx$



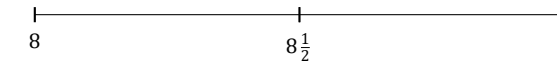
12.  $1\frac{6}{11} \approx$



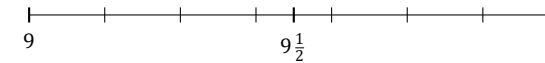
13.  $2\frac{2}{9} \approx$



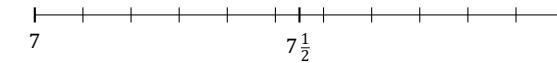
14.  $8\frac{1}{2} \approx$



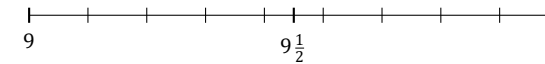
15.  $9\frac{1}{7} \approx$



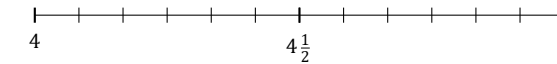
16.  $7\frac{2}{11} \approx$



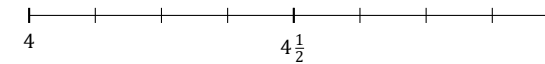
17.  $9\frac{3}{9} \approx$



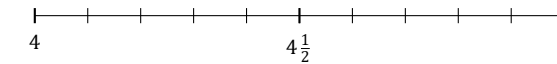
18.  $4\frac{8}{12} \approx$



19.  $4\frac{7}{8} \approx$



20.  $4\frac{5}{10} \approx$



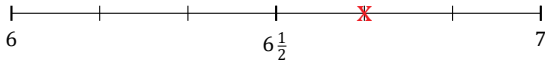
# L'Arrondi de Nombres Mixtes (A) Réponses

Nom: \_\_\_\_\_

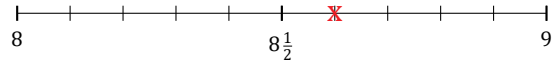
Date: \_\_\_\_\_

Arrondissez chaque nombre mixte à la plus proche moitié. Arrondissez à l'entier supérieur en cas d'égalité.

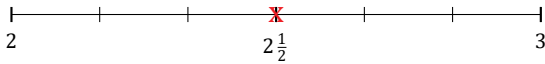
1.  $6\frac{4}{6} \simeq 6\frac{1}{2}$



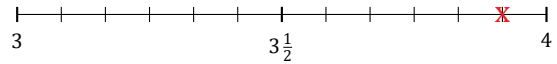
2.  $8\frac{6}{10} \simeq 8\frac{1}{2}$



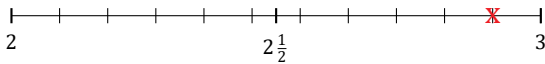
3.  $2\frac{3}{6} \simeq 2\frac{1}{2}$



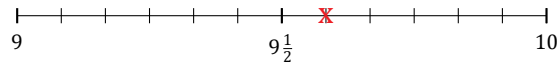
4.  $3\frac{11}{12} \simeq 4$



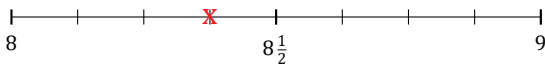
5.  $2\frac{10}{11} \simeq 3$



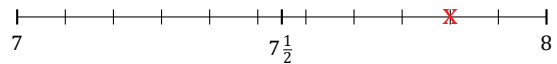
6.  $9\frac{7}{12} \simeq 9\frac{1}{2}$



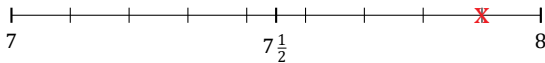
7.  $8\frac{3}{8} \simeq 8\frac{1}{2}$



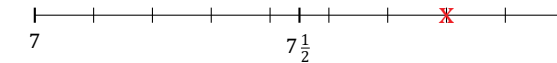
8.  $7\frac{9}{11} \simeq 8$



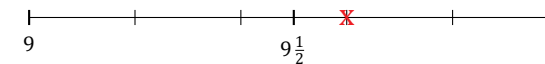
9.  $7\frac{8}{9} \simeq 8$



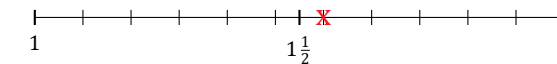
10.  $7\frac{7}{9} \simeq 8$



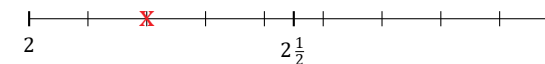
11.  $9\frac{3}{5} \simeq 9\frac{1}{2}$



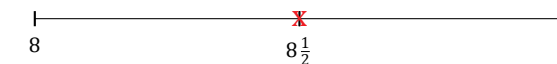
12.  $1\frac{6}{11} \simeq 1\frac{1}{2}$



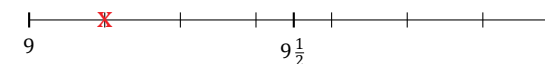
13.  $2\frac{2}{9} \simeq 2$



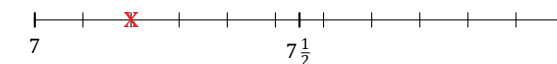
14.  $8\frac{1}{2} \simeq 8\frac{1}{2}$



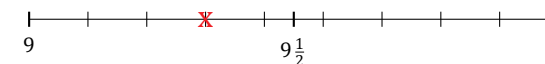
15.  $9\frac{1}{7} \simeq 9$



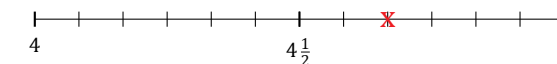
16.  $7\frac{2}{11} \simeq 7$



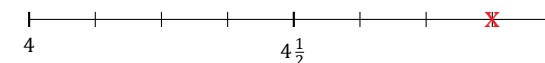
17.  $9\frac{3}{9} \simeq 9\frac{1}{2}$



18.  $4\frac{8}{12} \simeq 4\frac{1}{2}$



19.  $4\frac{7}{8} \simeq 5$



20.  $4\frac{5}{10} \simeq 4\frac{1}{2}$

