

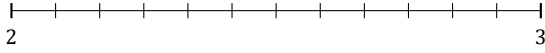
L'Arrondi de Nombres Mixtes (A)

Nom: _____

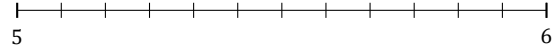
Date: _____

Arrondissez chaque nombre mixte au nombre entier le plus proche.
Arrondissez à l'entier supérieur en cas d'égalité.

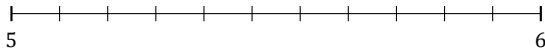
1. $2\frac{1}{12} \simeq$



2. $5\frac{7}{12} \simeq$



3. $5\frac{10}{11} \simeq$



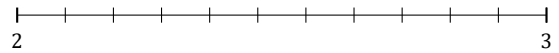
4. $4\frac{2}{7} \simeq$



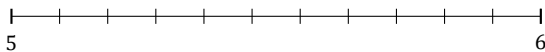
5. $2\frac{1}{5} \simeq$



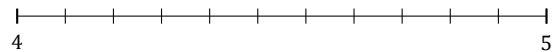
6. $2\frac{4}{11} \simeq$



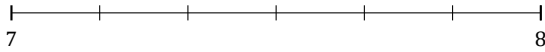
7. $5\frac{5}{11} \simeq$



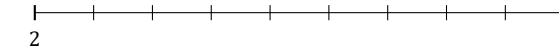
8. $4\frac{1}{11} \simeq$



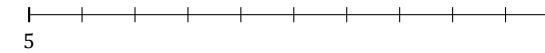
9. $7\frac{5}{6} \simeq$



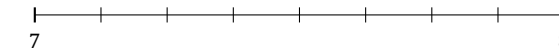
10. $2\frac{8}{9} \simeq$



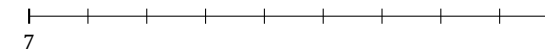
11. $5\frac{6}{10} \simeq$



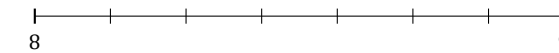
12. $7\frac{1}{8} \simeq$



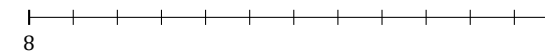
13. $7\frac{2}{9} \simeq$




14. $8\frac{1}{7} \simeq$



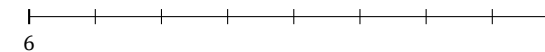
15. $8\frac{11}{12} \simeq$



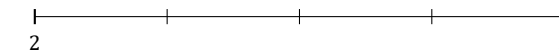
16. $3\frac{2}{5} \simeq$



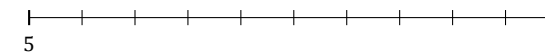
17. $6\frac{4}{8} \simeq$




18. $2\frac{2}{4} \simeq$



19. $5\frac{7}{10} \simeq$



20. $7\frac{1}{3} \simeq$



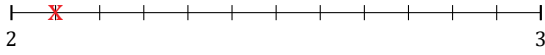
L'Arrondi de Nombres Mixtes (A) Réponses

Nom: _____

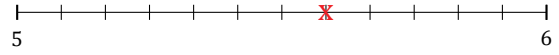
Date: _____

Arrondissez chaque nombre mixte au nombre entier le plus proche.
Arrondissez à l'entier supérieur en cas d'égalité.

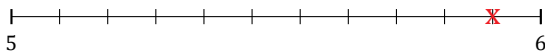
1. $2\frac{1}{12} \simeq 2$



2. $5\frac{7}{12} \simeq 6$



3. $5\frac{10}{11} \simeq 6$



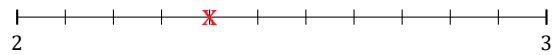
4. $4\frac{2}{7} \simeq 4$



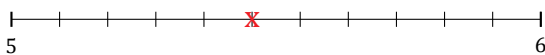
5. $2\frac{1}{5} \simeq 2$



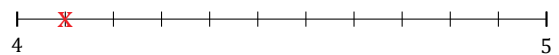
6. $2\frac{4}{11} \simeq 2$



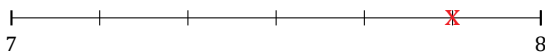
7. $5\frac{5}{11} \simeq 5$



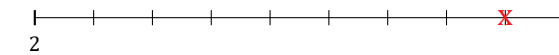
8. $4\frac{1}{11} \simeq 4$



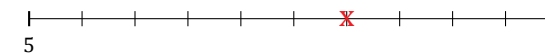
9. $7\frac{5}{6} \simeq 8$



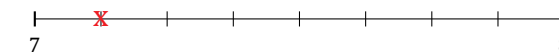
10. $2\frac{8}{9} \simeq 3$



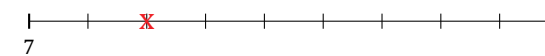
11. $5\frac{6}{10} \simeq 6$



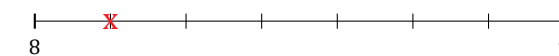
12. $7\frac{1}{8} \simeq 7$



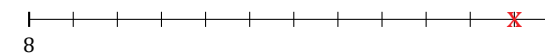
13. $7\frac{2}{9} \simeq 7$



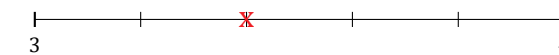
14. $8\frac{1}{7} \simeq 8$



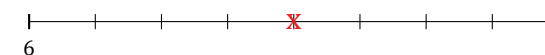
15. $8\frac{11}{12} \simeq 9$



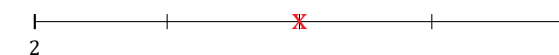
16. $3\frac{2}{5} \simeq 3$



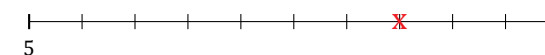
17. $6\frac{4}{8} \simeq 7$



18. $2\frac{2}{4} \simeq 3$



19. $5\frac{7}{10} \simeq 6$



20. $7\frac{1}{3} \simeq 7$



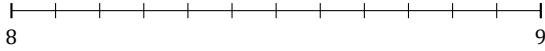
L'Arrondi de Nombres Mixtes (B)

Nom: _____

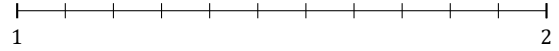
Date: _____

Arrondissez chaque nombre mixte au nombre entier le plus proche.
Arrondissez à l'entier supérieur en cas d'égalité.

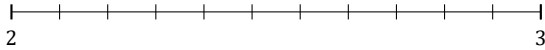
1. $8\frac{8}{12} \approx$



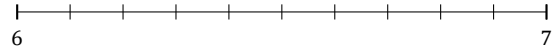
2. $1\frac{3}{11} \approx$



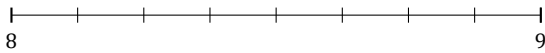
3. $2\frac{8}{11} \approx$



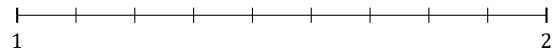
4. $6\frac{8}{10} \approx$



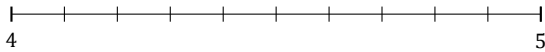
5. $8\frac{7}{8} \approx$




6. $1\frac{6}{9} \approx$



7. $4\frac{4}{10} \approx$



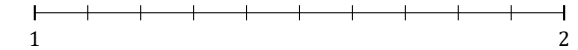
8. $7\frac{4}{9} \approx$



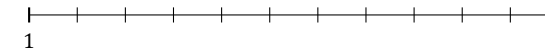
9. $9\frac{1}{9} \approx$



10. $1\frac{1}{10} \approx$



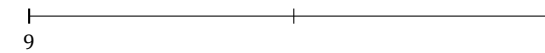
11. $1\frac{10}{11} \approx$



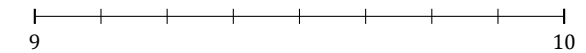
12. $1\frac{3}{7} \approx$



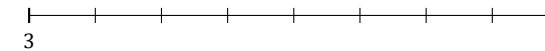
13. $9\frac{1}{2} \approx$



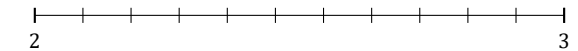
14. $9\frac{5}{8} \approx$




15. $3\frac{6}{8} \approx$



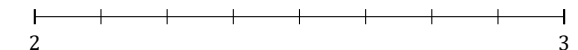
16. $2\frac{6}{11} \approx$



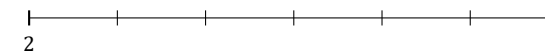
17. $3\frac{2}{3} \approx$



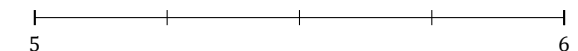
18. $2\frac{2}{8} \approx$



19. $2\frac{1}{6} \approx$



20. $5\frac{1}{4} \approx$



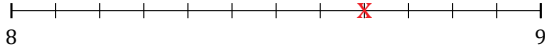
L'Arrondi de Nombres Mixtes (B) Réponses

Nom: _____

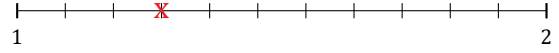
Date: _____

Arrondissez chaque nombre mixte au nombre entier le plus proche.
Arrondissez à l'entier supérieur en cas d'égalité.

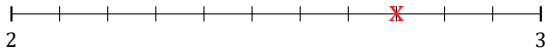
1. $8\frac{8}{12} \simeq 9$



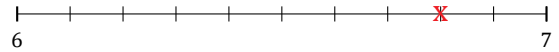
2. $1\frac{3}{11} \simeq 1$



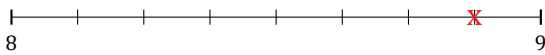
3. $2\frac{8}{11} \simeq 3$



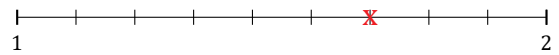
4. $6\frac{8}{10} \simeq 7$



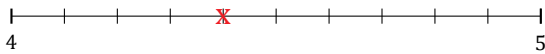
5. $8\frac{7}{8} \simeq 9$



6. $1\frac{6}{9} \simeq 2$



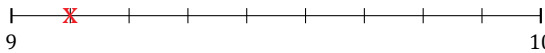
7. $4\frac{4}{10} \simeq 4$



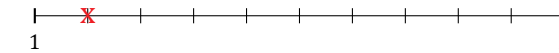
8. $7\frac{4}{9} \simeq 7$



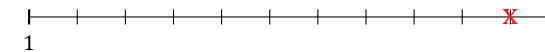
9. $9\frac{1}{9} \simeq 9$



10. $1\frac{1}{10} \simeq 1$



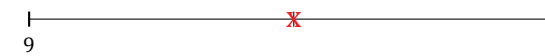
11. $1\frac{10}{11} \simeq 2$



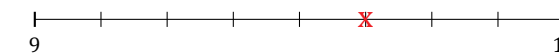
12. $1\frac{3}{7} \simeq 1$



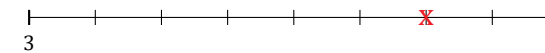
13. $9\frac{1}{2} \simeq 10$



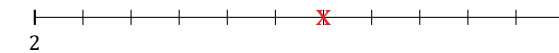
14. $9\frac{5}{8} \simeq 10$




15. $3\frac{6}{8} \simeq 4$



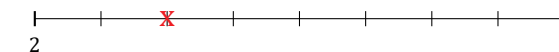
16. $2\frac{6}{11} \simeq 3$



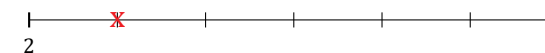
17. $3\frac{2}{3} \simeq 4$



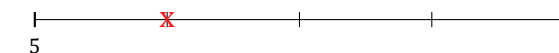
18. $2\frac{2}{8} \simeq 2$



19. $2\frac{1}{6} \simeq 2$



20. $5\frac{1}{4} \simeq 5$



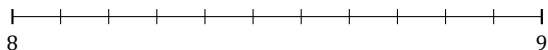
L'Arrondi de Nombres Mixtes (C)

Nom: _____

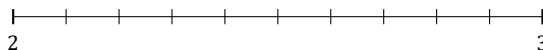
Date: _____

Arrondissez chaque nombre mixte au nombre entier le plus proche.
Arrondissez à l'entier supérieur en cas d'égalité.

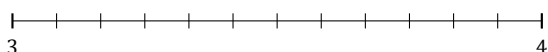
1. $8\frac{4}{11} \approx$



2. $2\frac{2}{10} \approx$



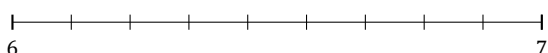
3. $3\frac{1}{12} \approx$



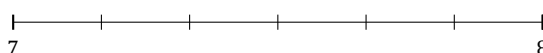
4. $3\frac{4}{5} \approx$



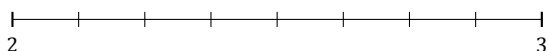
5. $6\frac{6}{9} \approx$



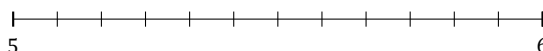
6. $7\frac{2}{6} \approx$




7. $2\frac{4}{8} \approx$



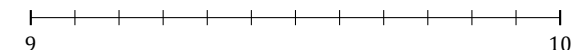
8. $5\frac{6}{12} \approx$



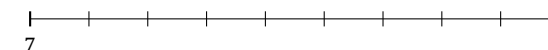
9. $4\frac{2}{3} \approx$




10. $9\frac{3}{12} \approx$



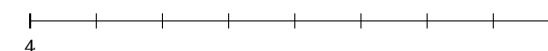
11. $7\frac{7}{9} \approx$



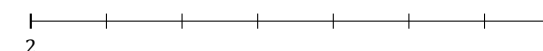
12. $5\frac{3}{5} \approx$



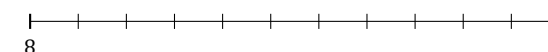
13. $4\frac{2}{8} \approx$



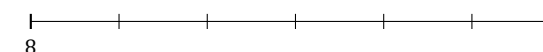
14. $2\frac{2}{7} \approx$



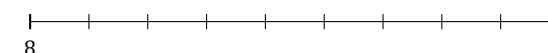
15. $8\frac{8}{11} \approx$



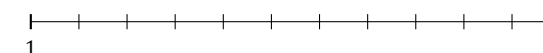
16. $8\frac{1}{6} \approx$



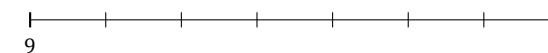
17. $8\frac{4}{9} \approx$



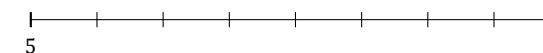
18. $1\frac{1}{11} \approx$



19. $9\frac{4}{7} \approx$



20. $5\frac{3}{8} \approx$



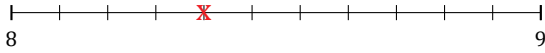
L'Arrondi de Nombres Mixtes (C) Réponses

Nom: _____

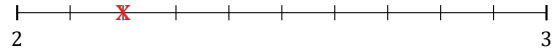
Date: _____

Arrondissez chaque nombre mixte au nombre entier le plus proche.
Arrondissez à l'entier supérieur en cas d'égalité.

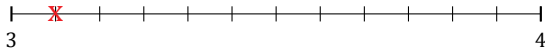
1. $8\frac{4}{11} \simeq 8$



2. $2\frac{2}{10} \simeq 2$




3. $3\frac{1}{12} \simeq 3$



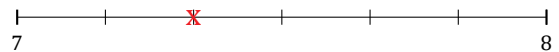
4. $3\frac{4}{5} \simeq 4$



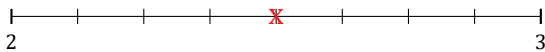
5. $6\frac{6}{9} \simeq 7$



6. $7\frac{2}{6} \simeq 7$




7. $2\frac{4}{8} \simeq 3$



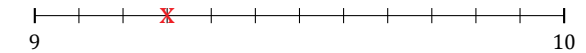
8. $5\frac{6}{12} \simeq 6$



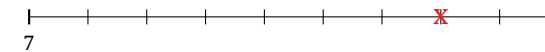
9. $4\frac{2}{3} \simeq 5$




10. $9\frac{3}{12} \simeq 9$



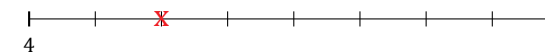
11. $7\frac{7}{9} \simeq 8$



12. $5\frac{3}{5} \simeq 6$



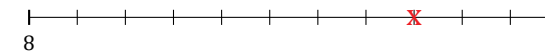
13. $4\frac{2}{8} \simeq 4$



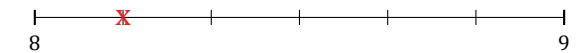
14. $2\frac{2}{7} \simeq 2$



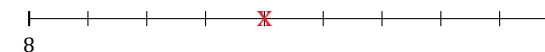
15. $8\frac{8}{11} \simeq 9$



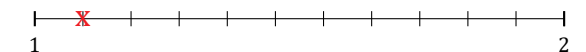
16. $8\frac{1}{6} \simeq 8$



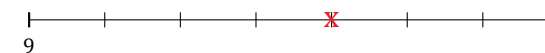
17. $8\frac{4}{9} \simeq 8$



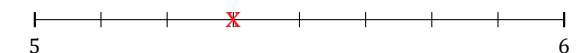
18. $1\frac{1}{11} \simeq 1$



19. $9\frac{4}{7} \simeq 10$



20. $5\frac{3}{8} \simeq 5$



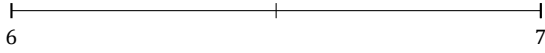
L'Arrondi de Nombres Mixtes (D)

Nom: _____

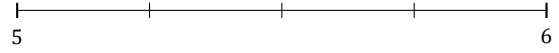
Date: _____

Arrondissez chaque nombre mixte au nombre entier le plus proche.
Arrondissez à l'entier supérieur en cas d'égalité.

1. $6\frac{1}{2} \approx$



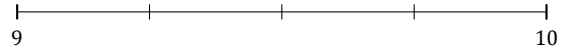
2. $5\frac{3}{4} \approx$



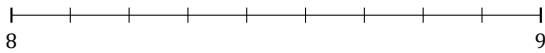
3. $9\frac{2}{5} \approx$



4. $9\frac{2}{4} \approx$




5. $8\frac{2}{9} \approx$



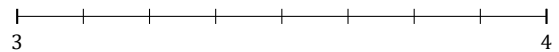
6. $2\frac{3}{5} \approx$



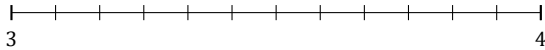
7. $9\frac{1}{5} \approx$



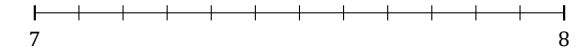
8. $3\frac{7}{8} \approx$



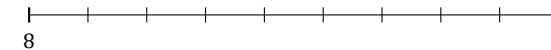
9. $3\frac{2}{12} \approx$



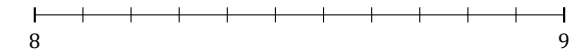
10. $7\frac{5}{12} \approx$



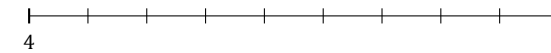
11. $8\frac{8}{9} \approx$



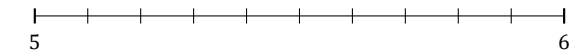
12. $8\frac{2}{11} \approx$



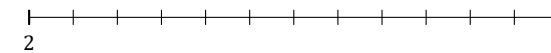
13. $4\frac{4}{9} \approx$



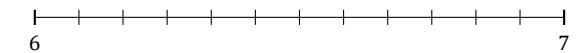
14. $5\frac{3}{10} \approx$




15. $2\frac{1}{12} \approx$



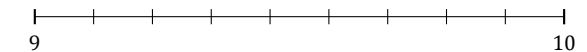
16. $6\frac{6}{12} \approx$



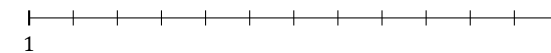
17. $1\frac{4}{5} \approx$



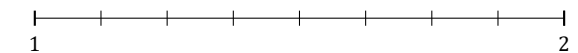
18. $9\frac{6}{9} \approx$



19. $1\frac{4}{12} \approx$



20. $1\frac{5}{8} \approx$



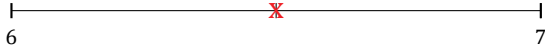
L'Arrondi de Nombres Mixtes (D) Réponses

Nom: _____

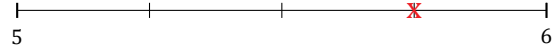
Date: _____

Arrondissez chaque nombre mixte au nombre entier le plus proche.
Arrondissez à l'entier supérieur en cas d'égalité.

1. $6\frac{1}{2} \simeq 7$



2. $5\frac{3}{4} \simeq 6$



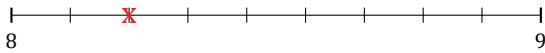
3. $9\frac{2}{5} \simeq 9$



4. $9\frac{2}{4} \simeq 10$




5. $8\frac{2}{9} \simeq 8$



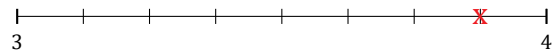
6. $2\frac{3}{5} \simeq 3$



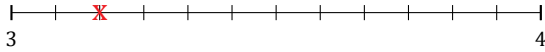
7. $9\frac{1}{5} \simeq 9$



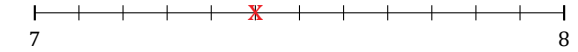
8. $3\frac{7}{8} \simeq 4$



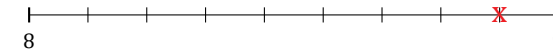
9. $3\frac{2}{12} \simeq 3$



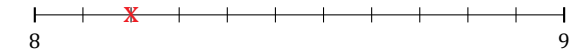
10. $7\frac{5}{12} \simeq 7$



11. $8\frac{8}{9} \simeq 9$



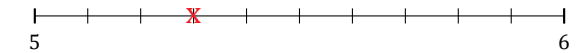
12. $8\frac{2}{11} \simeq 8$



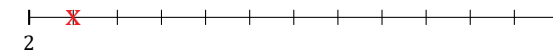
13. $4\frac{4}{9} \simeq 4$



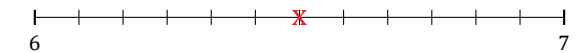
14. $5\frac{3}{10} \simeq 5$




15. $2\frac{1}{12} \simeq 2$



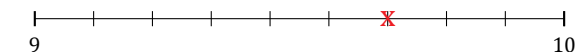
16. $6\frac{6}{12} \simeq 7$



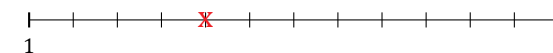
17. $1\frac{4}{5} \simeq 2$



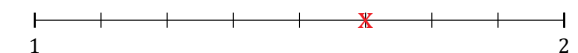
18. $9\frac{6}{9} \simeq 10$



19. $1\frac{4}{12} \simeq 1$



20. $1\frac{5}{8} \simeq 2$



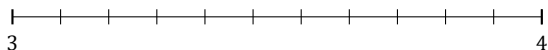
L'Arrondi de Nombres Mixtes (E)

Nom: _____


Date: _____

Arrondissez chaque nombre mixte au nombre entier le plus proche.
Arrondissez à l'entier supérieur en cas d'égalité.

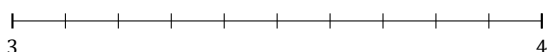
1. $3\frac{5}{11} \approx$



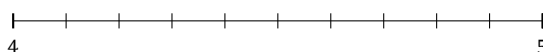
2. $3\frac{6}{7} \approx$



3. $3\frac{3}{10} \approx$



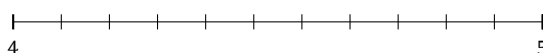
4. $4\frac{5}{10} \approx$



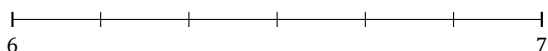
5. $7\frac{4}{7} \approx$



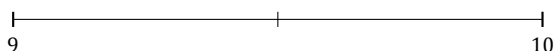
6. $4\frac{9}{11} \approx$



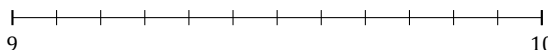
7. $6\frac{3}{6} \approx$



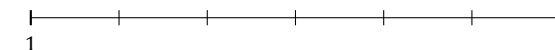
8. $9\frac{1}{2} \approx$



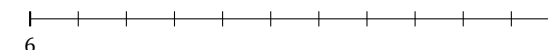
9. $9\frac{3}{12} \approx$



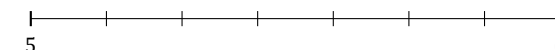
10. $1\frac{4}{6} \approx$



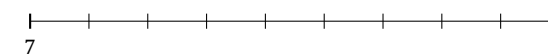
11. $6\frac{4}{11} \approx$



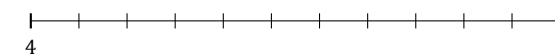
12. $5\frac{3}{7} \approx$



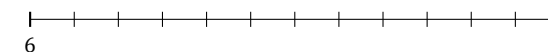
13. $7\frac{8}{9} \approx$




14. $4\frac{8}{11} \approx$



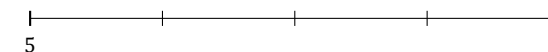
15. $6\frac{4}{12} \approx$



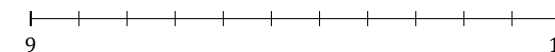
16. $7\frac{3}{5} \approx$



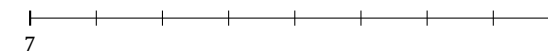
17. $5\frac{3}{4} \approx$



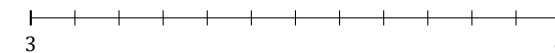
18. $9\frac{1}{11} \approx$



19. $7\frac{5}{8} \approx$



20. $3\frac{2}{12} \approx$



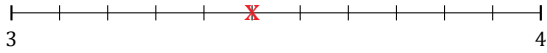
L'Arrondi de Nombres Mixtes (E) Réponses

Nom: _____

Date: _____

Arrondissez chaque nombre mixte au nombre entier le plus proche.
Arrondissez à l'entier supérieur en cas d'égalité.

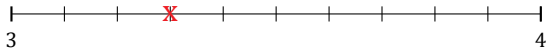
1. $3\frac{5}{11} \simeq 3$



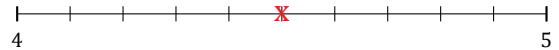
2. $3\frac{6}{7} \simeq 4$



3. $3\frac{3}{10} \simeq 3$



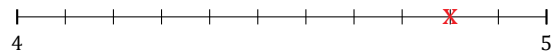
4. $4\frac{5}{10} \simeq 5$



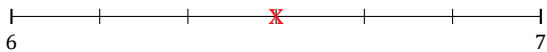
5. $7\frac{4}{7} \simeq 8$



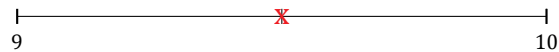
6. $4\frac{9}{11} \simeq 5$



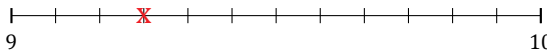
7. $6\frac{3}{6} \simeq 7$



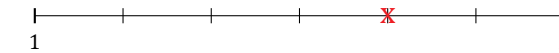
8. $9\frac{1}{2} \simeq 10$



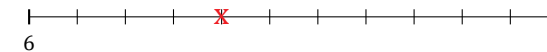
9. $9\frac{3}{12} \simeq 9$



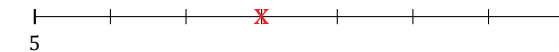
10. $1\frac{4}{6} \simeq 2$



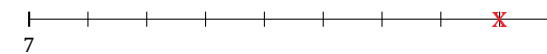
11. $6\frac{4}{11} \simeq 6$



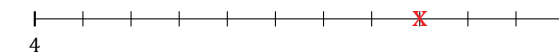
12. $5\frac{3}{7} \simeq 5$



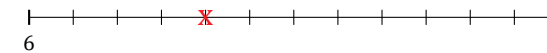
13. $7\frac{8}{9} \simeq 8$




14. $4\frac{8}{11} \simeq 5$



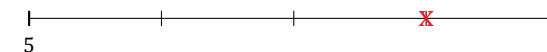
15. $6\frac{4}{12} \simeq 6$



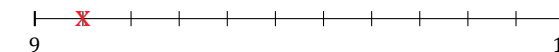
16. $7\frac{3}{5} \simeq 8$



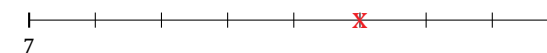
17. $5\frac{3}{4} \simeq 6$



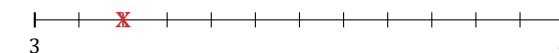
18. $9\frac{1}{11} \simeq 9$



19. $7\frac{5}{8} \simeq 8$



20. $3\frac{2}{12} \simeq 3$




L'Arrondi de Nombres Mixtes (F)

Nom: _____

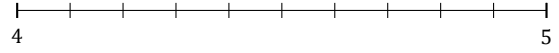
Date: _____

Arrondissez chaque nombre mixte au nombre entier le plus proche.
Arrondissez à l'entier supérieur en cas d'égalité.

1. $8\frac{1}{3} \approx$




2. $4\frac{2}{10} \approx$



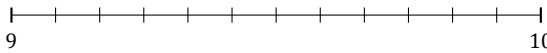
3. $1\frac{5}{9} \approx$



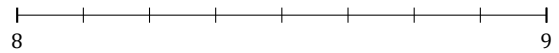
4. $5\frac{2}{5} \approx$



5. $9\frac{7}{12} \approx$




6. $8\frac{4}{8} \approx$



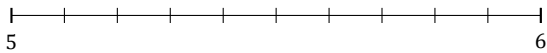
7. $4\frac{1}{7} \approx$



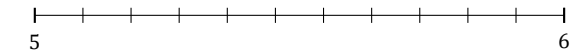
8. $2\frac{1}{5} \approx$



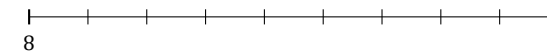
9. $5\frac{8}{10} \approx$



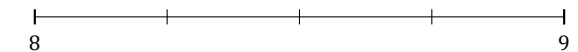
10. $5\frac{4}{11} \approx$



11. $8\frac{7}{9} \approx$



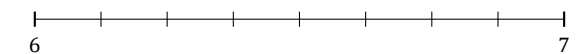
12. $8\frac{2}{4} \approx$



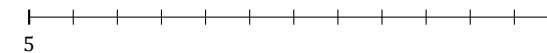
13. $7\frac{4}{5} \approx$




14. $6\frac{6}{8} \approx$



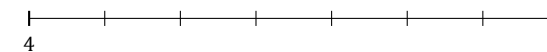
15. $5\frac{8}{12} \approx$



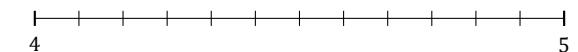
16. $5\frac{5}{7} \approx$



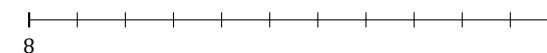
17. $4\frac{2}{7} \approx$



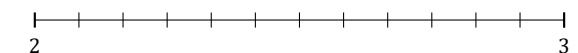
18. $4\frac{10}{12} \approx$



19. $8\frac{2}{11} \approx$



20. $2\frac{5}{12} \approx$




L'Arrondi de Nombres Mixtes (F) Réponses

Nom: _____

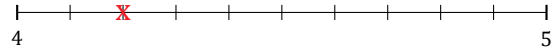
Date: _____

Arrondissez chaque nombre mixte au nombre entier le plus proche.
Arrondissez à l'entier supérieur en cas d'égalité.

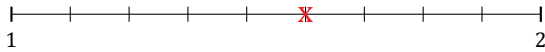
1. $8\frac{1}{3} \simeq 8$



2. $4\frac{2}{10} \simeq 4$



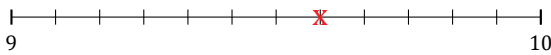
3. $1\frac{5}{9} \simeq 2$




4. $5\frac{2}{5} \simeq 5$



5. $9\frac{7}{12} \simeq 10$




6. $8\frac{4}{8} \simeq 9$



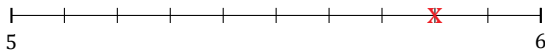
7. $4\frac{1}{7} \simeq 4$



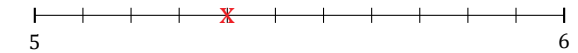
8. $2\frac{1}{5} \simeq 2$



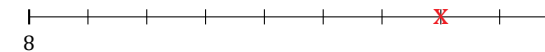
9. $5\frac{8}{10} \simeq 6$



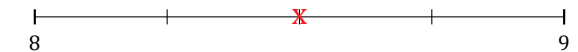
10. $5\frac{4}{11} \simeq 5$



11. $8\frac{7}{9} \simeq 9$



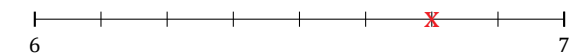
12. $8\frac{2}{4} \simeq 9$



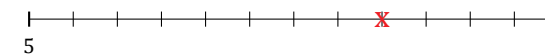
13. $7\frac{4}{5} \simeq 8$



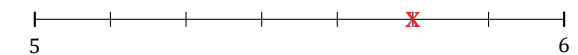
14. $6\frac{6}{8} \simeq 7$



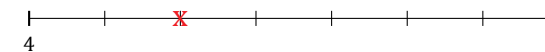
15. $5\frac{8}{12} \simeq 6$



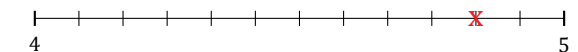
16. $5\frac{5}{7} \simeq 6$



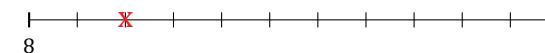
17. $4\frac{2}{7} \simeq 4$



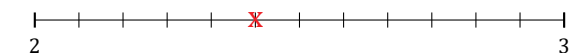
18. $4\frac{10}{12} \simeq 5$



19. $8\frac{2}{11} \simeq 8$



20. $2\frac{5}{12} \simeq 2$



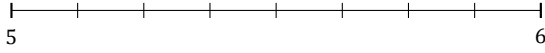
L'Arrondi de Nombres Mixtes (G)

Nom: _____

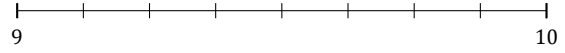
Date: _____

Arrondissez chaque nombre mixte au nombre entier le plus proche.
Arrondissez à l'entier supérieur en cas d'égalité.

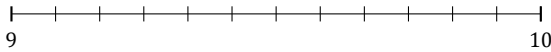
1. $5\frac{1}{8} \approx$



2. $9\frac{3}{8} \approx$



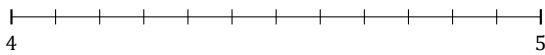
3. $9\frac{2}{12} \approx$



4. $8\frac{4}{5} \approx$




5. $4\frac{11}{12} \approx$



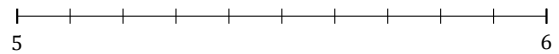
6. $3\frac{1}{3} \approx$



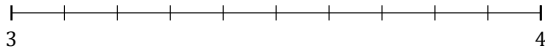
7. $8\frac{5}{7} \approx$



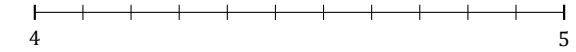
8. $5\frac{8}{10} \approx$



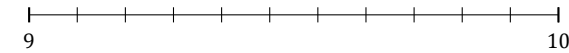
9. $3\frac{5}{10} \approx$



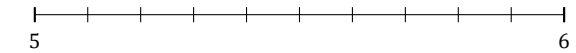
10. $4\frac{1}{11} \approx$



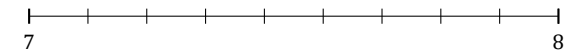
11. $9\frac{4}{11} \approx$



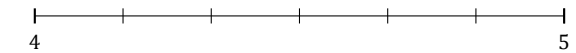
12. $5\frac{2}{10} \approx$



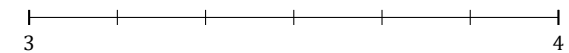
13. $7\frac{1}{9} \approx$



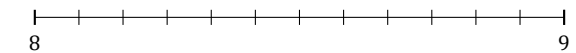
14. $4\frac{1}{6} \approx$



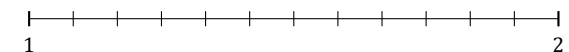
15. $3\frac{3}{6} \approx$



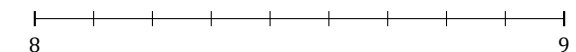
16. $8\frac{6}{12} \approx$



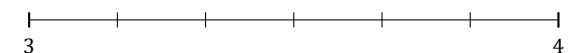
17. $1\frac{10}{12} \approx$



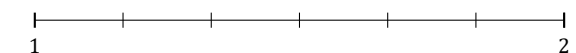
18. $8\frac{7}{9} \approx$



19. $3\frac{4}{6} \approx$



20. $1\frac{5}{6} \approx$



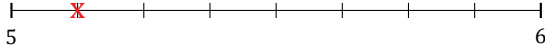
L'Arrondi de Nombres Mixtes (G) Réponses

Nom: _____

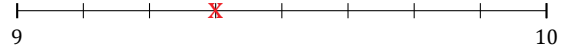
Date: _____

Arrondissez chaque nombre mixte au nombre entier le plus proche.
Arrondissez à l'entier supérieur en cas d'égalité.

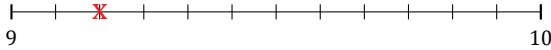
1. $5\frac{1}{8} \simeq 5$



2. $9\frac{3}{8} \simeq 9$



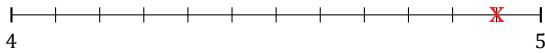
3. $9\frac{2}{12} \simeq 9$



4. $8\frac{4}{5} \simeq 9$




5. $4\frac{11}{12} \simeq 5$



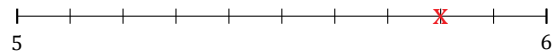
6. $3\frac{1}{3} \simeq 3$



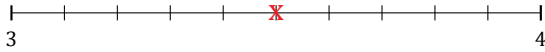
7. $8\frac{5}{7} \simeq 9$



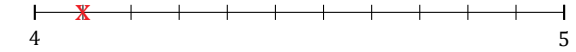
8. $5\frac{8}{10} \simeq 6$



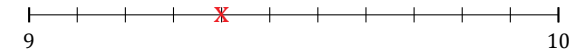
9. $3\frac{5}{10} \simeq 4$



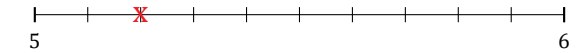
10. $4\frac{1}{11} \simeq 4$



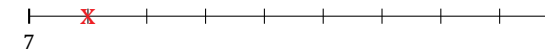
11. $9\frac{4}{11} \simeq 9$



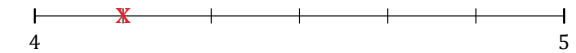
12. $5\frac{2}{10} \simeq 5$



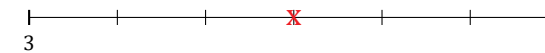
13. $7\frac{1}{9} \simeq 7$



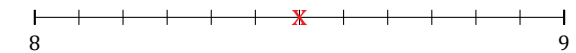
14. $4\frac{1}{6} \simeq 4$



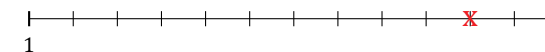
15. $3\frac{3}{6} \simeq 4$



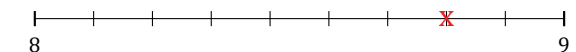
16. $8\frac{6}{12} \simeq 9$



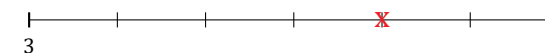
17. $1\frac{10}{12} \simeq 2$



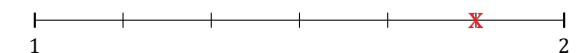
18. $8\frac{7}{9} \simeq 9$



19. $3\frac{4}{6} \simeq 4$



20. $1\frac{5}{6} \simeq 2$



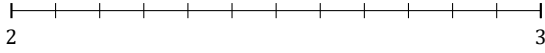
L'Arrondi de Nombres Mixtes (H)

Nom: _____

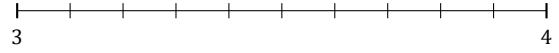
Date: _____

Arrondissez chaque nombre mixte au nombre entier le plus proche.
Arrondissez à l'entier supérieur en cas d'égalité.

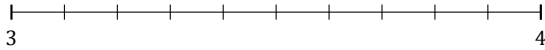
1. $2\frac{4}{12} \approx$



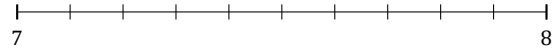
2. $3\frac{6}{10} \approx$



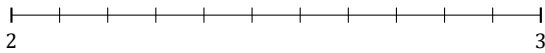
3. $3\frac{5}{10} \approx$



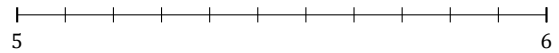
4. $7\frac{9}{10} \approx$



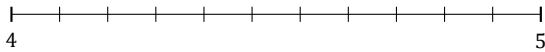
5. $2\frac{9}{11} \approx$



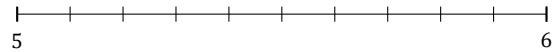
6. $5\frac{4}{11} \approx$



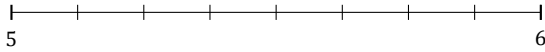
7. $4\frac{5}{11} \approx$



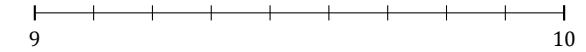
8. $5\frac{4}{10} \approx$



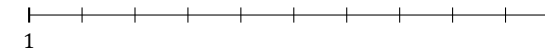
9. $5\frac{7}{8} \approx$



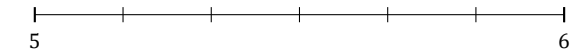
10. $9\frac{5}{9} \approx$



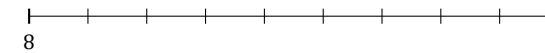
11. $1\frac{2}{10} \approx$



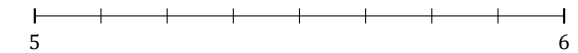
12. $5\frac{2}{6} \approx$



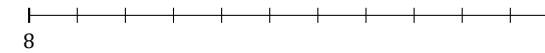
13. $8\frac{1}{9} \approx$



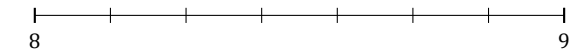
14. $5\frac{3}{8} \approx$



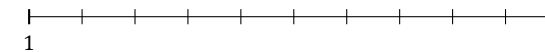
15. $8\frac{10}{11} \approx$



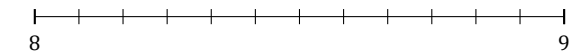
16. $8\frac{6}{7} \approx$



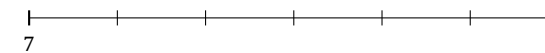
17. $1\frac{7}{10} \approx$




18. $8\frac{11}{12} \approx$



19. $7\frac{4}{6} \approx$



20. $8\frac{1}{5} \approx$



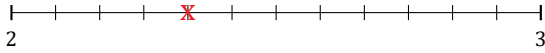
L'Arrondi de Nombres Mixtes (H) Réponses

Nom: _____

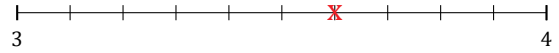
Date: _____

Arrondissez chaque nombre mixte au nombre entier le plus proche.
Arrondissez à l'entier supérieur en cas d'égalité.


1. $2\frac{4}{12} \simeq 2$



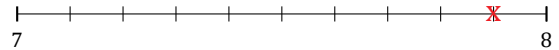
2. $3\frac{6}{10} \simeq 4$



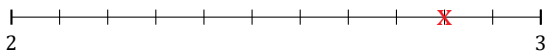
3. $3\frac{5}{10} \simeq 4$



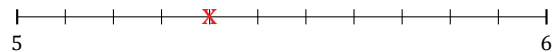
4. $7\frac{9}{10} \simeq 8$




5. $2\frac{9}{11} \simeq 3$



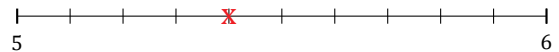
6. $5\frac{4}{11} \simeq 5$



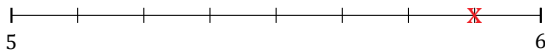
7. $4\frac{5}{11} \simeq 4$



8. $5\frac{4}{10} \simeq 5$



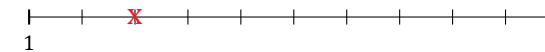
9. $5\frac{7}{8} \simeq 6$



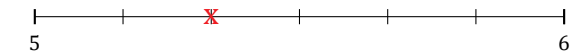
10. $9\frac{5}{9} \simeq 10$



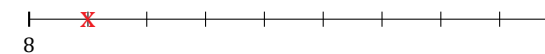
11. $1\frac{2}{10} \simeq 1$



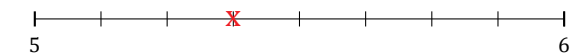
12. $5\frac{2}{6} \simeq 5$



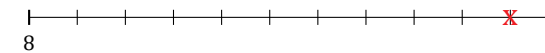
13. $8\frac{1}{9} \simeq 8$



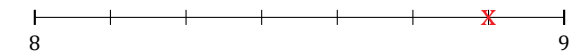
14. $5\frac{3}{8} \simeq 5$



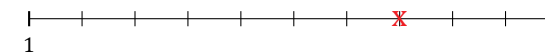
15. $8\frac{10}{11} \simeq 9$



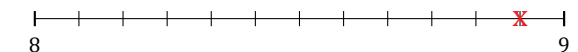
16. $8\frac{6}{7} \simeq 9$



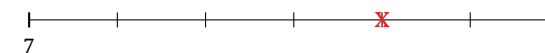
17. $1\frac{7}{10} \simeq 2$




18. $8\frac{11}{12} \simeq 9$



19. $7\frac{4}{6} \simeq 8$



20. $8\frac{1}{5} \simeq 8$



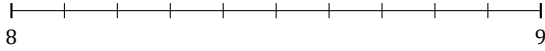
L'Arrondi de Nombres Mixtes (I)

Nom: _____

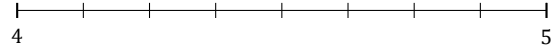
Date: _____

Arrondissez chaque nombre mixte au nombre entier le plus proche.
Arrondissez à l'entier supérieur en cas d'égalité.

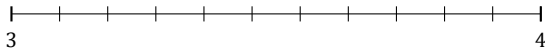
1. $8\frac{7}{10} \approx$



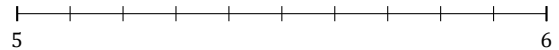
2. $4\frac{1}{8} \approx$



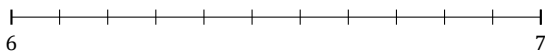
3. $3\frac{9}{11} \approx$



4. $5\frac{2}{10} \approx$




5. $6\frac{10}{11} \approx$



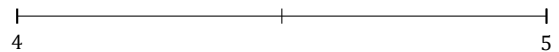
6. $4\frac{5}{9} \approx$



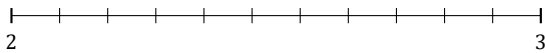
7. $6\frac{2}{7} \approx$



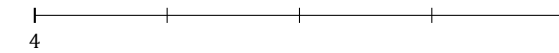
8. $4\frac{1}{2} \approx$



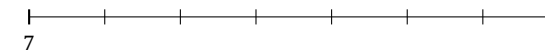
9. $2\frac{8}{11} \approx$




10. $4\frac{2}{4} \approx$



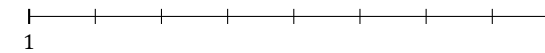
11. $7\frac{3}{7} \approx$



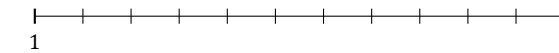
12. $9\frac{2}{3} \approx$



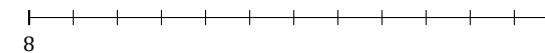
13. $1\frac{5}{8} \approx$



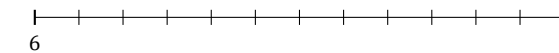
14. $1\frac{3}{11} \approx$



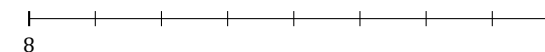
15. $8\frac{5}{12} \approx$



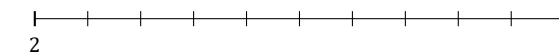
16. $6\frac{9}{12} \approx$



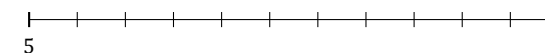
17. $8\frac{4}{8} \approx$




18. $2\frac{6}{10} \approx$



19. $5\frac{4}{11} \approx$



20. $4\frac{2}{5} \approx$



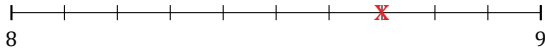
L'Arrondi de Nombres Mixtes (I) Réponses

Nom: _____

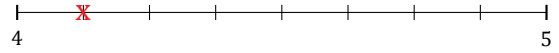
Date: _____

Arrondissez chaque nombre mixte au nombre entier le plus proche.
Arrondissez à l'entier supérieur en cas d'égalité.

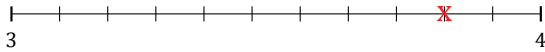
1. $8\frac{7}{10} \simeq 9$



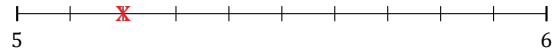
2. $4\frac{1}{8} \simeq 4$



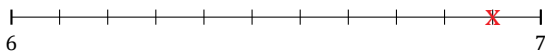
3. $3\frac{9}{11} \simeq 4$



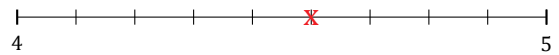
4. $5\frac{2}{10} \simeq 5$




5. $6\frac{10}{11} \simeq 7$



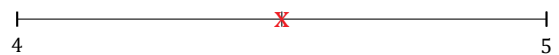
6. $4\frac{5}{9} \simeq 5$



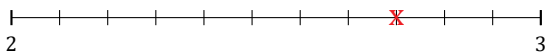
7. $6\frac{2}{7} \simeq 6$



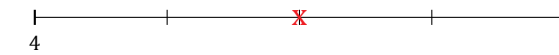
8. $4\frac{1}{2} \simeq 5$



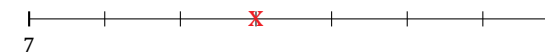
9. $2\frac{8}{11} \simeq 3$



10. $4\frac{2}{4} \simeq 5$



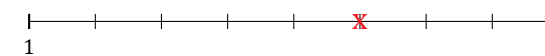
11. $7\frac{3}{7} \simeq 7$



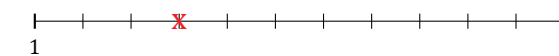
12. $9\frac{2}{3} \simeq 10$



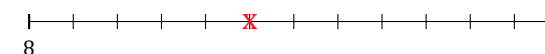
13. $1\frac{5}{8} \simeq 2$



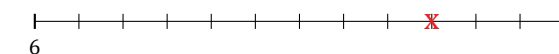
14. $1\frac{3}{11} \simeq 1$



15. $8\frac{5}{12} \simeq 8$



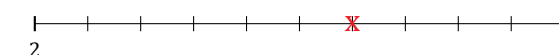
16. $6\frac{9}{12} \simeq 7$



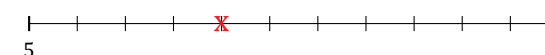
17. $8\frac{4}{8} \simeq 9$



18. $2\frac{6}{10} \simeq 3$



19. $5\frac{4}{11} \simeq 5$



20. $4\frac{2}{5} \simeq 4$



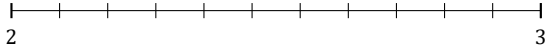
L'Arrondi de Nombres Mixtes (J)

Nom: _____

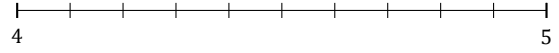
Date: _____

Arrondissez chaque nombre mixte au nombre entier le plus proche.
Arrondissez à l'entier supérieur en cas d'égalité.

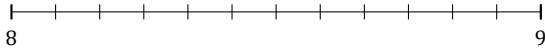
1. $2\frac{4}{11} \approx$



2. $4\frac{1}{10} \approx$



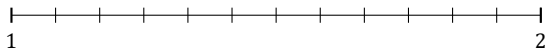
3. $8\frac{9}{12} \approx$



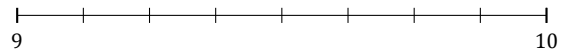
4. $9\frac{1}{3} \approx$



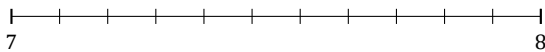
5. $1\frac{2}{12} \approx$



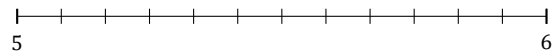
6. $9\frac{5}{8} \approx$



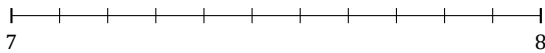
7. $7\frac{6}{11} \approx$



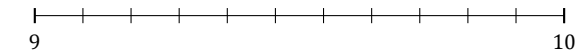
8. $5\frac{5}{12} \approx$



9. $7\frac{2}{11} \approx$



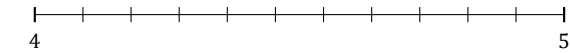
10. $9\frac{8}{11} \approx$



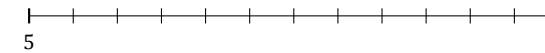
11. $1\frac{3}{5} \approx$



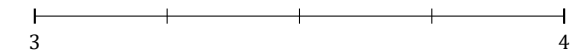
12. $4\frac{3}{11} \approx$



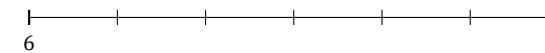
13. $5\frac{11}{12} \approx$



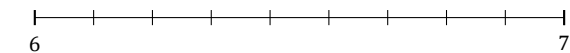
14. $3\frac{2}{4} \approx$



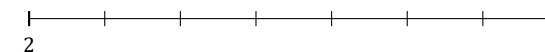
15. $6\frac{2}{6} \approx$



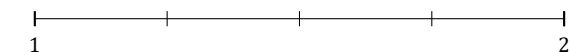
16. $6\frac{5}{9} \approx$



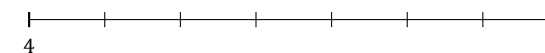
17. $2\frac{3}{7} \approx$



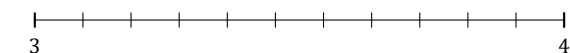
18. $1\frac{3}{4} \approx$



19. $4\frac{4}{7} \approx$



20. $3\frac{5}{11} \approx$



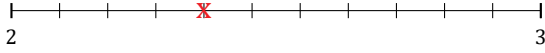
L'Arrondi de Nombres Mixtes (J) Réponses

Nom: _____

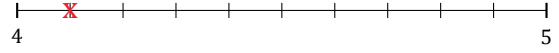
Date: _____

Arrondissez chaque nombre mixte au nombre entier le plus proche.
Arrondissez à l'entier supérieur en cas d'égalité.

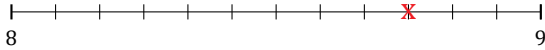
1. $2\frac{4}{11} \simeq 2$



2. $4\frac{1}{10} \simeq 4$



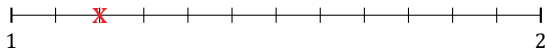
3. $8\frac{9}{12} \simeq 9$



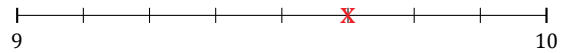
4. $9\frac{1}{3} \simeq 9$



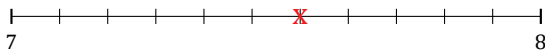
5. $1\frac{2}{12} \simeq 1$



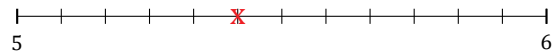
6. $9\frac{5}{8} \simeq 10$



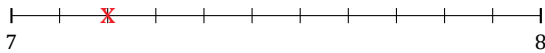
7. $7\frac{6}{11} \simeq 8$



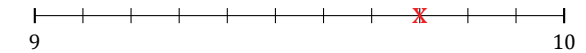
8. $5\frac{5}{12} \simeq 5$



9. $7\frac{2}{11} \simeq 7$



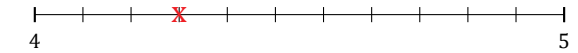
10. $9\frac{8}{11} \simeq 10$



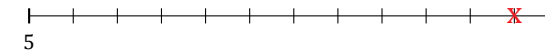
11. $1\frac{3}{5} \simeq 2$



12. $4\frac{3}{11} \simeq 4$



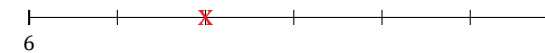
13. $5\frac{11}{12} \simeq 6$



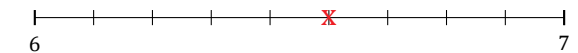
14. $3\frac{2}{4} \simeq 4$



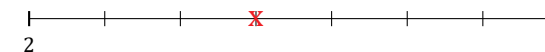
15. $6\frac{2}{6} \simeq 6$



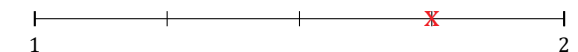
16. $6\frac{5}{9} \simeq 7$



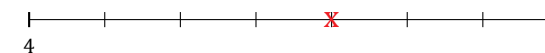
17. $2\frac{3}{7} \simeq 2$



18. $1\frac{3}{4} \simeq 2$



19. $4\frac{4}{7} \simeq 5$



20. $3\frac{5}{11} \simeq 3$

